



All rights reserved. No part of this publication may be reproduced, distributed, or transmitted in any form or by any means, electronic, mechanical, photocopying, recording or otherwise, or stored in any retrieval system of any nature without the permission of cracku.in, application for which shall be made to support@cracku.in

SSC CHSL 16th March 2023 Shift-4

English Language

1. Choose the word that is opposite in meaning to the given word.

Pliable

- A** Rigid
- B** Fluid
- C** Variable
- D** Ductile

Answer: A

2. Rearrange the parts of the sentence in correct order.

From the

P. California to the pork hub of China,

Q. reduced food supplies and sharply increased food prices

R. grain heartland of Argentina to the tomato belt of

S. extreme weather events in 2021 have

- A** RPQS
- B** RPSQ
- C** QPRS
- D** SPQR

Answer: B

3. Select the word that is closest in meaning (SYNONYM) to the word given below.

Dreary

- A** Faith
- B** Dull
- C** Superstitious
- D** Active

Answer: B

4. Select the most appropriate option to fill in the blank.

While one cannot really say the pandemic is over yet, it is a sensible decision to now _____ to the older system.

- A** sympathise
- B** comprehend
- C** revert
- D** stick

Answer: C

SSC CHSL Free Mock Test

5. **Select the most appropriate meaning of the given idiom.**

Piece of cake

- A** Extremely difficult
- B** Something which is very simple
- C** Intuition for something dangerous
- D** Invitation for birthday

Answer: B

6. **Choose the word that means the same as the given word.**

Ecclesial

- A** Profane
- B** Secular
- C** Profuse
- D** Churchly

Answer: D

7. **Fill in the blank with an appropriate option.**

Choosing the right software for any purpose can be a/an _____ task for any business.

- A** intimidating
- B** challenging
- C** flickering
- D** attributing

Answer: B

SSC CHSL Previous Papers (DOWNLOAD PDF)

8. In the following question, out of the given four alternatives, select the alternative which best expresses the meaning of the Idiom/Phrase.

To breast the tape

- A** To shut someone's mouth
- B** To create problems
- C** To bring joy
- D** To win a race

Answer: D

9. Find the part of the given sentence that has an error in it. If there is no error, choose 'No error'.
There is evidence that much too technology can lead to a loss of child development opportunities.

- A** No error
- B** technology can lead to a
- C** loss of child development opportunities.
- D** There is evidence that much too

Answer: D

10. Some parts of a few sentences have been jumbled up, and labelled A, B, C and D.
Select the option that gives the correct sequence in which these parts can be rearranged to form a meaningful and grammatically correct sentence.

I knew that the remedy lay not

- A.** let the past go. Be at ease. Allow the future
- B.** Rohan had advised me over and again:
- C.** to arrive at its own pace
- D.** in finding a new flower but in what unfurling its secrets when it will.

- A** DBAC
- B** DACB
- C** CDBA
- D** ACDB

Answer: A

SSC CGL Previous Papers (DOWNLOAD PDF)

11. Identify the segment in the sentence which contains a grammatical error. If there is no error, then select the option "No error".

The London-based Brodsky/ Quartet, meanwhile, is one of/ the world's leading string quartet.

- A The London-based Brodsky
- B the world's leading string quartet.
- C Quartet, meanwhile, is one of
- D No error

Answer: B

12. Select the correct passive form of the given sentence.
Swallows build new nests every year.

- A New nests were built by swallows every year.
- B New nests are built by swallows every year.
- C New nests were being built by swallows every year.
- D New nests is being built by swallows every year

Answer: B

13. Select the correctly spelt word.

- A Amatuer
- B Amateuer
- C Amture
- D Amateur

Answer: D

SSC CGL Free Mock Test (Latest Pattern)

14. Select the correctly spelt word

- A Reprimand
- B Repriment
- C Reprimend
- D Reprimant

Answer: A

15. Choose the option that is the correct direct form of the sentence.
The teacher asked me if I had seen the match.

- A "Did you see the match?" the teacher said to me.
- B "Did you had saw the match?" the teacher said to me.
- C "Did you saw the match?" the teacher said to me.
- D "Did you seen the match?" the teacher said to me.

Answer: A

16. Improve the underlined part of the sentence. Choose 'No improvement' as an answer if the sentence is grammatically correct.

I can't concentrate on my work because I am thinking off that beautiful scene.

- A was think of
- B am thinking about
- C is thinking about
- D No improvement

Answer: B

SSC CHSL Important Questions and Answers (Download PDF)

17. Select the word that is closest in meaning (SYNONYM) to the word given below.
UNBIASED

- A UNCOMPLAINING
- B CANDID
- C SAPIENT
- D HUMBLE

Answer: B

18. Given below are four jumbled sentences. Pick the option that gives their correct order.

P. Amongst all the cities of Japan, Hiroshima is the one that experiences earliest mornings.

Q. It experiences the earliest sun rise amongst all the countries.

R. According to the words of the Japanese envoy himself, that name was chosen because the country was so close to where the sun rises.

S. Japan is also known as the land of the rising sun.

- A** SRQP
- B** PSQR
- C** QPRS
- D** SQRP

Answer: D

19. Select the option that will improve the underlined part of the sentence. In case no improvement is needed, select 'No improvement'.

Neither of the two companies are winning in the price war.

- A** Neither of two company is winning
- B** Neither of the companies are winning
- C** Neither of the two companies is winning
- D** No improvement

Answer: C

SSC CHSL Study Material

20. Fill in the blank with an appropriate option.

Do you _____ your tap water before drinking?

- A** flush
- B** filter
- C** flirt
- D** flicker

Answer: B

Instructions [21 - 25]

In the following passage, some words have been deleted. Fill in the blanks with the help of the alternatives given. Select the most appropriate option for each blank.

Generally, dolphins sleep (1) _____ only one brain hemisphere in slow-wave sleep at a time, thus (2) _____ enough consciousness to breathe and to watch for possible (3) _____ and other threats. Early (4) _____ stages can occur simultaneously in both hemispheres. In captivity, dolphins seemingly enter a fully asleep state where both eyes are closed and there is no response to mild external (5) _____.

21. Select the most appropriate option to fill in blank number 1.

- A** on

- B** win
- C** over
- D** through

Answer: B

22. Select the most appropriate option to fill in blank number 2.

- A** maintaining
- B** facilitating
- C** generating
- D** tormenting

Answer: A

SSC CHSL Free App

23. Select the most appropriate option to fill in blank number 3.

- A** predators
- B** preys
- C** carnivorous
- D** orators

Answer: A

24. Select the most appropriate option to fill in blank number 4.

- A** sleep
- B** brain
- C** woke
- D** conscious

Answer: A

25. Select the most appropriate option to fill in blank number 5.

- A** stimuli
- B** moduli

- C** spur
- D** deterrent

Answer: A

Daily Free SSC Practice Set

General Intelligence

26. Out of the given letter clusters, three are similar in a certain manner. However, one option is NOT like the other three. Select the option which is different from the rest.

- A** ABC
- B** JKL
- C** RTU
- D** FGH

Answer: C

Free SSC Study Material (18,000 Solved Questions)

27. Select the correct mirror image of the given combination when the mirror is placed at line AB as shown.

BLISSFUL



- A** BLISSFUL
- B** LUISSEB
- C** BLISSFUL
- D** BLISSFUL

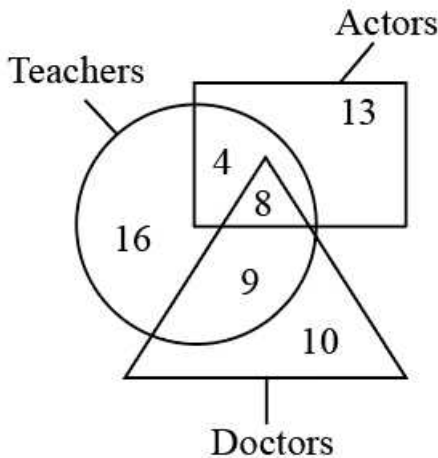
Answer: B

28. Three of the four group of words are alike in some manner. Select the odd group of words.

- A** (Bangkok, Dhaka, Ottawa)
- B** (Tokyo, Egypt, Oslo)
- C** (Thimphu, Jakarta, Nairobi)
- D** (Canberra, Beijing, Rome)

Answer: B

29. what is the total numbers of teachers?



A 17

B 12

C 20

D 37

Answer: D

1500+ Very Important Free SSC Solved Questions

30. In the following question, four number pairs are given. In each pair the number on left side of (-) is related to the number of the right side of (-) with some Logic/Rule /Relation. Three pairs are similar on basis of same Logic/Rule/Relation. Select the odd one out from the given alternatives.
(NOTE: Operations should be performed on the whole numbers, without breaking down the numbers into its constituent digits. E.g.13 - Operations on 13 such as adding /subtracting /multiplying etc. to 13 can be performed. Breaking down 13 into 1 and 3 and then performing mathematical operations on 1 and 3 is not allowed)

A 51624 - 42615

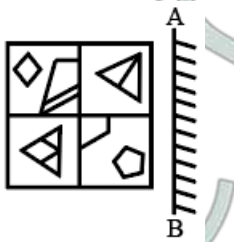
B 51678 - 87615

C 42675 - 57624

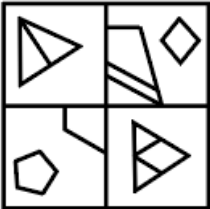
D 12311 - 11231

Answer: D

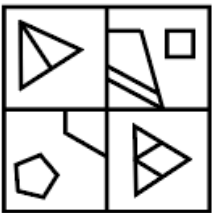
31. If a mirror is placed on the line AB, then out of the option figures which figure will be the right image of the question figure?



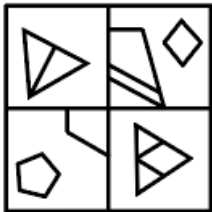
A



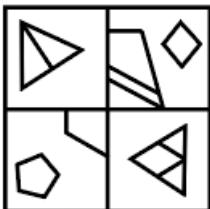
B



C



D



Answer: A

32. In the following question, four number pairs are given. In each pair the number on left side of (-) is related to the number on the right side of (-) with some Logic/Rule /Relation. Three pairs are similar on basis of same Logic/Rule/Relation. Select the odd one out from the given alternatives.

(NOTE: Operations should be performed on the whole numbers, without breaking down the numbers into its constituent digits. E.g. 13 - Operations on 13 such as adding /subtracting /multiplying etc. to 13 can be performed. Breaking down 13 into 1 and 3 and then performing mathematical operations on 1 and 3 is not allowed)

A 1286 - 2578

B 3294 - 6589

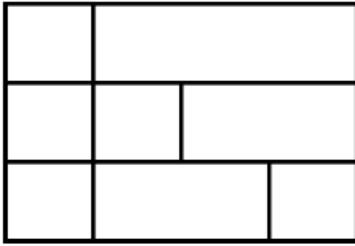
C 1324 - 2649

D 3184 - 6369

Answer: A

SSC Exam Update Videos & Free Study Material (YouTube Channel)

33. How many quadrilaterals are there in the given figure?



- | | |
|----------|----|
| A | 21 |
| B | 22 |
| C | 24 |
| D | 13 |

Answer: C

34. By Interchanging the given two numbers (Not digits) which of the following equation will be not correct?

4 and 6

- A** $2 + 6 \times 5 - 4 = 16$
- B** $4 + 5 - 6 = 7$
- C** $6 \div 2 - 4 \times 5 = -28$
- D** $6 \times 3 - 4 \div 1 = 3$

Answer: D

35. In a certain code language, 'LETTER' is coded as 'RETTEL' and 'SYMBOL' is coded as 'LOBMYS'. What is the code for the word 'RENAISSANCE' in that language?

- A** ECNASSIANER
B ENCASSIANER
C ECANSSIANER
D ECNASSAINER

Answer: A

Latest Job Updates on Telegram - Join here

36. Read the given statements and conclusions carefully. Assuming that the information given in the statements is true, even if it appears to be at variance with commonly known facts, decide which of the given conclusions logically follow(s) from the statements.

Statement I: All silver are gold.

Statement II: No gold is platinum.

Conclusion I: Some gold are silver.

Conclusion II: Some silver are platinum.

- A Neither I nor II follows
- B Only II follows
- C Both I and II follows
- D Only I follows

Answer: D

37. Select the combination of letters that when sequentially placed in the blanks of the given series will complete the series.

ab_a_bba_ _ba

- A abbb
- B aaaa
- C bbbb
- D baab

Answer: D

38. Manisha's sister Sakshi is the wife of Subham. Subham is the brother of Darshan. Akash, the son of Manisha, has a sister Rekha who is the daughter of Darshan. Rekha's father Darshan's mother is Saloni. How is Saloni related to Sakshi?

- A Daughter-in-law
- B Sister
- C Mother-in-law
- D Daughter

Answer: C

Join SSC Daily Quiz Telegram Group

39. If '+' means '×', '-' means '÷', '÷' means '+' and '×' means '-', then $74 \div 11 - 33 + 42 \times 16 = ?$

- A** 64
- B** 68
- C** 76
- D** 72

Answer: D

40. Select the option that is related to the fourth number in the same way as the first number is related to the second number and the fifth number is related to the sixth number.

$22 : 132 :: ? : 72 :: 24 : 144$

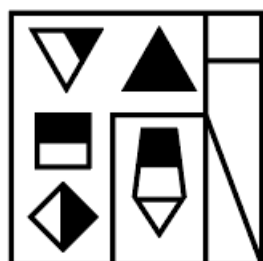
- A** 12
- B** 8
- C** 18
- D** 36

Answer: A

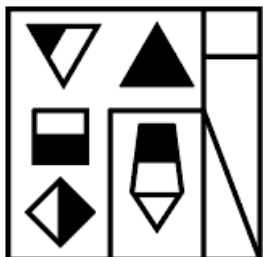
41. If a mirror is placed on the line AB, then out of the option figures which figure will be the right image of the question figure?

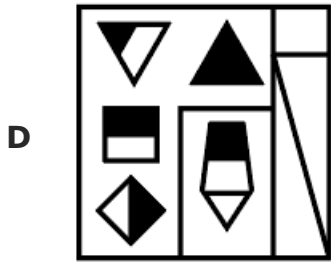
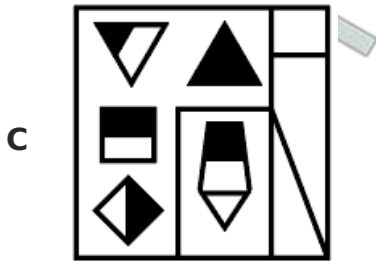


A



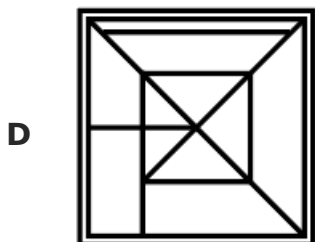
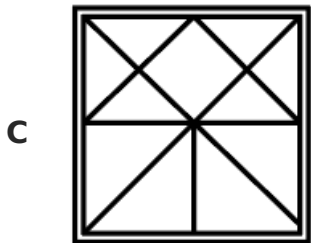
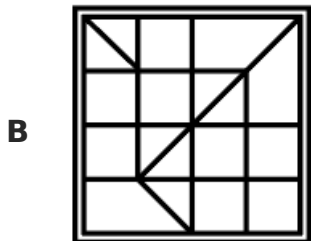
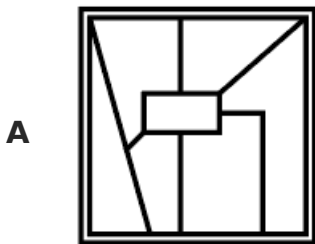
B





Answer: C

42. Select the option figure in which the given figure is embedded. (rotation is NOT allowed)



Answer: B

43. Select the word pair in which the words are related in the same way as the words are related in the following pair:

Treatment : Hospital :: ?

- A Cinema hall : Entertainment
- B Temple : Prayer
- C Education : School
- D Garage : Repairing

Answer: C

44. In the following question, select the related letters from the given alternatives.

IMQ : KOS :: XBF : ?

- A LOK
- B ZFH
- C MFH
- D ZDH

Answer: D

SSC CHSL Free Mock Test

45. Select the correct option that indicates the arrangement of the given words in a logical and meaningful order.

1. Sentence
2. Letter
3. Paragraph
4. Chapter
5. Book

- A 5,4,3,2,1
- B 5,4,3,1,2
- C 5,1,3,4,2
- D 5,1,4,3,2

Answer: B

46. In a certain code language, '629' is coded as 'namo te fek', '943' is coded as 'dump to te', and '748' is coded as 'to fir tako'. What is the code for the letter '3' in that language?

- A dump

- B** to
- C** fir
- D** te

Answer: A

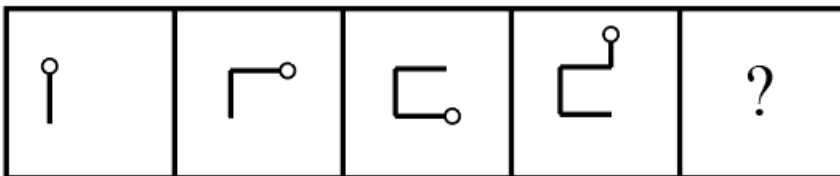
47. Select the option in which the numbers shares the same relationship in set as that shared by the numbers in the given set.
 (NOTE: Operations should be performed on the whole numbers, without breaking down the numbers into its constituent digits. E.g.13 - Operations on 13 such as adding /subtracting /multiplying etc. to 13 can be performed. Breaking down 13 into 1 and 3 and then performing mathematical operations on 1 and 3 is not allowed)
 (66, 13, 20)
 (298, 80, 69)

- A** (356, 111, 67)
- B** (219, 39, 180)
- C** (38, 12, 18)
- D** (56, 16, 42)

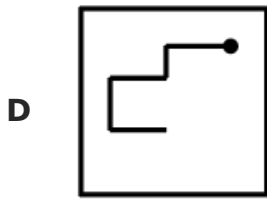
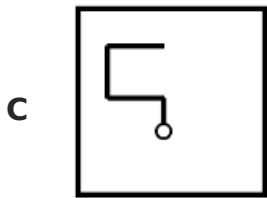
Answer: A

SSC CHSL Prevoius Papers (DOWNLOAD PDF)

48. Select the figure that will come next in the following figure series.



- A**
- B**



Answer: B

49. Words given on the left side of (::) are related with each other by some Logic/Rule /Relation. Select the missing word/word pair on the right side of (::) from the given alternatives based on the same Logic/Rule/Relation.

Ottawa : Canada :: ?

- A Nairobi : Kenya
- B Russia : Moscow
- C Greece : Athens
- D Spain : Madrid

Answer: A

50. In the following question, select the missing number from the given series.
623, 626, 635, 662, 743, ?

- A 986
- B 966
- C 1026
- D 1016

Answer: A

SSC CGL Previous Papers (DOWNLOAD PDF)

Quantitative Aptitude

51. Kapila covers a distance of 1200 meters in 10 minutes. What is the speed of Kapila?

- A 1.2 kmph
- B 72 kmph

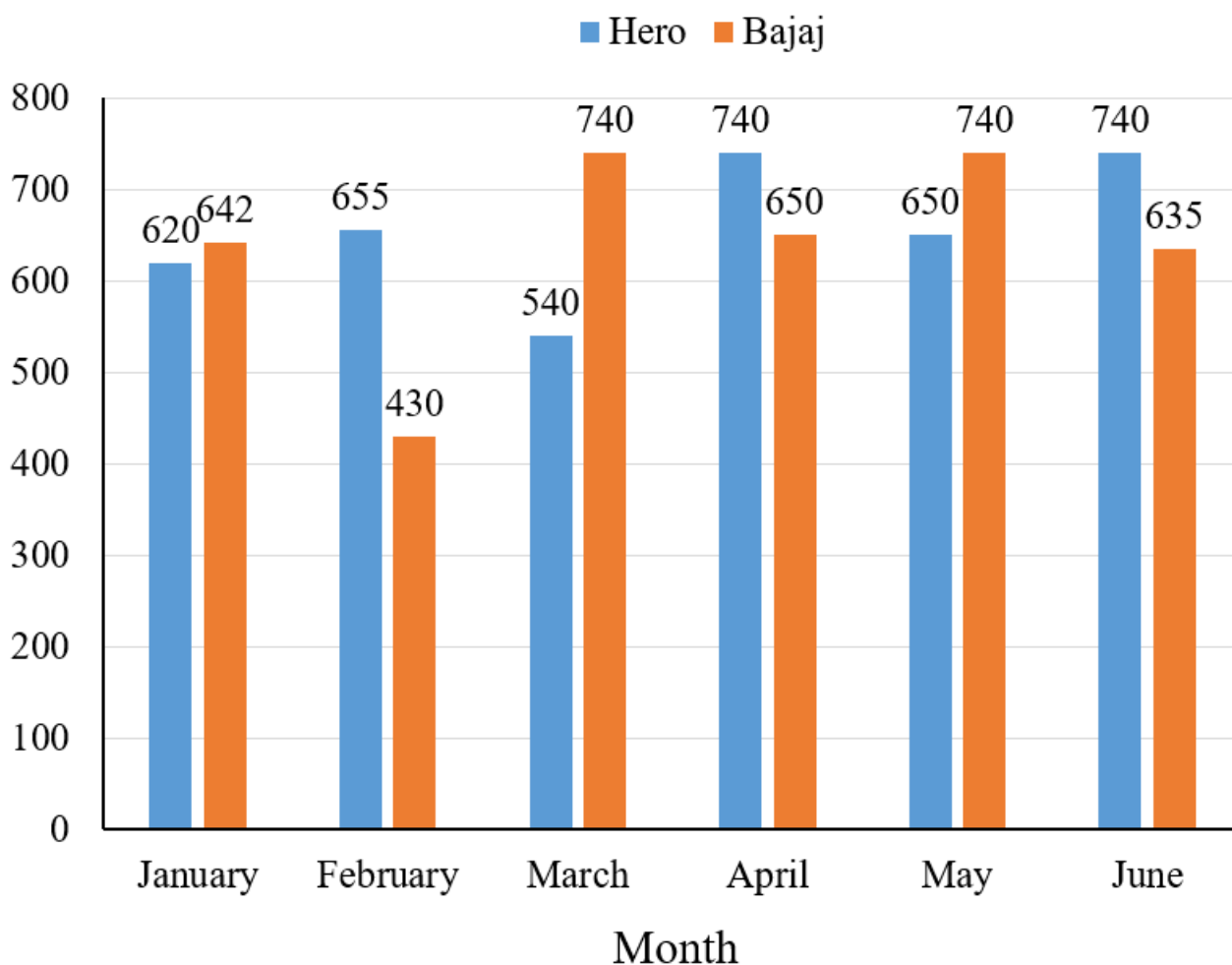
C 120 kmph

D 7.2 kmph

Answer: D

SSC CGL Free Mock Test (Latest Pattern)

52. The below bar graph shows the number of bikes (in hundreds) sold by Hero and Bajaj over the first six months of 2022.



In July, the sales for the number of bikes for Hero company decreased with respect to the previous month by the same percentage as the sales of Hero company decreases in the month of March with respect to February, then find the approximate number of bikes sold by Hero in the month of July.

A 58240

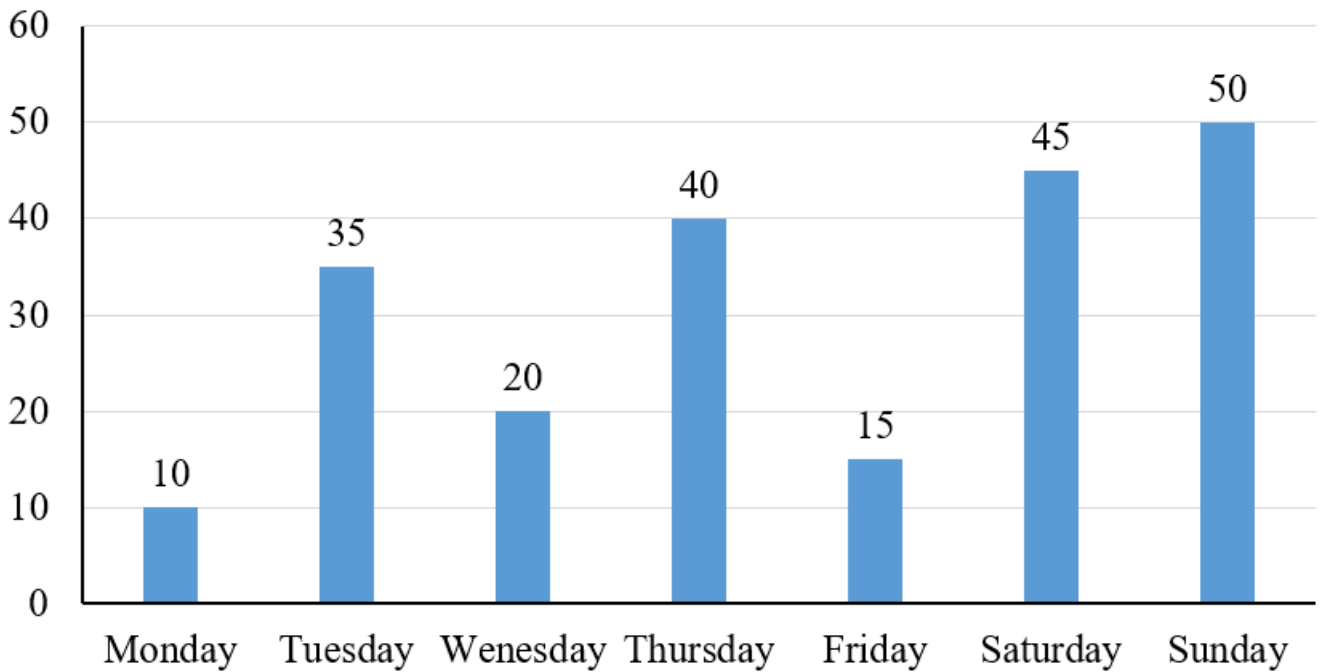
B 89759

C 61000

D 90240

Answer: C

53. The bar graph given below shows the temperature recorded every day in a certain week.



What is the sum of the temperatures recorded on all the days?

- A 240 degree
- B 215 degree
- C 235 degree
- D 205 degree

Answer: B

54. If $\cot 2A = \tan(A - 48^\circ)$, then what is the value of A?

- A 36 degree
- B 46 degree
- C 42 degree
- D 40 degree

Answer: B

SSC CHSL Important Questions and Answers (Download PDF)

55. If PQ is a tangent of a circle (touches the circle at Q) with centre O and angle POQ is 75° , then what is the value of angle OPQ?

- A** 15°
- B** 35°
- C** 30°
- D** 25°

Answer: A

56. The perimeter of two similar triangles RST and IJK (in correspondence) are 64 cm and 56 cm respectively. If IJ = 16 cm, then what is the length of RS?

- A** 18 cm
- B** 16 cm
- C** 14 cm
- D** 8 cm

Answer: C

57. What is the circumference of a circle whose radius is 10.5 cm?

- A** 21 cm
- B** 66 cm
- C** 30 cm
- D** 110 cm

Answer: B

SSC CHSL Study Material

58. How many numbers are there between 201 and 401 which are divisible by 5 but not by 4?

- A** 30
- B** 20
- C** 40
- D** 45

Answer: A

59. IF $\frac{3}{2} \times \frac{7}{3} \div \frac{7}{6} + \frac{1}{4} = \frac{1}{x}$. What is the value of x?

- A** 7/12
- B** 4/13
- C** 13/4
- D** 6/7

Answer: B

60. A sum becomes 1.96 times of itself in 2 years when invested at compound interest (compounding annually). What is the annual rate of interest?

- A** 20 percent
- B** 25 percent
- C** 40 percent
- D** 30 percent

Answer: C

SSC CHSL Free App

61. The table given below shows the income and expenditure of a company in five years.

Years	Income	Expenditure
A	350	150
B	250	100
C	200	150
D	400	100
E	150	75

Saving = Income - Expenditure

What is the average saving in all years?

- A** 45
- B** 145
- C** 175
- D** 155

Answer: D

62. A work can be completed by 8 boys in 48 days. If 2 boys leave after working for 24 days, then how many days will be needed to complete the remaining work?

- A 20 days
- B 24 days
- C 32 days
- D 30 days

Answer: C

63. In a cyclic quadrilateral MNOP, $\angle M$ is opposite to $\angle O$, If $2\angle O = 3\angle M$, then what is the value of $\angle M$?

- A 88 degree
- B 108 degree
- C 72 degree
- D 96 degree

Answer: C

Daily Free SSC Practice Set

64. A person buys three spectacles at the rate of Rs. 4,000 per spectacles. He sells first spectacles at a profit of 30 percent, sells second spectacles at a loss of 10 percent and sell third spectacles at a loss of 10 percent. What is the total percentage of profit earned in the whole transaction?

- A 7.14 percent
- B 2.18 percent
- C 3.33 percent
- D 5.41 percent

Answer: C

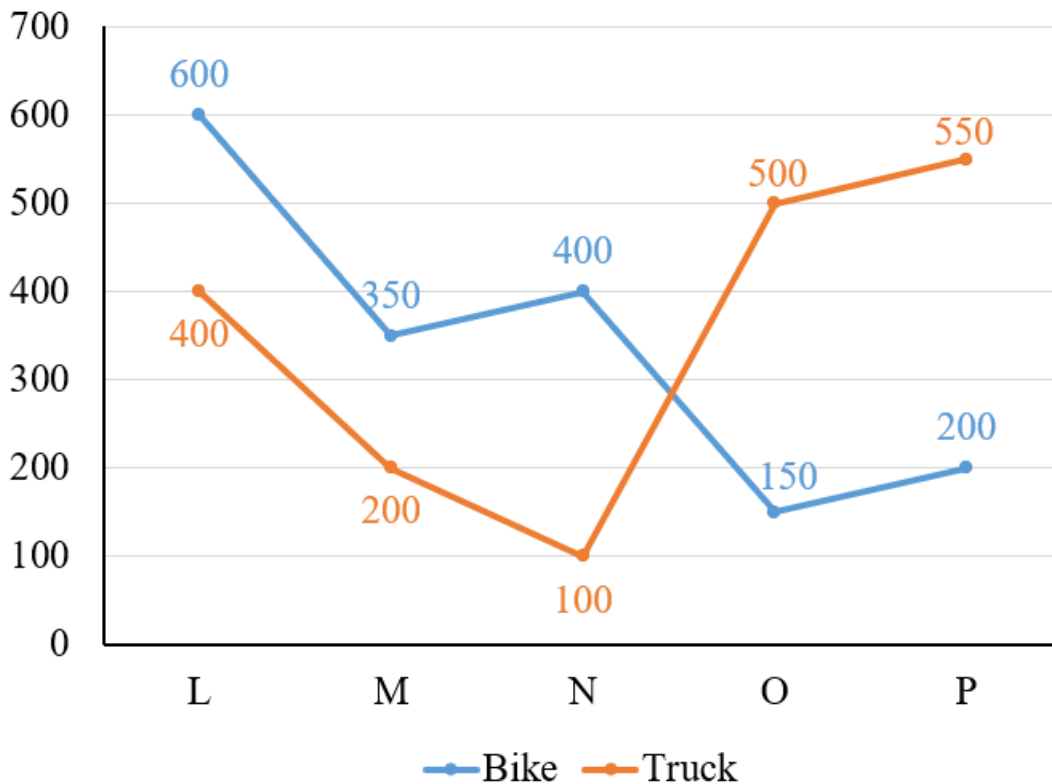
65. A shopkeeper has a sale of Rs.10,000, Rs.5,500, Rs.8,000 and Rs.10,500 for 4 consecutive months. How much sale must he have in the fifth month so he gets an average sale of Rs.9,000 in five months?

- A Rs.10,200
- B Rs.8,500
- C Rs.11,000

D Rs.9,000

Answer: D

66. The line chart given below shows the production of bike and truck by five companies L, M, N, O and P.



Which of the following statement is correct?

- I. The ratio of production of bike to the production of truck by company M are 7 : 4.
- II. The difference between average of production of bike and truck by all companies is 10.

A Neither I nor IT

B Only II

C Only I

D Both I and II

Answer: D

Free SSC Study Material (18,000 Solved Questions)

67. What is the value of $\cot \theta$ when θ is 60° ?

A $1/\sqrt{3}$

B $\sqrt{3}$

C 0

D 1

Answer: A

68. A sum of Rs.1,248 is to be distributed among Ridhaan and Vihaan in the proportion of 2 : 3. What is the share of Vihaan?

A Rs.684.20

B Rs.776.40

C Rs.748.80

D Rs.874.50

Answer: C

69. If $\tan(x + y) = 1$ and $\cos(x - y) = \sqrt{3}/2$, then what is the value of x and y?

A $X = 3, y = 4.5$

B $X = 37.5, y = 7.5$

C $X = 7.5, y = 37.5$

D $X = 4.5, y = 3$

Answer: B

1500+ Very Important Free SSC Solved Questions

70. What is the expansion of $(x + 11)(x - 11)$?

A $X^2 + 11$

B $x^2 - 121$

C $X^2 + 121$

D $x^2 - 11$

Answer: B

71. AC is the diameter of the circle. B is a point on the circumference. If angle BAC is 40° , then what is angle BCA?

A 50°

B 90°

C 55°

D 40°

Answer: A

72. A fruit seller had some watermelons. He sells 45% of the watermelons and still has 495 watermelons left. How many watermelons be originally had?

A 900

B 800

C 400

D 600

Answer: A

SSC Exam Update Videos & Free Study Material (YouTube Channel)

73. The marked price of a chair is Rs. 1,650. This chair is sold at two successive discounts of 10 percent and 20 percent.

What is the selling price of chair?

A Rs.1,188

B Rs.1,288

C Rs.1,166

D Rs.1,265

Answer: A

74. If $X + \frac{1}{X} = 2K$, then what is the value of $X^4 + \frac{1}{X^4}$?

A $16K^4 - 16K^2 - 1$

B $8K^4 + 4K^2 - 1$

C $16K^4 - 16K^2 + 2$

D $16K^4 - 4K^2 - 1$

Answer: C

75. What is the value of $a^2 + 4b^2 + 9c^2 - 4ab + 12bc - 6ca$?

A $(a + 2b - 3c)^2$

- B** $(2a - b - 3c)^2$
C $(2b - a - 3c)^2$
D $(a - 2b - 3c)^2$

Answer: D

Latest Job Updates on Telegram - Join here

General Awareness

76. **Where does Alaknanda River join Bhagirathi River in India?**

- A** Devprayag
B Prayagraj
C Champawat
D Dehradun

Answer: A

Join SSC Daily Quiz Telegram Group

77. **Indian Standard Time (IST) is ahead of Greenwich Mean Time (GMT) by ____.**

- A** 3 hours 45 minutes
B 7 hours 15 minutes
C 2 hours
D 5 hours 30 minutes

Answer: D

78. **Who is the author of the book 'Languages of Truth: Essays 2003-2020'?**

- A** Vikram Sampath
B Salman Rushdie
C Kabir Bedi
D Meghan Markale

Answer: B

79. **Cotton requires _____ temperature, light rainfall or irrigation, _____ frost-free days and bright sunshine for its growth.**

- A** high, 210
- B** low, 150
- C** low, 210
- D** high, 150

Answer: A

80. **Muscles are of three types. Which of the following is NOT one of them?**

- A** Sesamoids
- B** Smooth
- C** Cardiac
- D** Skeletal

Answer: A

81. **Who among the following is famously called the Iron Lady of India?**

- A** Mary Kom
- B** Deepika Padukone
- C** Lata Mangeshkar
- D** Indira Gandhi

Answer: D

82. **Which of the following rivers flowed through Magadha?**

- A** Ganga and Krishna
- B** Krishna and Tungabhadra
- C** Ganga and Son
- D** Narmada and Tapi

Answer: C

SSC CHSL Free Mock Test

83. **Draft "Drug, Medical Devices and Cosmetics Bill-2022" has been released by which union ministry?**

- A** Ministry of Health and Family Welfare
- B** Ministry of Chemicals and Fertilizers
- C** Ministry of Consumer Affairs, Food & Public Distribution
- D** Ministry of Agriculture and Farmer Welfare

Answer: A

84. **Neel wants to use a Character Printer. Which among the following should he pick?**

- A** Chain Printer
- B** Laser Printer
- C** Drum Printer
- D** Dot Matrix Printer

Answer: D

85. _____ forces water through a semipermeable membrane and removes contaminants.

- A** Boiling
- B** Distillation
- C** Reverse Osmosis
- D** Filtration

Answer: C

SSC CHSL Previous Papers (DOWNLOAD PDF)

86. _____ is a legal declaration of a person who is unable to pay off debts.

- A** Bankruptcy
- B** Credit Crunch
- C** Amortisation
- D** Bancassurance

Answer: A

87. _____ is the physical network of computers all over the world.

- A** Laptop
- B** Web browser
- C** Server
- D** Internet

Answer: D

88. Who was the first Indian woman to be appointed Chief Justice of a state High Court?

- A** Leila Seth
- B** Anna Chandy
- C** M. Fathima Beevi
- D** Kiran Mazumdar-Shaw

Answer: A

SSC CGL Previous Papers (DOWNLOAD PDF)

89. The most distinctive type of folk songs of Assam are _____.

- A** Qawwali songs
- B** Bihu songs
- C** Teej songs
- D** Bhuta songs

Answer: B

90. Which article of the Indian constitution specifies equality before the law?

- A** Article 19
- B** Article 23
- C** Article 14
- D** Article 36

Answer: C

91. In which year was the Special Marriage Act passed in India?

- A** 1958
- B** 1954
- C** 1962
- D** 1950

Answer: B

SSC CGL Free Mock Test (Latest Pattern)

92. Which of the following statements is correct regarding the government securities in the economy?

- I. It is a tradeable instrument issued by the Central Government or the State Governments.
- II. They are called risk-free gilt-edged instruments.

- A** Neither I nor II
- B** Only I
- C** Only II
- D** Both I and II

Answer: D

93. Which Act was passed by the British Government of India to introduce Provincial Judiciary?

- A** Indian Council Act of 1892
- B** Government of India Act of 1935
- C** The Charter Act 1853
- D** Indian Independence Act of 1947

Answer: B

94. Which of the following pairs of "medal - player" is correct regarding performance of India in 2022 Commonwealth Games?

- I. Sanket Sargar - Bronze
- II. Mirabai Chanu - Gold

- A** Only II
- B** Both I and II

- C** Only I
- D** Neither I nor II

Answer: A

SSC CHSL Important Questions and Answers (Download PDF)

95. The withdrawal of the monsoon begins in _____ states of India by early September

- A** south-eastern
- B** north-eastern
- C** south-western
- D** north-western

Answer: D

96. Who won a bronze medal in Weightlifting at the 2000 Summer Olympics in Sydney?

- A** Mirabai Chanu
- B** Neelam Setti Laxmi
- C** Karnam Malleswari
- D** Kunjarani Devi

Answer: C

97. Which among the following is the monsoon mud festival of Goa?

- A** Sarhul
- B** Karma
- C** chikal kalo
- D** Ladainha

Answer: C

SSC CHSL Study Material

98. Which of the following pair of "term - sports" is NOT correct?

- I. Penalty kick - Handball
- II. Greco Roman - Boxing

- A** Neither I nor II

- B** Both I and II2. Both I and II
- C** Only II3. Only II
- D** Only I4. Only I

Answer: A

99. **Rahul is suffering from Beriberi. What deficiency he has?**

- A** Vitamin B1
- B** Vitamin C
- C** Vitamin A
- D** Vitamin K

Answer: A

00. **In March 2022, evacuation operation to bring Indian citizens from Ukraine was called as _____.**

- A** Operation Devi Shakti
- B** Operation Maitri
- C** Operation Vande Bharat
- D** Operation Ganga

Answer: D

SSC CHSL Free App