



All rights reserved. No part of this publication may be reproduced, distributed, or transmitted in any form or by any means, electronic, mechanical, photocopying, recording or otherwise, or stored in any retrieval system of any nature without the permission of cracku.in, application for which shall be made to support@cracku.in

SSC CHSL 13th March 2023 Shift-2

English Language

1. Choose the word that is opposite in meaning to the given word.

Restricted

- A** Copious
- B** Circumscribed
- C** Capped
- D** Finite

Answer: A

[▶ Video Solution](#)

2. Choose the option that is the correct indirect form of the sentence.

She said to her, "Please pay attention to the details."

- A** She commanded her for paying attention to the details.
- B** She requested her that to pay attention to the details.
- C** She requests her that pay attention to the details.
- D** She requested her to pay attention to the details.

Answer: D

[▶ Video Solution](#)

3. Select the word that is similar in meaning (SYNONYM) to the word given below

Efficacy

- A** Impotence
- B** Efficiency
- C** Ineptness
- D** Futility

Answer: B

[▶ Video Solution](#)

4. In the following question, out of the given four alternatives, select the alternative which best expresses the meaning of the Idiom/Phrase.

All and sundry

- A** Advantages and disadvantages
- B** Everyone without distinction
- C** Full moon
- D** Holidays

Answer: B

[▶ Video Solution](#)

SSC CHSL Free Mock Test

5. Rearrange the parts of the sentence in correct order.

Corruption is

P. misuse and abuse of public office, either directly

Q. typified by dishonesty, exploitation or the

R. or indirectly, for personal gains or unjust enrichment

S. in negation of due process or established protocol

- A** QPRS
- B** PSRQ
- C** RSPQ
- D** PQSR

Answer: A

[▶ Video Solution](#)

6. Find the part of the given sentence that has an error in it. If there is no error, choose 'No error'.

Fashion might not be first thing that comes to mind when we think of isolation strategies.

- A** we think of isolation strategies.
- B** No error
- C** Fashion might not be first
- D** thing that comes to mind when

Answer: C

 Video Solution

7. Select the most appropriate 'one word' for the expression given below.
One who cures eye disease.

- A Ophthalmologist
- B Prologist
- C Phonologist
- D Biologist

Answer: A

 Video Solution

SSC CHSL Previous Papers (DOWNLOAD PDF)

8. Choose the word that can substitute the given group of words.
A person who is never happy with what he has

- A Malcontent
- B Heresy
- C Malleable
- D Miser

Answer: A

 Video Solution

9. Choose the incorrectly spelt word.

- A MOCKERY
- B CROCKERY
- C RELIGIOUS
- D BENEDICTION

Answer: D

 Video Solution

10. Choose the correctly spelt word.

- A** MEALIGN
- B** PRECISSION
- C** SABOTAGE
- D** MISSIONERY

Answer: C

[▶ Video Solution](#)

SSC CGL Previous Papers (DOWNLOAD PDF)

11. **Select the most appropriate meaning of the given idiom.**
Green light

- A** To be lost and confused
- B** To misunderstand
- C** To permit something to proceed
- D** To always compare

Answer: C

[▶ Video Solution](#)

12. **Some parts of a few sentences have been jumbled up, and labelled A, B, C and D.**
Select the option that gives the correct sequence in which these parts can be rearranged to form a meaningful and grammatically correct sentence

Our twelve years in the forest were

A. Ram had lost, we would have to

B. ending. Now, according to the wager

C. discovered our whereabouts, we would have to endure another ten years in exile

D. spend a year in hiding.

If during this year Mohan

- A** BDCA
- B** CDAB
- C** BADC
- D** ACBD

Answer: C

[▶ Video Solution](#)

13. Improve the underlined part of the sentence. Choose 'No improvement' as an answer if the sentence is grammatically correct.

A fully grow Chihuahua weighs less than the average house cat.

- A fullest grown
- B fully growth
- C No improvement
- D fully grown

Answer: D

[▶ Video Solution](#)

SSC CGL Free Mock Test (Latest Pattern)

14. Select the option that will improve the (bracketed) part of the sentence. In case of no improvement select the option 'No improvement'.

The play was (either as funny or as) disturbing as Shivang told it was.

- A neither as funny nor as
- B No improvement
- C either as funny nor as
- D neither as funny or as

Answer: A

[▶ Video Solution](#)

15. Select the word that is closest in meaning (SYNONYM) to the word given below.

BLASPHEMOUS

- A COSTLY
- B DISRESPECTFUL
- C REALITY
- D AUTHENTIC

Answer: B

[▶ Video Solution](#)

16. Select the correct passive form of the given sentence.

He writes a paper every weekend.

- A** A paper is written by him every weekend.
- B** A paper is been written by him every weekend.
- C** A paper was been written by him every weekend.
- D** A paper was written by him every weekend.

Answer: A

[▶ Video Solution](#)

SSC CHSL Important Questions and Answers (Download PDF)

17. Fill in the blank with an appropriate option.

It is important to ensure that we all have good clean water to drink that is not _____ by heavy metals or chemicals.

- A** knotted
- B** clarified
- C** purged
- D** contaminated

Answer: D

[▶ Video Solution](#)

18. Parts of the following sentence are given as options. Identify the part that contains a grammatical error. If there is no error, select 'No error'.

They know they will face / either a swift backlash / or deafening silence.

- A** No error
- B** They know they will face
- C** or deafening silence.
- D** either a swift backlash

Answer: A

[▶ Video Solution](#)

19. Choose the word that means the same as the given word.

Jarred

- A** Assented

- B** Accorded
- C** Macho
- D** Altercated

Answer: D

[▶ Video Solution](#)

SSC CHSL Study Material

20. Select the most appropriate option to fill in the blank.

This has given rise to the view that the legal code is _____ against women and the poor.

- A** baked
- B** frank
- C** biased
- D** duplicitous

Answer: C

[▶ Video Solution](#)

Instructions [21 - 25]

In the following passage some words have been deleted. Fill in the blanks with the help of the alternatives given. Select the most appropriate option for each number.

There were other stories (1) _____ Krishna. How (2) _____ been born in a dungeon where his uncle Kamsa had imprisoned his parents with the intention of killing him at birth. How, in spite of the many prison guards, he had been miraculously spirited (3) _____ to safety in Gokul. How, in infancy, he killed a (4) _____ who tried to poison him with her breast milk. How he lifted up Mount Govardhan to shelter his people from a (5) _____ that would have drowned them.

21. Select the most appropriate option to fill in blank number 1.

- A** about
- B** upon
- C** with respect
- D** belonging to

Answer: A

[▶ Video Solution](#)

22. Select the most appropriate option to fill in blank number 2.

- A** he have
- B** he was
- C** he has
- D** he had

Answer: D

[▶ Video Solution](#)

SSC CHSL Free App

23. **Select the most appropriate option to fill in blank number 3.**

- A** around
- B** away
- C** together
- D** gone

Answer: B

[▶ Video Solution](#)

24. **Select the most appropriate option to fill in blank number 4.**

- A** god
- B** demon
- C** satan
- D** demoness

Answer: D

[▶ Video Solution](#)

25. **Select the most appropriate option to fill in blank number 5.**

- A** snowfall
- B** earthquake
- C** drought
- D** deluge

Answer: D

[▶ Video Solution](#)

Daily Free SSC Practice Set

General Intelligence

26. Three of the following four letter clusters are alike in a certain way and one is different. Pick the cluster that is different from the rest.

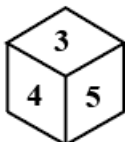
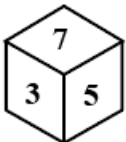
- A UTS
- B ONM
- C GHI
- D WVU

Answer: C

[▶ Video Solution](#)

Free SSC Study Material (18,000 Solved Questions)

27. Three positions of 3 dice are given below. What can come on the adjacent faces of the face containing '4' on it?



- A 7 and 5
- B 3 and 7
- C 7 and 6
- D 6 and 5

Answer: D

[▶ Video Solution](#)

28. Select the option that is related to the fifth number in the same way as the first number is related to the second number and the third number is related to the fourth number.
 $33 : 121 :: 27 : 81 :: 45 : ?$

- A 256

B 305

C 275

D 225

Answer: D

[▶ Video Solution](#)

29. Words given on the left side of (::) are related with each other by some Logic/Rule /Relation. Select the missing word/word pair on the right side of (::) from the given alternatives based on the same Logic/Rule/Relation.

Tadpole : Frog :: Caterpillar : ?

A Dog

B Hen

C Butterfly

D Sheep

Answer: C

[▶ Video Solution](#)

1500+ Very Important Free SSC Solved Questions

30. In the question two statements are given, followed by two conclusions, I and II. You have to consider the statements to be true even if they seem to be at variance from commonly known facts. You have to decide which of the given conclusions, if any, follows from the given statements.

Statements:

I. No mobile is an electronic item.

II. All electronic items are costly.

Conclusions:

I. No costly is a mobile.

II. Some costly are mobile.

A Only conclusion II follows.

B Both conclusion I and II follow.

C Either conclusion I or II follow.

D Only conclusion I follows.

Answer: C

[▶ Video Solution](#)

31. In the following question, select the related letters from the given alternatives.

ATXJ : BVAN :: YMOU : ?

- A ZORY
- B HUVL
- C UVXZ
- D ASND

Answer: A

[▶ Video Solution](#)

32. Select the option in which the numbers shares the same relationship in set as that shared by the numbers in the given set. (NOTE: Operations should be performed on the whole numbers, without breaking down the numbers into its constituent digits.

E.g.13 - Operations on 13 such as adding /subtracting /multiplying etc. to 13 can be performed. Breaking down 13 into 1 and 3 and then performing mathematical operations on 1 and 3 is not allowed)

(8, 5, 39)

(14, 11, 75)

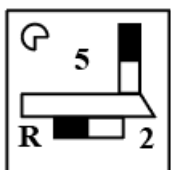
- A (12, 6, 70)
- B (9, 5, 54)
- C (11, 7, 74)
- D (7, 4, 33)


Answer: D

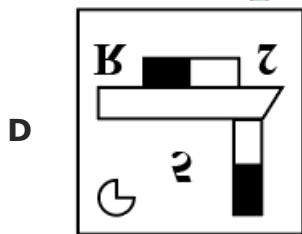
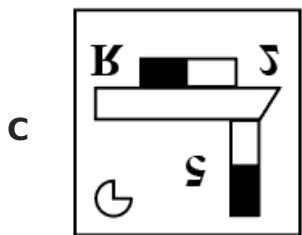
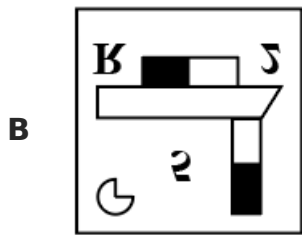
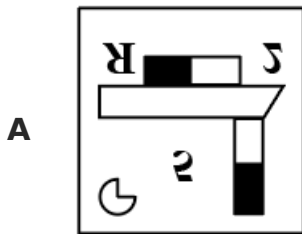
[▶ Video Solution](#)

SSC Exam Update Videos & Free Study Material (YouTube Channel)

33. If a mirror is placed on the line AB, then out of the option figures which figure will be the right image of the question figure?



A  B



Answer: B

[Video Solution](#)

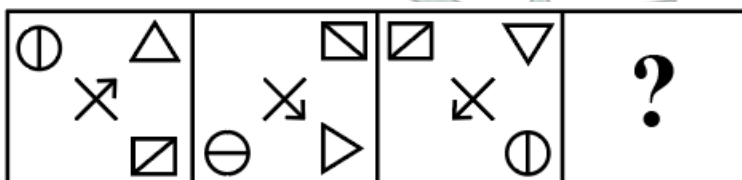
34. Aman is the brother of Baman and Chaman. Baman is Emily's mother. Farhan is Aman's father then which of the following is definitely true?

- A** Baman is sister of Chaman.
- B** Aman and Emily are siblings.
- C** Chaman is brother of Aman.
- D** Chaman is male.

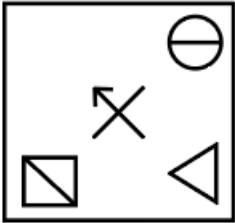
Answer: A

[Video Solution](#)

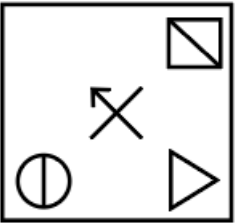
35. Select the figure that will come next in the following figure series.



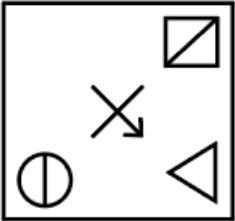
A



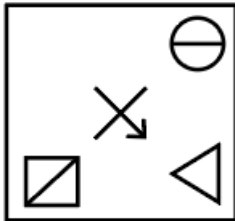
B



C



D



Answer: A

[▶ Video Solution](#)

Latest Job Updates on Telegram - Join here

36. In a certain code language, 'ISLAND' is written as 'HTKBME' and 'TABLET' is written as 'SBAMDU'. How will 'BANGLE' be written in that language?

A ABOHKF

B ABMHKD

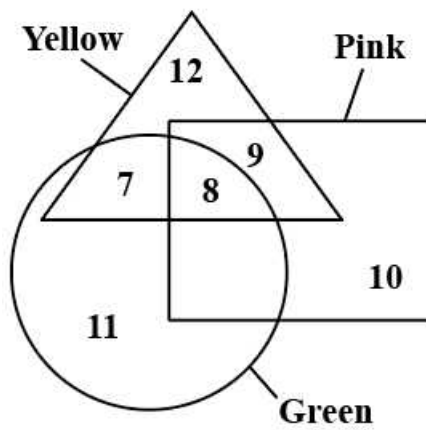
C ABMHKF

D ABHMF

Answer: C

[▶ Video Solution](#)

37. How many pink are neither green nor yellow?



A 10

B 17

C 9

D 8

Answer: A

[▶ Video Solution](#)

38. Which one set of letters when sequentially placed in the gaps in the given letter series shall complete it?

W X _ W W _ _ Y _ W _ W X X _ Y _ Y

A WXXYXWW

B YXYYWXX

C YXXYWXY

D WYXYWXY

Answer: C

[▶ Video Solution](#)

Join SSC Daily Quiz Telegram Group

39. Three of the four group of words are alike in some manner. Select the odd group of words.

A (Car, Truck, Road)

B (Chair, Table, Stool)

C (Choreographer, Editor, Carpenter)

D (Shirt, Trouser, Saree)

Answer: A

[▶ Video Solution](#)

40. After arranging the given words according to dictionary order, which word will come at 'Fifth' position?

1. Wrap
2. Wrath
3. Wrasse
4. Wrangler
5. Wrack

A Wrangler

B Wrack

C Wrath

D Wrasse

Answer: C

[▶ Video Solution](#)

41. Select the word pair in which the words are related in the same way as the words are related in the following pair:

Farmer : Plough

A Soldier : Pen

B Surgeon : Scalpel

C Author :
Spade

D Tailor : Harrow

Answer: B

[▶ Video Solution](#)

42. After interchanging the given two signs what will be the values of expression (I) and (II) respectively ?
+ and -

I. $45 + 15 \times 30 \div 10 - 25$

II. $6 \times 9 + 5 - 8 \div 4$

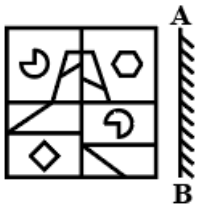
A 25 and 51

- B** 27 and 53
- C** 53 and 27
- D** 51 and 25

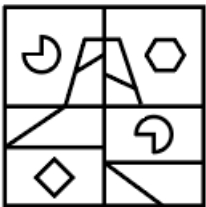
Answer: A

[▶ Video Solution](#)

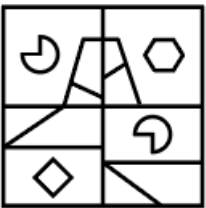
43. If a mirror is placed on the line AB, then one of the option figures which figure will be the right image of the question figure?



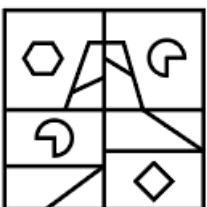
A



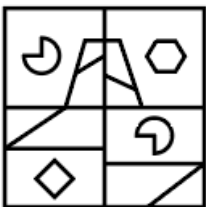
B



C



D



Answer: A

[▶ Video Solution](#)

44. If $739 \text{ R } 635 = 52$ and $814 \text{ R } 122 = 346$, then $532 \text{ R } 220 = ?$

- A** 156
- B** 160

C 134

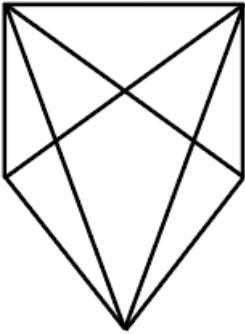
D 148

Answer: A

[▶ Video Solution](#)

SSC CHSL Free Mock Test

45. How many triangles are there in the given figure?



A 21

B 22

C 19

D 20

Answer: D

[▶ Video Solution](#)

46. Select the option in which the numbers shares the same relationship in set as that shared by the numbers in the given set.

(NOTE: Operations should be performed on the whole numbers, without breaking down the numbers into its constituent digits.

E.g.13 - Operations on 13 such as adding /subtracting /multiplying etc. to 13 can be performed. Breaking down 13 into 1 and 3 and then performing mathematical operations on 1 and 3 is not allowed)

(12, 144, 1728)

(6, 36, 216)

A (11, 121, 1000)

B (14, 196, 2197)

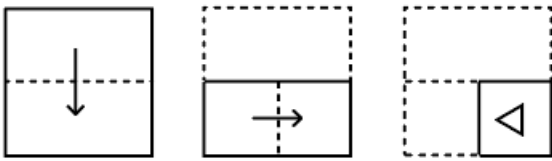
C (10, 100, 1000)

D (8, 64, 729)

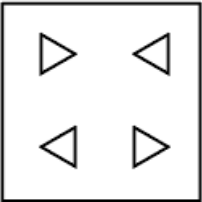
Answer: C

Video Solution

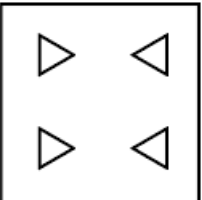
47. The sequence of folding a piece of paper and the manner in which the folded paper has been cut is shown in the following figure. How would this paper look when unfolded?



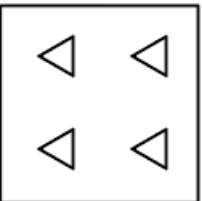
A



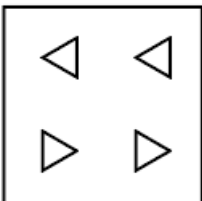
B



C



D



Answer: B

Video Solution

SSC CHSL Previous Papers (DOWNLOAD PDF)

48. In the following question, select the missing number from the given series.
3, 4, 7, 11, 18, 29, ?

A 48

B 45

C 47

D 46

Answer: C

[▶ Video Solution](#)

49. In a certain code language, 'BED' is written as '122' and 'CAB' is written as '37'. How will 'ADD' be written in that code language?

- A 65
- B 50
- C 101
- D 82

Answer: D

[▶ Video Solution](#)

50. In the following question, four number pairs are given. In each pair the number on left side of (-) is related to the number of the right side of (-) with some Logic/Rule /Relation. Three pairs are similar on basis of same Logic/Rule/Relation. Select the odd one out from the given alternatives. (NOTE: Operations should be performed on the whole numbers, without breaking down the numbers into its constituent digits. E.g.13 - Operations on 13 such as adding /subtracting /multiplying etc. to 13 can be performed. Breaking down 13 into 1 and 3 and then performing mathematical operations on 1 and 3 is not allowed)

- A 3241 - 5732
- B 2354 - 4835
- C 1326 - 3807
- D 2345 - 4826

Answer: A

[▶ Video Solution](#)

SSC CGL Previous Papers (DOWNLOAD PDF)

Quantitative Aptitude

51. If the radius of the circle is 42 cm and the angle formed at the centre by an arc is 150° . What is the length of the corresponding arc?

- A 66 cm
- B 77 cm

C 110 cm

D 55 cm

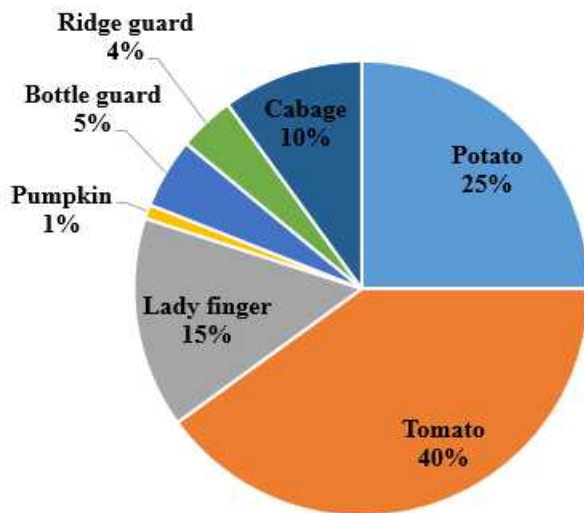
Answer: C

[▶ Video Solution](#)

SSC CGL Free Mock Test (Latest Pattern)

52. The following pie-chart shows the sale of different vegetables in a day of a shop.
If total 1000 kg of vegetables were sold in a day, then what is the amount of tomatoes sold (in kg)?

Sales of Vegetables



A 400

B 250

C 100

D 150

Answer: A

[▶ Video Solution](#)

53. What is the sum of all three digit numbers which are divisible by 15?

A 41200

B 36825

C 32850

D 28750

Answer: C

[▶ Video Solution](#)

54. Diameter of a circle is 20 cm. Length of chord AB is 10 cm. What will be the angle made by this, chord at the center of this circle?

- A 75 degree
- B 45 degree
- C 60 degree
- D 90 degree

Answer: C

[▶ Video Solution](#)

SSC CHSL Important Questions and Answers (Download PDF)

55. X, Y and Z are three equilateral triangles. The sum of the areas of X and Y is equal to the area of Z. If the side lengths of X and Y are 6cm and 8cm respectively, then what is the side length of Z ?

- A 10 cm
- B 10.5 cm
- C 9.5 cm
- D 9 cm

Answer: A

[▶ Video Solution](#)

56. Jitin's age 3 years from now will be double the average of Jitin's current age and his age 8 years ago. What was Jitin's age 5 years ago ?

- A 7 years
- B 8 years
- C 11 years
- D 6 years

Answer: D

[▶ Video Solution](#)

57. Rs. 6000 is lent at the rate of 20 percent per annum on compound interest (compounded half yearly). What will be the compound interest of 18 months?

- A** Rs. 1825
- B** Rs. 1986
- C** Rs. 1876
- D** Rs. 2036

Answer: B

[▶ Video Solution](#)

SSC CHSL Study Material

58. What is the value of $3 \tan 20^\circ \cdot \tan 45^\circ \cdot \tan 70^\circ$?

- A** 2
- B** 3
- C** 1.5
- D** 4

Answer: B

[▶ Video Solution](#)

59. If $A + B = -5$ and $AB = 6$, then find the value of $A^3 + B^3$.

- A** 35
- B** 45
- C** -35
- D** 215

Answer: C

[▶ Video Solution](#)

60. The value of $25\% \text{ of } 720 + 57 \div 19 \times \frac{1}{3} \text{ of } \frac{100}{11} \text{ of } \frac{33}{25} - 15 \text{ of } 300$ is:

- A** 191
- B** 157
- C** 127

D 147

Answer: D

[▶ Video Solution](#)

SSC CHSL Free App

61. The sum of the length, breadth, and height of a cuboid box is 20 cm and the total surface area of cuboid is 256 sq. cm. What is the, maximum length (in approximate) of a stick that can be placed inside the cuboid box ?

A 16 cm

B 24 cm

C 32 cm

D 12 cm

Answer: D

[▶ Video Solution](#)

62. If $\sin 2\theta = \sqrt{3}/2$, then what is the value of $\tan \theta$?

A $1/2$

B 1

C $1/\sqrt{3}$

D $\sqrt{3}$

Answer: C

[▶ Video Solution](#)

63. The ratio of the speed of the boat in still water to the speed of the stream is 8 : 3 and the boat can travel 22 km downstream in 24 minutes. Then how much the will the boat take to cover 50 km upstream?

A 4 hrs

B 2.5 hrs

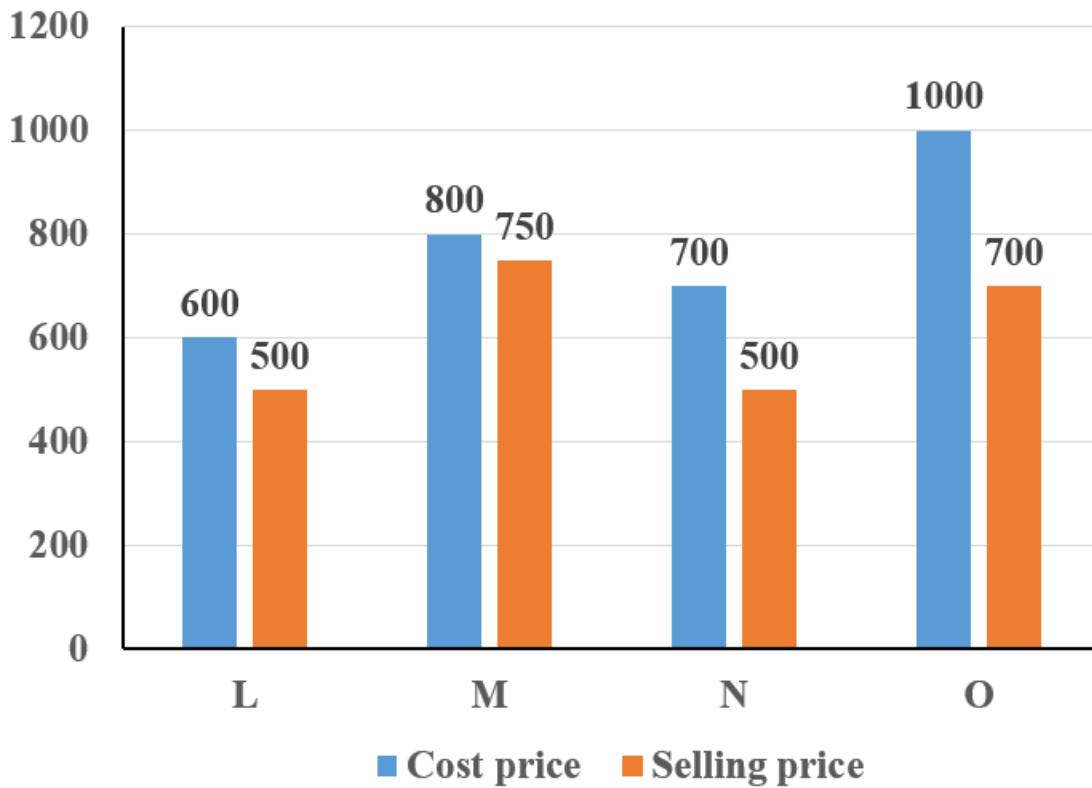
C 3 hrs

D 2 hrs

Answer: D

Daily Free SSC Practice Set

64. The bar graph given below shows the cost price and selling price of four articles L, M, N and O.



Loss = Cost price - Selling price

Which of the following sequence is correct for loss?

- A** $O > N > L > M$
- B** $N > O > L > M$
- C** $O > N > M > L$
- D** $O > L > N > M$

Answer: A

65. P can fill a tank in 5 hours. Q can fill the same tank in 10 hours. R can empty the same tank in 20 hours. How much time will all the three take together to fill the same tank?

- A** 10 hours
- B** 4 hours
- C** 6 hours

D 5 hours

Answer: B

[▶ Video Solution](#)

66. If $x^2 + \frac{1}{x^2} = 7$, then what is the value of $x^3 + \frac{1}{x^3}$?

A 9

B 18

C 27

D 36

Answer: B

[▶ Video Solution](#)

Free SSC Study Material (18,000 Solved Questions)

67. There are three numbers P, Q and R. 30 percent of P is equal to the 15 percent of Q. 20 percent of Q is equal to the 10 percent of R. By what percent is R more than P?

A 150%

B 300%

C 200%

D 250%

Answer: B

[▶ Video Solution](#)

68. A milk merchant buys 30 litres of milk at the rate of Rs. 50 per litre and mixes 20 litres of water in it (water is free of cost). If he sells this mixture at the rate of Rs. 48 per litre, then what is the profit percentage?

A 50 percent

B 60 percent

C 40 percent

D 66.66 percent

Answer: B

[▶ Video Solution](#)

69. An incircle with center O is drawn inside an equilateral triangle ABC and the length of the side is 12 cm. Find the area (in sq.cm) of the triangle which is not in the incircle.

A 24.64

B 21.48

C 37.71

D 30.64

Answer: A

[▶ Video Solution](#)

1500+ Very Important Free SSC Solved Questions

70. A discount of 20 percent on article A is equal to the discount of 15 percent on the article B. What is the ratio of the marked price of articles A and B?

A 6 : 11

B 3 : 4

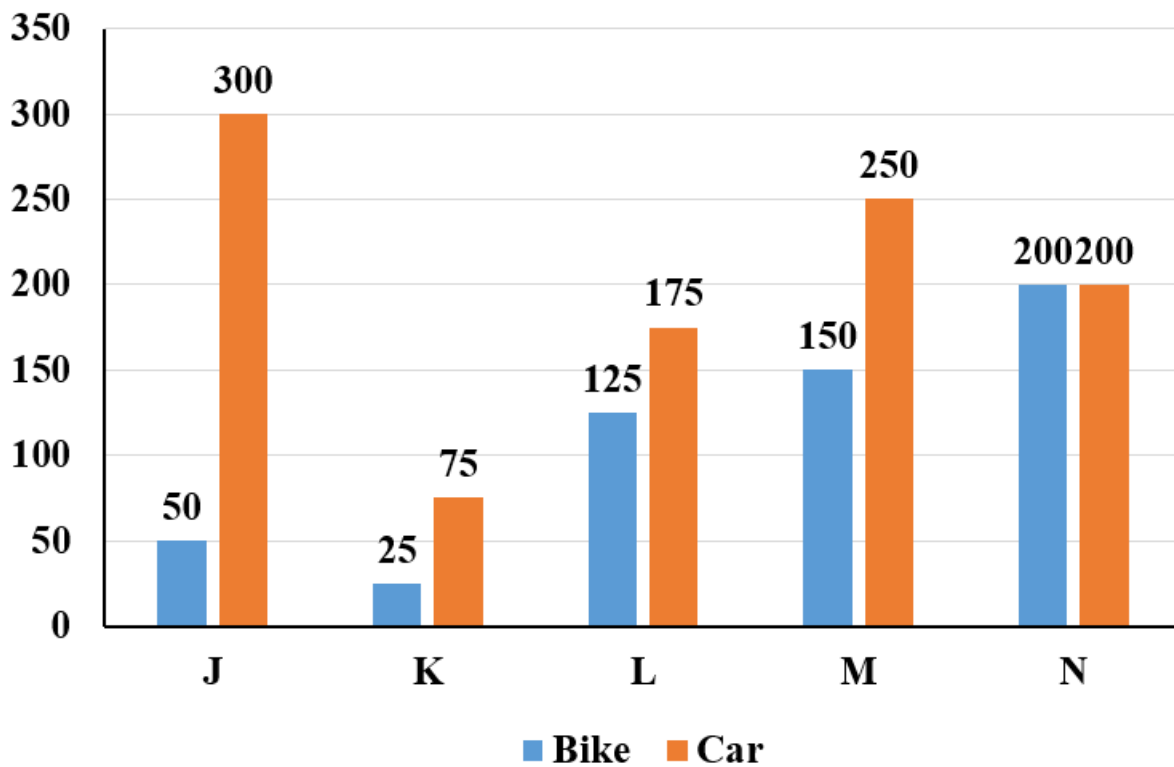
C 7 : 8

D 6 : 7

Answer: B

[▶ Video Solution](#)

71. The bar graph given below shows the sales of bikes and cars of five companies J, K, L, M and N.



P1 = The total sales of bikes of all the 5 companies.

P2 = The total sales of cars of the all 5 companies.

What is the value of (P2 - P1)?

- A 550
- B 350
- C 450
- D 400

Answer: C

[Video Solution](#)

72. If $m = \sec \theta - \tan \theta$ and $n = \operatorname{cosec} \theta + \cot \theta$, then what is the value of $m + n(m - 1)$?

- A 2
- B 1
- C 0
- D -1

Answer: D

[Video Solution](#)

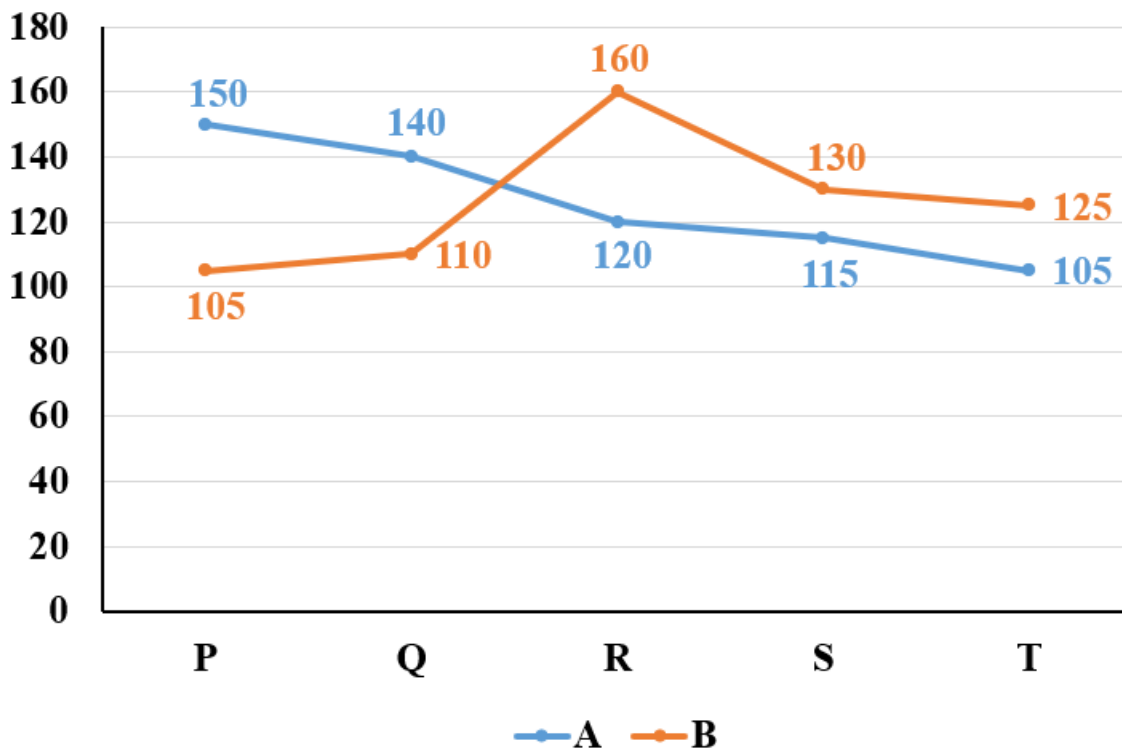
73. The ratio of income of Jitendra, and Narendra is 4 : 7 and the ratio of their expenditure is 6 : 5 respectively. If Jitendra saves Rs.400 out of Rs.1,800 income, then find the savings of Narendra.

- A Rs.2,900
B Rs.2,000
C Rs.4,900
D Rs.3,900

Answer: A

▶ Video Solution

74. The line chart given below shows the number of pencil sold by two shopkeepers A and B in 5 months.



Which of the following statement is correct?

- I. The number of pencil sold by A in P and Q together is 31.72 percent more than the number of pencil sold by B in S and T together.
II. The number of pencil sold by B in Q and R together is 105.88 percent of the number of pencil sold by A in P and T together.

- A Neither I nor II
B Only I
C Only II

D Both I and II

Answer: C

[▶ Video Solution](#)

75. What is the value of $\frac{4x^2+9y^2+12xy}{144}$?

A $\left(\frac{x}{3} + \frac{y}{4}\right)^2$

B $\left(\frac{x}{3} + y\right)^2$

C $\left(\frac{x}{4} + \frac{y}{6}\right)^2$

D $\left(\frac{x}{6} + \frac{y}{4}\right)^2$

Answer: D

[▶ Video Solution](#)

[Latest Job Updates on Telegram - Join here](#)

General Awareness

76. Which continent provides more than half of world's tin?

A Europe

B Asia

C North Africa

D Africa

Answer: B

[▶ Video Solution](#)

[Join SSC Daily Quiz Telegram Group](#)

77. Breakdown of pyruvate into lactic acid and energy in lack of oxygen takes place in which of the following?

A Bacteria

B Human muscle cells

C Yeast

D Mitochondria

Answer: B

[▶ Video Solution](#)

78. **Hari Prasad Chaurasia is associated with which of the following instruments?**

- A** Tabla
- B** Bansuri
- C** Veena
- D** Drum

Answer: B

[▶ Video Solution](#)

79. **International Women's Day is celebrated on?**

- A** 12th July
- B** 12th march
- C** 8th July
- D** 8th march

Answer: D

[▶ Video Solution](#)

80. **Who among the following was a famous ruler of the Maratha dynasty?**

- A** Prithviraj Chauhan
- B** Man Singh
- C** Chhatrapati Shivaji Maharaj
- D** Porus

Answer: C

[▶ Video Solution](#)

81. **The book titled 'The Ministry of Utmost Happiness' has been written by ____.**

- A** Jia Pingwa
- B** Arundhati Roy

C Sunita Narain

D Dan Brown

Answer: B

[▶ Video Solution](#)

82. In September 2022 at Bengaluru Space Expo (BSX) in Bengaluru, ISRO and space agency of _____ facilitated signage of half a dozen MoUs between the startups of the two countries focusing on the space tech.

A Australia

B France

C USA

D Israel

Answer: A

[▶ Video Solution](#)

SSC CHSL Free Mock Test

83. In 1757, _____ led the Company's army against Sirajuddaulah at Plassey.

A Lord Cornwallis

B Lord Minto

C Warren
Hastings

D Robert Clive

Answer: D

[▶ Video Solution](#)

84. Which among the following festivals is celebrated as the Telugu New Year?

A Monpa

B Ugadi

C Vishu

D Dasara

Answer: B

[▶ Video Solution](#)

85. According to WHO, If a person's BMI is below 18.5 he/she is classified as _____.

- A Mentally unfit
- B Underweight
- C Blind
- D Healthy

Answer: B

[▶ Video Solution](#)

SSC CHSL Previous Papers (DOWNLOAD PDF)

86. Which of the following pressure belt is known as the horse latitude?

- A Sub - Polar Low Pressure
- B Equatorial Low Pressure
- C Sub - Tropical High Pressure
- D High Pressure

Answer: C

[▶ Video Solution](#)

87. Who is the first Indian President to be born in Independent India?

- A Pratibha Patil
- B Droupadi Murmu
- C Ram Nath Kovind
- D Pranab Mukherjee

Answer: B

[▶ Video Solution](#)

88. Wages/day under Mahatma Gandhi NREGA is _____, w.e.f. 1st April, 2020, as per Economic Survey 2020-21.

- A Rs 182

B Rs 412

C Rs 202

D Rs 152

Answer: C

[▶ Video Solution](#)

SSC CGL Previous Papers (DOWNLOAD PDF)

89. Sheetal wants to create financial statements for her business. Which among the following software should she use for the same?

A Multimedia software

B Presentation software

C System software

D Spread sheet software

Answer: D

[▶ Video Solution](#)

90. As on November 2022, who is the first citizen of India?

A Amit Shah

B Droupadi Murmu

C Narendra Modi

D Sonia Gandhi

Answer: B

[▶ Video Solution](#)

91. Which among the following corridors was inaugurated by Prime Minister Narendra Modi in October 2022?

A Mahakal Lok Corridor

B Chennai Bengaluru Industrial Corridor

C Kashi Corridor

D North East Economic Corridor

Answer: A

[▶ Video Solution](#)

SSC CGL Free Mock Test (Latest Pattern)

92. Which of the following pairs of "term - sports" is correct?

I. Eagle - Hockey

II. Penalty kick - Volleyball

- A** Only I
- B** Neither I nor II
- C** Both I and II
- D** Only II

Answer: B

[▶ Video Solution](#)

93. Which of the following combinations of tenors of Treasury bills issued by Government of India is correct?

- A** 82 days, 182 days, 345 days
- B** 91 days, 182 days, 364 days
- C** 61 days, 145 days, 360 days
- D** 91 days, 152 days, 356 days

Answer: B

[▶ Video Solution](#)

94. Fourth edition of Khelo India Youth Games was hosted by which state of India?

- A** Madhya Pradesh
- B** Karnataka
- C** Haryana
- D** Assam

Answer: C

[▶ Video Solution](#)

SSC CHSL Important Questions and Answers (Download PDF)

95. 20 _____ is the highest peak in the Eastern Ghats.

- A Kanchenjunga
- B Khasi
- C Anai Mudi
- D Mahendragiri

Answer: D

[▶ Video Solution](#)

96. Which of the following is mentioned in state list of the seventh schedule of the Indian constitution?

- A Betting and gambling
- B Railways
- C Post office saving Bank
- D Inter-state trade and commerce

Answer: A

[▶ Video Solution](#)

97. Each orbit of International Space Station (ISS) takes _____ minutes.

- A 85 - 87
- B 83 - 86
- C 90 - 93
- D 80 - 82

Answer: C

[▶ Video Solution](#)

SSC CHSL Study Material

98. When the grains of sand are very fine and light, the wind can carry it over very long distances. When such sand is deposited in large areas, it is called _____.

- A stacks

- B** loess
- C** moraines
- D** mushroom

Answer: B

[▶ Video Solution](#)

99. **What is the full form of FTP?**

- A** File text paging
- B** File transfer paging
- C** File text protocol
- D** File transfer protocol

Answer: D

[▶ Video Solution](#)

00. **India's National Air Sports Policy was released in the year ____.**

- A** 2000
- B** 2012
- C** 2016
- D** 2022

Answer: D

[▶ Video Solution](#)

SSC CHSL Free App