



All rights reserved. No part of this publication may be reproduced, distributed, or transmitted in any form or by any means, electronic, mechanical, photocopying, recording or otherwise, or stored in any retrieval system of any nature without the permission of cracku.in, application for which shall be made to support@cracku.in

SSC CGL 13th Dec 2022 Shift-4

General Intelligence and Reasoning

1. In a certain code language, 'DRAWING' is written as 'CQZVHMF' and 'TURQUOISE' is written as 'STQPTNHRD', how will 'COLOR' be written in that language?

- A BNKNQ
- B BMKMQ
- C ANKNQ
- D AMKMQ

Answer: A

SSC CGL Free Mock Test

2. Three statements are followed by three conclusions numbered I, II and III. You have to consider these statements to be true, even if they seem to be at variance with commonly known facts. Decide which of the given conclusions logically follow/s from the given statements.

Statements:

Few chips are cakes.

All cakes are ice creams.

All ice creams are sweets.

Conclusions:

(I) Some sweets are cakes.

(II) Some ice creams are cakes.

(III) All cakes are sweets.

- A Only conclusion I follows
- B Only conclusion II follows
- C All conclusions I, II and III follow
- D Either conclusion I or conclusion III follows

Answer: C

3. After arranging the given words according to dictionary order, which word will come at 'Third' position?

- 1. Unaffected
- 2. Unarmed
- 3. Unasked
- 4. Unattached
- 5. Unauthorized

- A Unauthorized
- B Unarmed
- C Unasked
- D Unattached

Answer: C

4. Select the set in which the numbers are related in the same way as are the numbers of the following sets.
(NOTE : Operations should be performed on the whole numbers, without breaking down the numbers into its constituent digits.
E.g. 13 - Operations on 13 such as adding /subtracting /multiplying etc. to 13 can be performed. Breaking down 13 into 1 and 3 and then performing mathematical operations on 1 and 3 is not allowed)
(60, 17, 13)
(62, 14, 17)

- A (56, 15, 13)
B (43, 9, 12)
C (55, 18, 9)
D (57, 15, 14)

Answer: A

SSC CGL Previous Papers (DOWNLOAD PDF)

5. Which letter cluster will replace the question mark (?) to complete the given series?
EDIC, FGJF, ?, HMLL, IPMO

- A GIKI
B GJKJ
C GJLI
D GJKI

Answer: D

6. After interchanging the given two numbers and two signs what will be the values of equation (I) and (II) respectively?
÷ and ×, 1 and 3
I. $6 + 4 - 9 \times 3 \div 1$
II. $4 \times 3 - 1 + 8 \div 2$

- A 26, 17
B -17, 17
C 9, 18
D 11, 15

Answer: B

7. A series is given with one term missing. Select the correct alternative from the given ones that will complete the series.
GAR, AXS, UUT, ORU, ?

- A IOV
B MOV
C QRT
D IMR

Answer: A

25 SSC CHSL Mocks for just Rs. 149

8. Three of the following letter-clusters are alike in some manner and hence form a group. Which letter-cluster does not belong to that group?

- A WPUQ
- B MEKF
- C BXC Y
- D ZLXM

Answer: C

9. Select the odd group of numbers. (NOTE: Operations should be performed on the whole numbers, without breaking down the numbers into its constituent digits. E.g. 13 - Operations on 13 such as adding /subtracting /multiplying etc. to 13 can be performed. Breaking down 13 into 1 and 3 and then performing mathematical operations on 1 and 3 is not allowed)

- A (57 -53 -49)
- B (60-56 - 52)
- C (50-46 -42)
- D (47 -43 -37)

Answer: D

10. Which two signs and two numbers should be interchanged in the following equation to make it correct?

$$78 + 456 - 45 \times 12 \div 4 = 519$$

- A 12 and 4, - and \times
- B 78 and 456, \div and \times
- C 45 and 12, + and \div
- D 456 and 45, \div and -

Answer: B

SSC CGL Tier-2 Previous Papers PDF

11. In the following question, select the missing number from the given series.

123, 125, 127, ?, 131, 133

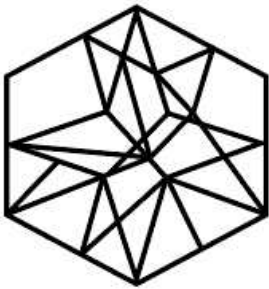
- A 128
- B 129
- C 130
- D 145

Answer: B

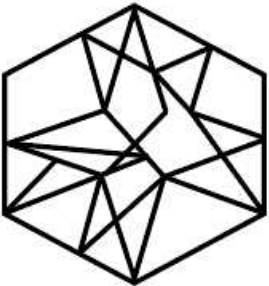
12. Select the option figure in which the given figure is embedded (rotation is NOT allowed).



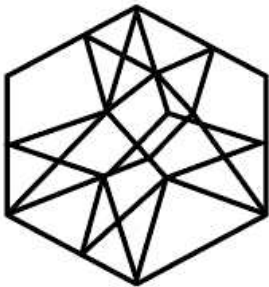
A



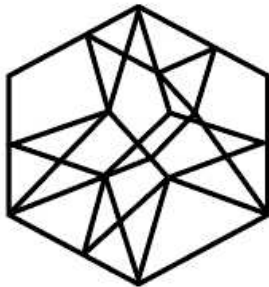
B



C



D



Answer: C

13. If $A \times B$ means that A is the father of B, $A - B$ means that A is the mother of B, $A + B$ means that A is the brother of B then which of the following expression shows that Q is the son of P?

A $P \times Q + R$

B $Q \times P + R$

C $P + R \times Q$

D $P \times Q - R$

Answer: A

SSC CGL Important Questions PDF

14. U \$ V means 'U is the sister of V'
U @ V means 'U is the husband of V'
U * V means 'U is the son of V'
U ÷ V means 'U is the mother of V'
If O \$ P * B @ F, how is O related to F?

- A Sister
- B Brother
- C Daughter
- D Daughter-in-law

Answer: C

15. In the following question below are given some statements followed by some conclusions based on those statements. Taking the given statements to be true even if they seem to be at variance from commonly known facts. Read all the conclusions and then decide which of the given conclusion logically follows the given statements.

Statements:

I. All O are C.

II. All C are D.

Conclusions:

I. Some C are O.

II. Some D are C.

III. No O is D.

- A Both conclusions II and III follows
- B All conclusion follows
- C Both conclusions I and II follows
- D Both conclusions I and III follows

Answer: C

16. Select the option that is related to the fifth letter-cluster in the same way as the second letter-cluster is related to the first letter-cluster and the fourth letter-cluster is related to the third letter-cluster.

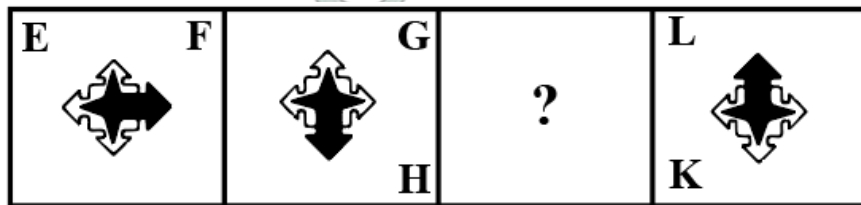
ABILITY : LIBAYTI :: CHRONIC : ORHCCIN :: HEAVILY : ?

- A VAEHYLI
- B HAVIEYL
- C AEVHLYI
- D LYIAVHE


Answer: A

1500 + Free Must Solved SSC Questions (With Solutions)

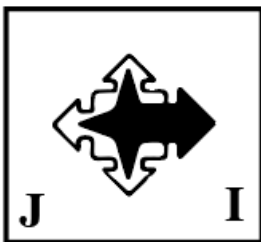
17. Select the figure from among the given options that can replace the question mark (?) in the following series.




A




B



C



D



Answer: A

18. Three different positions of the same dice are shown. Find the number on the face opposite the face showing '2'.

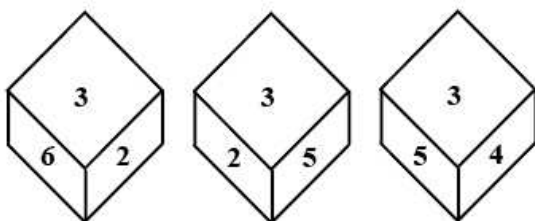


Figure 1

Figure 2

Figure 3

A 6

B 3

C 4

D 1

Answer: C

19. Which two numbers, from amongst the given options, should be interchanged to make the given equation correct?

$$[(\sqrt{256}) \div 4]^3 + (6)^2 - (12 \times 8) + 66 + (36 \div 12) = 65$$

A 6 and 8

B 66 and 65

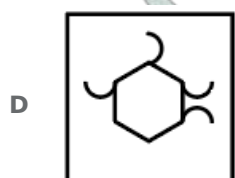
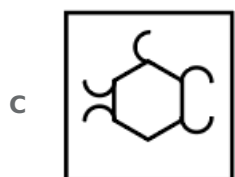
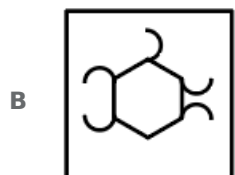
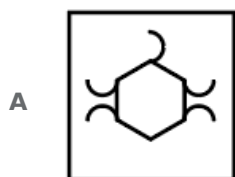
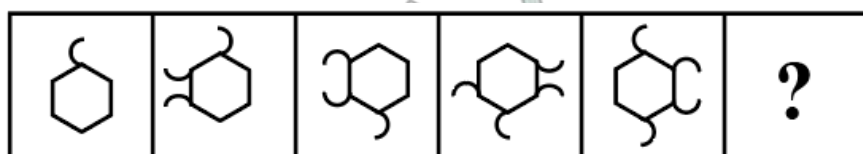
C 4 and 8

D 66 and 36

Answer: C

General Science Notes for SSC CGL

20. Select the figure from among the given options that can replace the question mark (?) in the following series.



Answer: A

21. Select the set in which the numbers are related in the same way as are the numbers of the following sets.

(NOTE : Operations should be performed on the whole numbers, without breaking down the numbers into its constituent digits.

E.g. 13 - Operations on 13 such as adding / subtracting / multiplying etc. to 13 can be performed. Breaking down 13 into 1 and 3 and then performing mathematical operations on 1 and 3 is NOT allowed)

(4, 6, 9)

(25, 10, 4)

- A** (23, 3, 32)
- B** (45, 20, 19)
- C** (6, 36, 216)
- D** (98, 7, 89)

Answer: C

22. In a certain code language, 'TOP' is coded as '102' and 'BAD' is coded as '14'. How will 'DOG' be coded in that language?

- A** 51
- B** 52
- C** 53
- D** 50

Answer: B

Free SSC Study Material (18,000 Solved Questions)

23. Select the option that is related to the fifth letter-cluster in the same way as the second letter-cluster is related to the first letter-cluster and the fourth letter-cluster is related to the third letter-cluster.

LAMP : RQGT :: GAME : GQGO :: GOAT : ?

- A** OUEV
- B** EVUO
- C** VEUO
- D** ACDF

Answer: C


24. Select the option that is related to the fifth number in the same way as the second number is related to the first number and the fourth number is related to the third number.

6 : 12 :: 9 : 21 :: 3 : ?

- A** 3
- B** 7
- C** 5
- D** 8

Answer: A

25. Select the option figure which is embedded in the given figure as its part (rotation is NOT allowed).



- A
- B
- C
- D

Answer: D

SSC Exam Free Videos (Youtube)

General Awareness

26. Who among the following won the Best Music Director award at the 67th National Film Award Ceremony?

- A Gopi Sundar
- B D. Imman
- C Mani Sharma
- D Devi Sri Prasad

Answer: B

SSC Free Preparation App

27. _____ are known as narrow money.

- A M1 and M2
- B M2 and M4
- C M3 and M2
- D M1 and M4

Answer: A

28. Samudragupta's mother belonged to which of the following gana?

- A Koliya

- B** Lichchhavi
- C** Sakya
- D** Vajji

Answer: B

29. **Padma Subrahmanyam** is the exponent of which of the following Indian dance forms?

- A** Kathakali
- B** Bharatanatyam
- C** Kathak
- D** Mohiniattam

Answer: B

Daily Free SSC Practice Set

30. The crust is the Earth's outermost layer that is less than _____ percent of Earth by mass, with oceanic crust and continental crust often consisting of more felsic rocks.

- A** 5
- B** 1
- C** 2
- D** 10

Answer: B

31. Which of the following jurisdictions of the Supreme Court allows it to settle disputes between the centre and state and amongst states?

- A** Appellate
- B** Advisory
- C** Writ
- D** Original

Answer: D

32. Cells of meristematic tissue lack _____.

- A** Cellulose wall
- B** Vacuoles
- C** cytoplasm
- D** Nuclei

Answer: B

SSC CGL Free Online Coaching

33. The upper portion of the mantle is called ____.

- A lithosphere
- B stratosphere
- C mesosphere
- D asthenosphere

Answer: D

34. Guru Purnima, a festival celebrated by Hindus, Jains and Buddhists in India falls in which month of Hindu calendar?

- A Kartika
- B Vaisakha
- C Sravana
- D Ashadha

Answer: D

35. In May 2022, the Inter-State Council, which works to promote and support cooperative federalism in the country, has been reconstituted. Who will be the chairman of this council?

- A President of India
- B Chief Justice of India
- C Prime Minister of India
- D Finance minister of India

Answer: C

SSC CHSL Previous Question papers (download pdf)

36. Which of the following festivals is mainly celebrated in Arunachal Pradesh?

- A Hornbill
- B Ambubachi
- C Wangala
- D Solung

Answer: D

37. The poverty ratio has declined to _____ in 2011-12 in Urban India.

- A 21.4 percent
- B 26.4 percent
- C 23.4 percent

D 28.4 percent

Answer: B

38. At which of the following places was the FIFA Men's World Cup, held in 2018?

A Russia

B China

C Turkey

D Columbia

Answer: A

Free SSC Study Material (18,000 Solved Questions)

39. In which year, James Mill Published a massive three-volume work, "A History of British India"?

A 1815

B 1807

C 1805

D 1817

Answer: D

40. The ISSF Junior World Cup 2022 was held in _____.

A Germany

B Iran

C Turkey

D UAE

Answer: A

41. How many delegates attended the first session of Congress in 1885?

A 62

B 78

C 68

D 72

Answer: D

Latest Job Updates on Telegram - Join here

42. Effect of The Industrial Policy, 1956 on industries was _____.

- A** industries started to get diversified
- B** India become self-sufficient in industrial goods
- C** imports of those goods which could be produced in India itself was avoided
- D** industries share fell in the GDP during 1991

Answer: A

43. Which of the following revolutionary groups' members assassinated Assistant Superintendent of Police John Saunders in 1927?

- A** Hindustan Sewa Dal
- B** Hindustan Republican Association
- C** Abhinav Bharat Secret Society
- D** Anushilan Samiti

Answer: B

44. What is the correct percentage by volume of various gases in Earth's atmosphere?

- A** 20.95% nitrogen, 78.09% oxygen, and 0.04% carbon dioxide and other greenhouse gases.
- B** 10.95% nitrogen, 88.09% oxygen, and 0.09% carbon dioxide and other greenhouse gases.
- C** 10.95% nitrogen, 78.09% oxygen, and 0.03% carbon dioxide and other greenhouse gases.
- D** 78% nitrogen, 21% oxygen, and 0.03% carbon dioxide and other greenhouse gases.

Answer: D

Join SSC Daily Quiz Telegram Group

45. The Indian Antarctic Bill, 2022 prohibits which of the following activities in Antarctica?

- I. Nuclear explosion
- II. Introduction of non-sterile soil
- III. Discharge of garbage

- A** I and II
- B** I, II and III
- C** Only III
- D** II and III

Answer: B

46. In organic chemistry, which of the following is an empirical rule used to predict the regioselectivity of electrophilic addition reactions of alkanes and alkynes?

- A** Cornforth's rules
- B** Bredt's rule
- C** Markovnikov's rule

D Baldwin's rules

Answer: C

47. Which crop does not require high rainfall and high temperature?

A Rice

B Jute

C Maize

D Cotton

Answer: C

SSC CGL Free Mock Test

48. India's first Olympic Values Education Programme (OVEP) was launched in _____.

A Uttar Pradesh

B Punjab

C Odisha

D Haryana

Answer: C

49. According to Article 51 A (a) of the Constitution of India, it shall be the duty of every Indian citizen to abide by the _____ and respect its ideals and institutions.

A constitution

B secularism

C socialism

D democracy

Answer: A

50. In which of the following states of India is "MANAS" biosphere Reserve located?

A Tripura

B Manipur

C Meghalaya

D Assam

Answer: D

SSC CGL Previous Papers (DOWNLOAD PDF)

Quantitative Aptitude

Downloaded from cracku.in

51. The table given below shows the cost price and selling of four different articles.

Articles	Cost price	Selling price
J	650	750
K	370	450
L	450	650
M	590	650

What is the difference between the average selling price and average cost price of all the articles?

- A 110
- B 160
- C 710
- D 140

Answer: A

25 SSC CHSL Mocks for just Rs. 149

52. Two stations R and S are 400 km apart from each other. A train leaves from R to S and simultaneously another train leaves from S to R. Both trains meet after 10 hours. If the speed of the first train is 4 km/hr more than the second train, then what is the speed of the slower train?

- A 18 km/hr
- B 26 km/hr
- C 16 km/hr
- D 22 km/hr

Answer: A

53. If $\tan(\alpha + \beta) = a$, $\tan(\alpha - \beta) = b$, then the value of $\tan 2\alpha$ is:

- A $\frac{a+b}{1-ab}$
- B $\frac{a+b}{1+ab}$
- C $\frac{a-b}{1+ab}$
- D $\frac{a-b}{1-ab}$

Answer: A

54. P and Q are two alloys of aluminium and copper. The ratios of aluminium and copper in P and Q are 5 : 11 and 3 : 5, respectively. If a third alloy is formed by mixing alloys P and Q in the ratio of 1 : 3, then aluminium is what percentage (rounded off to the nearest integer) of the copper in the third alloy ?

- A 63 Percent
- B 52 Percent
- C 48 Percent

D 56 Percent

Answer: D

SSC CGL Tier-2 Previous Papers PDF

55. A certain sum of money lent at simple interest amounts to ₹1,200 in 2 years and ₹1,600 in 4 years. The rate per cent per annum is:

A 20%

B 30%

C 25%

D 16%

Answer: C

56. If the nine-digit number 3422213AB is divisible by 99, then what is the value of $2A + B$?

A 11

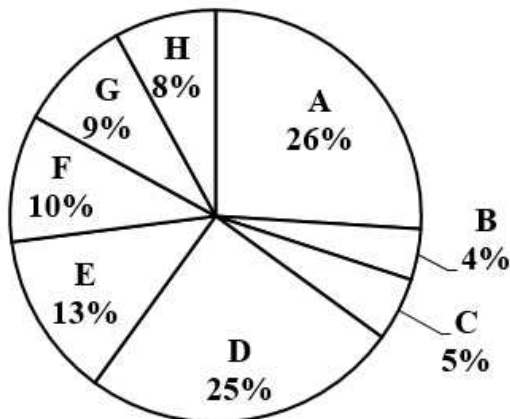
B 12

C 10

D 13

Answer: A

57. The pie chart given below shows the number of boys in 8 schools. The total number of boys in all these 8 schools is 5000. Number of boys in a particular school is shown as a percent of total number of boys in all these 8 schools.



What is the ratio of total number of boys in B, D and E to the total number of boys in A, C and F?

A 37 : 57

B 42 : 41

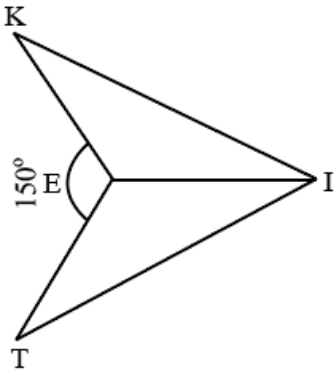
C 57 : 38

D 41 : 42

Answer: B

SSC CGL Important Questions PDF

58.

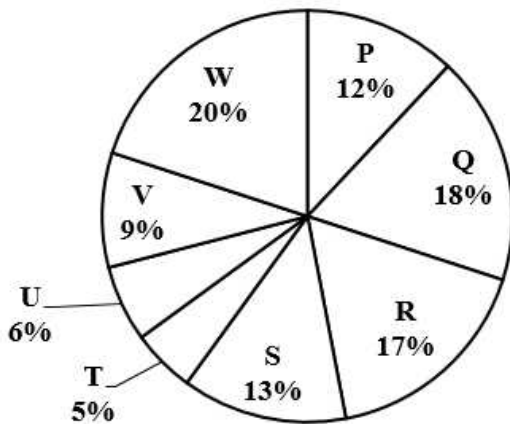


In the given figure, if $KI = IT$ and $EK = ET$, then $\angle TEI = \dots\dots\dots$

- A 75°
- B 125°
- C 105°
- D 150°

Answer: C

59. The pie chart given below shows the number of car sold by 8 different companies. The total number of car sold by all these 8 companies are 5,000. Number of cars sold by a particular company is shown as a percent of total number of cars sold by all these 8 companies.



What is the ratio of total central angle formed by sector R and S to the total central angle formed by sector U and V?

- A 1 : 4
- B 2 : 1
- C 1 : 2
- D 3 : 1

Answer: B

60. In a $\triangle ABC$, $\angle B + \angle C = 110^\circ$, then find the measure of $\angle A$.

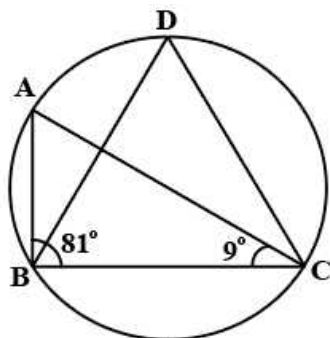
- A 90°

- B 70°
- C 80°
- D 60°

Answer: B

1500 + Free Must Solved SSC Questions (With Solutions)

61. In the given figure $\angle ABC = 81^\circ$ and $\angle ACB = 9^\circ$. What is the value of $\angle BDC$?



- A 80°
- B 90°
- C 70°
- D 60°

Answer: B

62. If $x = 2 - 2^{\frac{1}{3}} + 2^{\frac{2}{3}}$, then find the value of $x^3 - 6x^2 + 18x$.

- A 40
- B 33
- C 45
- D 22

Answer: D

63. If A is an acute angle, the simplified form of

$$\frac{\cos(\pi - A) \cdot \cot\left(\frac{\pi}{2} + A\right) \cos(-A)}{\tan(\pi + A) \tan\left(\frac{3\pi}{2} + A\right) \sin(2\pi - A)} \text{ is:}$$

- A $\cos^2 A$
- B $\sin A$
- C $\sin^2 A$
- D $\cos A$

Answer: D

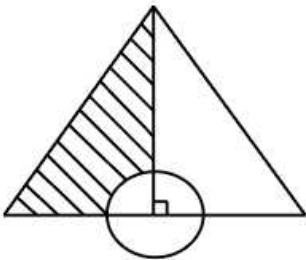
General Science Notes for SSC CGL

64. If $a + b + c = 5$, $a^3 + b^3 + c^3 = 85$ and $abc = 25$, then find the value of $a^2 + b^2 + c^2 - ab - bc - ca$.

- A 2
- B 4
- C 6
- D 8

Answer: A

65. Find the area of the shaded portion of an equilateral triangle with sides 6 units shown in the following figure. A circle of radius 1 unit is centred at midpoint of a side of the triangle.



- A $\frac{1}{2} (9\sqrt{3} - \frac{11}{7}) \text{ unit}^2$
- B $\frac{1}{4} (9\sqrt{3} - \frac{11}{7}) \text{ unit}^2$
- C $\frac{1}{2} (6\sqrt{3} - \frac{11}{7}) \text{ unit}^2$
- D $\frac{1}{2} (9\sqrt{3} - \frac{22}{7}) \text{ unit}^2$

Answer: A

66. The table given below shows the sales turnover of 5 different companies.

Company	Sales turnover
E	270
F	230
G	350
H	400
I	300

What is the difference between the sales turnover of company H and F?

- A 190
- B 210
- C 170
- D 230

Answer: C

Free SSC Study Material (18,000 Solved Questions)

67. If $a = -12$, $b = -6$ and $c = 18$, then what is the value of $\frac{(2abc)}{9}$

- A 554
- B 288
- C -288
- D 144

Answer: B

68. By selling an article for Rs.33,000 a man gains 10%. To get a profit of 20%, he has to sell it for:

- A Rs.30,000
- B Rs.35,000
- C Rs.36,000
- D Rs.36,600

Answer: C

69. In nine innings of cricket, the average of a batsman is 58 runs. How many runs does he need to make in the tenth innings to get the average score 61?

- A 88
- B 69
- C 79
- D 100

Answer: A

SSC Exam Free Videos (Youtube)

70. Find the mean proportional between 25 and 225.

- A 65
- B 25
- C 75
- D 85

Answer: C

71. Pawan can do a piece of work in 32 days. He worked for 8 days and left the work. Thereafter Sandeep finished the remaining work in 27 days. In how many days can Pawan and Sandeep together do the whole work?

- A $16\frac{16}{17}$ days
- B $16\frac{13}{17}$ days

C $16\frac{15}{17}$ days

D $16\frac{14}{17}$ days

Answer: A

72. The ratio of two numbers is 6 : 7 and their HCF is 3. Their LCM is ____.

A 124

B 128

C 122

D 126

Answer: D

SSC Free Preparation App

73. $\triangle PQR$ is right-angled at Q. The length of PQ is 5 cm and $\angle PRQ = 30^\circ$. Determine the length of side QR.

A $5\sqrt{3}$ cm

B $3\sqrt{3}$ cm

C $\frac{1}{\sqrt{3}}$ cm

D $\frac{5}{\sqrt{3}}$ cm

Answer: A

74. A shopkeeper allows a discount of 12% to his customers and still gains 18%. Find the marked price of an article which costs Rs.528 to the shopkeeper. (Answer to the nearest rupees)

A Rs.728

B Rs.708

C Rs.695

D Rs.798

Answer: B

75. 'O' is a point in the interior of an equilateral triangle. The perpendicular distance from 'O' to the sides are $\sqrt{3}$ cm, $2\sqrt{3}$ cm, $5\sqrt{3}$ cm. The perimeter of the triangle is:

A 48 cm

B 32 cm

C 24 cm

D 64 cm

Answer: A

Daily Free SSC Practice Set

English Comprehension

76. A sentence has been given with a blank to be filled with an appropriate word. Choose the correct alternative.
His heart pounded as he checked his rearview mirror and saw only the dark _____ of highway.

- A vitality
- B stretch
- C trench
- D emancipation

Answer: B

SSC CGL Free Online Coaching

77. The question below consists of a set of labeled sentences. Out of the four options given, select the most logical order of the sentences to form a coherent paragraph.

P. Within an hour, he was in jail.

Q. He made no attempts to hide his identity and even looked directly into the security camera and smiled.

R. On Jan 6, 1995, McArthur Wheeler boldly robbed two banks in broad daylight with no disguise.

S. By 11:00 at night, his picture was all over the news, leading an informant to identify Wheeler to the police.

- A RPSQ
- B SPQR
- C RQSP
- D PRQS

Answer: C

78. Select the most appropriate synonym of the underlined word in the given sentence.

Isn't knowledge supposed to make life sweeter and happier?

- A Curriculum
- B Profession
- C Wisdom
- D Superiority

Answer: C

79. Select the most appropriate option that can substitute the underlined segment in the given sentence.

The man which was present at the meeting spoke against the chairperson.

- A The man which were present
- B The men which was present
- C The man whom was present
- D The man who was present

Answer: D

SSC CHSL Previous Question papers (download pdf)

80. Select the most appropriate option to complete the given sentence.

They were not able to get the item from the store because it was _____.

- A in fashion
- B in vain
- C out of stock
- D on leave

Answer: C

81. Select the most appropriate meaning of the underlined idiom in the given sentence.

I must tell you that it all went pear-shaped after you left the meeting in the middle.

- A Went terribly wrong
- B Became very entertaining
- C Became tragic
- D Turned out fine

Answer: A

82. Select the most appropriate ANTONYM of the word 'dwindle' in the sentence given below.

Rahul advised Neerja to appreciate or motivate her younger brother and not to dwindle or neglect his ideas all the time.

- A deprecate
- B complement
- C motivate
- D neglect

Answer: B

Free SSC Study Material (18,000 Solved Questions)

83. Select the most appropriate option to substitute the underlined segment in the given sentence.

The bus is now full of passengers, it will leave soon.

- A leaves
- B is leaving
- C is going to leave
- D has to leave

Answer: C

84. Select the option that expresses the given sentence in active voice.
Where was this pen found by him?

- A Where do he find this pen?
- B Where does he find this pen?
- C Where did he found this pen?
- D Where did he find this pen?

Answer: D

85. Select the most appropriate option that can substitute the underlined segment in the given sentence. If there is no need to substitute it, select 'No substitution'.
Kranthi loves to swim at the local swimming pool in order that relieve his work stress.

- A in order which
- B No substitution
- C in order as to relieve
- D in order to relieve

Answer: D

Latest Job Updates on Telegram - Join here

86. Select the most appropriate ANTONYM of the given word.
Inherent

- A Natural
- B extraneous
- C Induce
- D Restricted

Answer: B

87. Select the idiom from the given options that gives the most appropriate meaning of the highlighted text in the following sentence.
A village fair is a place that contains many interesting objects. People of all age groups eagerly wait for this.

- A Road to Damascus
- B Ivory tower
- C Aladdin's cave
- D Jewel in the crown

Answer: C

88. Select the option that expresses the given sentence in passive voice.
I named the child Ritesh.

- A** The child was named Ritesh.
- B** The child Ritesh is named.
- C** The child is named Ritesh.
- D** The child Ritesh was named.

Answer: A

Join SSC Daily Quiz Telegram Group

89. Select the sentences that contains no spelling errors in the given context.

- A** Furrow from the protestors was heard outside the president's house.
- B** Furoroe from the protestors was heard outside the president's house.
- C** Furore from the protestors was heard outside the president's house.
- D** Furorow from the protestors was heard outside the president's house.

Answer: C

90. In the given sentence, one word may have been incorrectly spelt. Select the correctly spelt word from the given alternatives. If there is no error, select 'No error' as your answer.

Decades of enimity between Lomovs and Chubukovs came to an end with the marriage between the two families.

- A** enimity
- B** enmity
- C** anaemity
- D** No error

Answer: B

91. Select the correct direct form of the given sentence.

She tells me that I am her lucky charm.

- A** She says to me, "You was my lucky charm."
- B** She said to me, "You are my lucky charm."
- C** She says to me, "I am your lucky charm."
- D** She says to me, "You are my lucky charm."

Answer: D

SSC CGL Free Mock Test

92. Select the most appropriate synonym of the given word.

Chide

- A** Prevent

- B** Rescue
- C** Scold
- D** Follow

Answer: C

93. The following sentence has been split into four segments. Identify the segment that contains a grammatical error.
The boy, as well as / his friends, were / absent from the class / when the teacher came.

- A** absent from the class
- B** when the teacher came
- C** his friends, were
- D** The boy, as well as

Answer: C

94. Rearrange the parts of the sentence in correct order.

Genome-wide

P. with metabolites that influence

Q. traits like flavour, disease resistance and texture

R. analysis of each apple enabled

S. identification of genetic markers associated

- A** PQRS
- B** QRPS
- C** RSPQ
- D** QRSP

Answer: C

SSC CGL Previous Papers (DOWNLOAD PDF)

95. Parts of the following sentence have been given as options. Select the option that contains a grammatical error.
He describes the place vivid / that inspired in us / a wish to visit / the same.

- A** He describes the place vivid
- B** the same.
- C** a wish to visit
- D** that inspired in us

Answer: A

Instructions [96 - 100]

In the following passage, some words have been deleted. Read the passage carefully and select the most appropriate option to fill in each blank.

Comprehension:

Exercise is the (1)_____ of muscles and limbs which is done to (2)_____ a specific outcome. The chief aim of doing exercise is usually (3)_____ fitness. At the end of our (4)_____ day, we prefer to (5)_____ in leisure activities rather than a workout.

96. Select the most appropriate option to fill in blank no. 1.

- A motion
- B current
- C movement
- D fluctuation

Answer: C

97. Select the most appropriate option to fill in blank no. 2.

- A yield
- B attain
- C establish
- D procure

Answer: B

25 SSC CHSL Mocks for just Rs. 149

98. Select the most appropriate option to fill in blank no. 3.

- A magnifying
- B amplifying
- C intensifying
- D enhancing

Answer: D

99. Select the most appropriate option to fill in blank no. 4.

- A lively
- B hectic
- C furious
- D feverish

Answer: B

100. Select the most appropriate option to fill in blank no. 5.

- A indulge
- B luxuriate
- C abandon
- D coddle

SSC CGL Tier-2 Previous Papers PDF

SSC CGL Free Mock Test

SSC CGL Previous Papers (DOWNLOAD PDF)

25 SSC CHSL Mocks for just Rs. 149

SSC CGL Tier-2 Previous Papers PDF

SSC CGL Important Questions PDF

1500 + Free Must Solved SSC Questions (With Solutions)

General Science Notes for SSC CGL

Free SSC Study Material (18,000 Solved Questions)

SSC Exam Free Videos (Youtube)

SSC Free Preparation App

Daily Free SSC Practice Set

SSC CGL Free Online Coaching

SSC CHSL Previous Question papers (download pdf)

Free SSC Study Material (18,000 Solved Questions)

Latest Job Updates on Telegram - Join here

Join SSC Daily Quiz Telegram Group