



All rights reserved. No part of this publication may be reproduced, distributed, or transmitted in any form or by any means, electronic, mechanical, photocopying, recording or otherwise, or stored in any retrieval system of any nature without the permission of cracku.in, application for which shall be made to [support@cracku.in](mailto:support@cracku.in)

# SSC Stenographer 17th Nov 2022 Shift 2

## General Intelligence and Reasoning

1. Given below are two statements and two conclusions. Take the statements to be true even if they are at variance with commonly known facts, and decide whether the conclusion(s) follow(s) the given statements.

Statements:

All eyes are noses.

Some noses are lips.

Conclusions:

I. Some noses are eyes.

II. All lips are noses.

- A** Only conclusion I follows
- B** Neither conclusion I nor II follows
- C** Only conclusion II follows
- D** Both the conclusions follow

**Answer:** A

## Daily Free Online GK tests

2. Three statements are given followed by three conclusions numbered I, II and III. Assuming the statements to be true, even if they seem to be at variance with commonly known facts, decide which of the conclusions logically follow(s) from the statements.

Statements:

No rain is an earthquake.

All rains are floods.

Some rains are droughts.

Conclusions:

I. Some floods are earthquakes.

II. Some droughts are earthquakes.

III. Some floods are droughts.

- A** All the conclusions follow
- B** Only conclusions I and III follow
- C** Only conclusion III follows
- D** Only conclusions II and III follow

**Answer:** C

3. If A denotes '+', B denotes '×', C denotes '-', and D denotes '÷', then what will come in place of '?' in the following equation?  
 $196 \text{ D } (2 \text{ A } 3 \text{ B } 4) = 4 \text{ ? } 5 \text{ B } 2$

- A** A
- B** B
- C** C
- D** D

**Answer: A**

4. Select the set in which the numbers are related in the same way as are the numbers of the following set.  
(NOTE : Operations should be performed on the whole numbers, without breaking down the numbers into its constituent digits. E.g. 13 - Operations on 13 such as adding /subtracting /multiplying etc. to 13 can be performed. Breaking down 13 into 1 and 3 and then performing mathematical operations on 1 and 3 is NOT allowed)  
(17, 34, 68)  
(24, 48, 96)

- A** (31, 62, 106)  
**B** (26, 52, 156)  
**C** (29, 58, 116)  
**D** (14, 42, 84)

**Answer: C**

### SSC CHSL Previous Question papers (download pdf)

5. Seven people I, Y, O, U, R, P, and T are sitting in a straight row, facing north. P sits at the extreme right. Only six people sit to the right of R. Y sits fourth to the left of P. T is the immediate neighbour of R. I sits fourth to the right of R. U and T are the immediate neighbours of Y. O is the immediate neighbour of P. Who sits at the centre of the row?

- A** T  
**B** I  
**C** U  
**D** Y

**Answer: C**

6. Select the set in which the number are related in the same way as the numbers of the given sets. (NOTE : Operations should be performed on the whole numbers, without breaking down the numbers into its constituent digits. E.g. 13 - Operations on 13 such as adding /subtracting /multiplying etc. to 13 can be performed. Breaking down 13 into 1 and 3 and then performing mathematical operations on 1 and 3 is not allowed.)  
(339, 440, 541)  
(201, 302, 403)

- A** (388, 488, 590)  
**B** (332, 432, 533)  
**C** (437, 538, 639)  
**D** (536, 638, 738)

**Answer: C**

7. Three statements are given followed by three conclusions numbered I, II and III.

Assuming the statements to be true, even if they seem to be at variance with commonly known facts, decide which of the conclusions logically follow(s) from the statements.

Statements:

No sheet is a pillow.

Some pillows are blankets.

All blankets are rugs.

Conclusions:

I. Some pillows are rugs.

II. All blankets can never be sheets.

III. Some rugs are sheets.

- A Only conclusion III follows
- B Only conclusion II follows
- C Only conclusions II and III follow
- D Only conclusions I and II follow

**Answer:** D

### SSC CPO Previous Question papers (download pdf)

8. Which of the following numbers will replace the question mark (?) in the given series?

4, 21, 39, 65, 100, 199, ?

- A 323
- B 332
- C 322
- D 232

**Answer:** A

9. Three of the following four letter-clusters are alike in a certain way and one is different.

Pick the odd one out.

- A HSVW
- B EVTR
- C GTRP
- D BYWU

**Answer:** A

10. Town A is to the northwest of Town B. Town D is to the north of Town C. Town B is to the east of Town C. Town M is to the North of Town B. Town D is southeast of Town A.

Town M is East of Town A. What is the position of Town D with respect to Town B?

- A East
- B North

C Southeast

D Northwest

**Answer:** D

### SSC GD Previous Question papers (download pdf)

11. In this question, the statement is followed by two conclusions. Which of the two conclusions is/are true?

**Statement:**  $S \leq P = U < T > V \geq X > W$

**Conclusions:** I.  $T > S$

II.  $W < V$

A Only conclusion I is true

B Both conclusions I and II are true

C Neither conclusion I nor II is true

D Only conclusion II is true

**Answer:** B

12. Select the option that is related to the third word in the same way as the second word is related to the first word.

(The words must be considered as meaningful English words and must not be related to each other based on the number of letters/number of consonants/vowels in the word)

**Mirror : Reflection :: Glass : ?**

A Repulsion


B Retention

C Refraction

D Retraction

**Answer:** C

13. How many triangles are there in the given figure?



A 20

B 10

C 18

D 8

**Answer: D**

## SSC MTS Previous Question papers (download pdf)

14. Select the option that indicates the correct arrangement of the given parts of the human hand in a logical and meaningful order.

1. Wrist
2. Thumb
3. Elbow
4. Palm
5. Fingernail

- A** 5, 2, 4, 1, 3  
**B** 5, 2, 1, 4, 3  
**C** 3, 4, 1, 5, 2  
**D** 2, 5, 1, 4, 3

**Answer: A**

15. Select the option that is related to the third term in the same way as the second term is related to the first term and the sixth term is related to the fifth term.

18 : 123 :: 15 : ? :: 19 : 130

- A** 114  
**B** 112  
**C** 102  
**D** 120

**Answer: C**

16. Which two numbers from amongst the given options should be interchanged to make the given equation correct?

$$(134 - 13) \div 27 \times 3 - 6 = 11$$

- A** 6 and 13  
**B** 3 and 6  
**C** 27 and 11  
**D** 11 and 13

**Answer: C**

## SSC CHSL Free Mock Test

17. In a certain code language, 'MAYOR' is written as 'WSBCN' and 'MARCH' is written as 'MGUCN'. How will 'ISSUE' be written in that language?

- A** JYVVJ  
**B** JYVUJ  
**C** JUVYJ

D JYVJK

Answer: B

18. Which of the following terms will replace the question mark (?) in the given series?  
GATE, JEQI, MINO, ?, SUHA

A EFAY

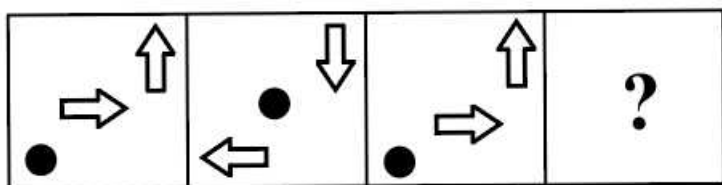
B DAVB

C POKU

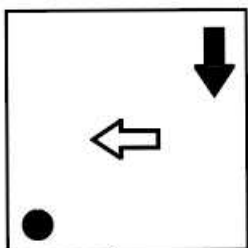
D IRXY

Answer: C

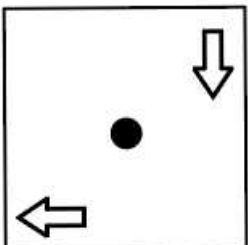
19. Select the figure that will replace the question mark (?) in the following figure series.



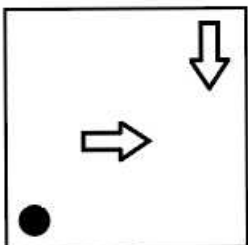
A



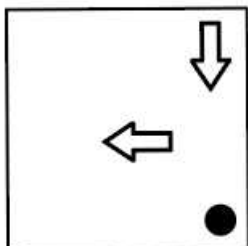
B



C



D



Answer: B

## SSC CPO Free Mock Test

20. Which letter cluster will replace the question mark (?) to complete the given series?  
DJUC, NEGG, ?, HUEO, RPQS

- A KLRX
- B WRGF
- C PGQI
- D XZSK

**Answer: D**

21. Which of the following numbers will replace the question mark (?) in the given series?  
4, 6, 11, 24, 51, 130, ?

- A 298
- B 289
- C 277
- D 241

**Answer: B**

22. Select the option that is related to the third number in the same way as the second number is related to the first number and the sixth number is related to the fifth number.  
16 : 75 :: 12 : ? :: 7 : 30

- A 50
- B 55
- C 60
- D 45

**Answer: B**

## SSC GD Free Mock Test

23. In a certain code language, 'MAGNETIC' is written as 'DJUFOHBN' and 'ELECTRIC' is written as 'DJSUDFMF'. How will 'LOCATION' be written in that language?

- A OPJUBDPM
- B MPDBUJPO
- C OPJUBFQM
- D OPJUBDQM

**Answer: A**

24. Select the correct combination of mathematical signs to replace the \* signs and to balance the given equation.  
 $221 * 17 * 3 * 60 * 7 * 10$



- A**  $\div, -, +, =, \times$
- B**  $+, =, \times, \div, -$
- C**  $\div, \times, +, =, +$
- D**  $+, =, \times, +, \times$

**Answer: A**

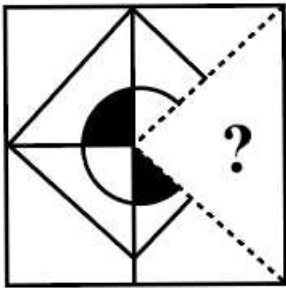
25. What was the day of the week on 17 November 1855?

- A** Tuesday
- B** Sunday
- C** Saturday
- D** Monday

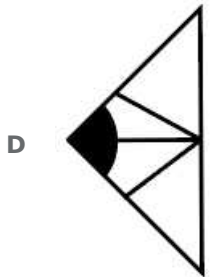
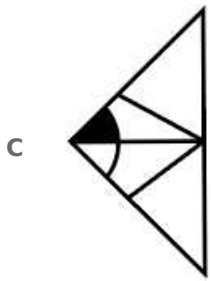
**Answer: C**

## SSC CGL Free Mock Test

26. Select the option that will replace the question mark (?) in the figure given below to complete the pattern.



- A**
- B**



**Answer: B**

27. A, B, C, D, E, F and G are seven friends who scored different marks in the periodic test. C scored less than 2 persons. B scored more than C but less than A. E scored more than F but less than D. F has not scored the least. How many people scored between C and G?

- A 1
- B 0
- C 3
- D 2

**Answer: C**

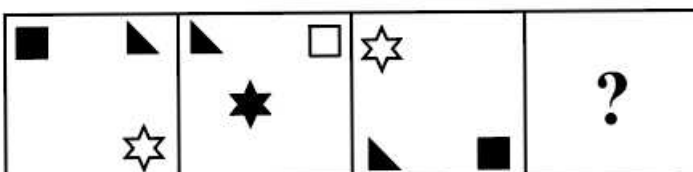
28. Which two numbers from amongst the given options should be interchanged to make the given equation correct?  
 $(42 \div 7) \times 5 = 30 \times 120 \div (10 + 5 \times 2)$

- A 10 and 5
- B 2 and 5
- C 7 and 2
- D 10 and 30


**Answer: D**

## Download SSC General Knowledge PDF

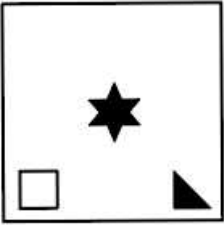
29. Select the figure that will replace the question mark (?) in the following figure series.



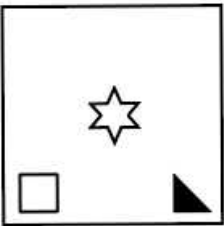
A




B



C

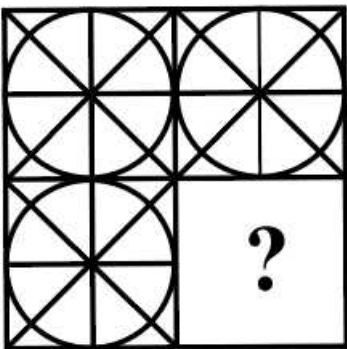


D

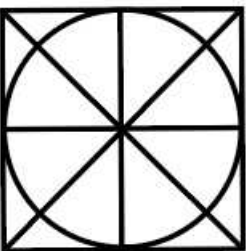


**Answer: B**

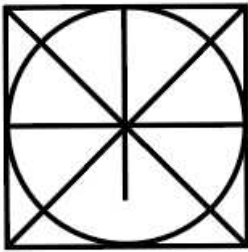
30. Select the figure from the options that can replace the question mark (?) and complete the pattern(rotation is NOT allowed)



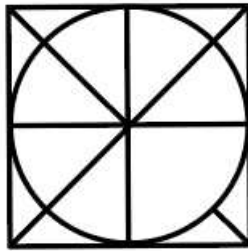
A



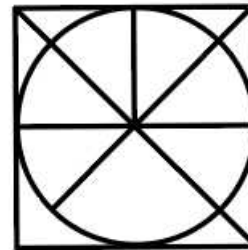
**B**



**C**



**D**



**Answer: A**

31. Select the option that represents the correct order of the given words as they would appear in an English dictionary.

1. Monocrystal
2. Monitoral
3. Monocular
4. Monsieur
5. Monochromist
6. Mongoose

**A** 6, 2, 1, 3, 5, 4

**B** 6, 2, 4, 5, 1, 3

**C** 6, 2, 5, 3, 1, 4

**D** 6, 2, 5, 1, 3, 4

**Answer: D**

## SSC CHSL Prevoius Papers (DOWNLOAD PDF)

32. In a certain code language, 'MONEY' is coded as '72' and 'BILL' is coded as '35'. How will 'TOKEN' be coded in that language?

**A** 60

**B** 70

**C** 75

**D** 65

**Answer: D**

33. Two Statements are given followed by Two conclusions numbered I and II. Assuming the statements to be true, even if they seem to be at variance with commonly known facts, decide which of the conclusions logically follow(s) from the statements.

**Statements:**

All athletes are boxers.

No boxer is a cook.

**Conclusions:**

I. No athlete is a cook.

II. No boxer is an athlete.

- A Only conclusion II follows
- B Neither conclusion I nor II follows.
- C Either conclusion I or II follows.
- D Only conclusion I follows

**Answer: D**

34. Select the option that is related to the third term in the same way as the second term is related to the first term and the sixth term is related to the fifth term.

24 : 32 :: 36 : ? :: 54 : 162

- A 72
- B 80
- C 84
- D 76

**Answer: A**

## SSC GD Constable Previous Papers

35. Three statements are given followed by three conclusions numbered I, II and III.

Assuming the statements to be true, even if they seem to be at variance with commonly known facts, decide which of the conclusions logically follow(s) from the statements.

**Statements:**

Some dates are weeks.

Some weeks are months.

All months are years.

**Conclusions:**

I. No date is a month.

II. All weeks being years is a possibility.

III. All years can never be dates.

- A Only conclusion III follows
- B Only conclusions I and II follow
- C Only conclusion II follows
- D Only conclusions II and III follow

**Answer: C**

36. Select the correct combination of mathematical signs to replace the \* signs and to balance the given equation.  
 $50 * 95 * 19 * 15 * 3 * 1$

A  $=, \div, +, \times, \times$

B  $+, =, \div, +, +$

C  $+, \times, \times, =, \div$

D  $\times, +, =, \div, \times$

**Answer: A**

37. L, M, N, O, P, Q, R and S are sitting around a square table not facing the centre. Some of them are sitting at the corners while some are sitting at the exact centre of the sides. L is sitting to the immediate right of P. O is sitting to the immediate right of L. O is sitting between L and S. S is sitting to the immediate left of R. M is sitting between Q and R. N is sitting to the immediate right of Q and immediate left of P. Who is sitting second left from N?

A M

B O

C P

D S

**Answer: A**

### SSC Stenographer Previous Papers (DOWNLOAD PDF)

38. Which of the following numbers will replace the question mark (?) in the given series?  
8, ?, 20, 32, 48, 68

A 14

B 10

C 12

D 16

**Answer: C**

39. Select the set in which the number are related in the same way as the numbers of the given sets. (NOTE : Operations should be performed on the whole numbers, without breaking down the numbers into its constituent digits. E.g. 13 - Operations on 13 such as adding /subtracting /multiplying etc. to 13 can be performed. Breaking down 13 into 1 and 3 and then performing mathematical operations on 1 and 3 is not allowed.)

(9, 11, 404)

(4, 13, 370)

A (8, 12, 416)

B (7, 11, 380)

C (8, 9, 300)

D (8, 10, 326)

**Answer: A**

40. 'K % L' means 'K is the mother of L'.  
'K @ L' means 'K is the brother of L'.  
'K ^ L' means 'K is the son of L'.  
'K # L' means 'K is the wife of L'.  
If A @ B ^ C # D @ E, how is E related to A?

- A Father's brother
- B Brother
- C Father
- D Mother's brother

**Answer: A**

## SSC CGL Previous Papers (DOWNLOAD PDF)

41. Looking at a family photo, T pointed to M and said, "His mother N's husband O's brother P's mother S is my wife". How is S related to M?

- A Daughter-in-law
- B Paternal grandmother
- C Mother's sister
- D Mother

**Answer: B**

42. In a code language, 'CAMEL' is coded as CEMNG and 'TIGER' is coded as KVG TG. How will 'HORSE' be coded in the same language?

- A QKRHU
- B HQRHV
- C RJS HU
- D QJRGU

**Answer: D**

43. Which letter cluster will replace the question mark (?) to complete the given series?  
AFCH, ?, EJGL, GLIN, INKP

- A CEJH
- B CJEH
- C CHEJ
- D CEHJ

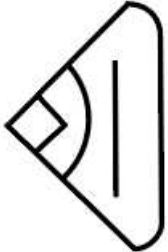
**Answer: C**

## SSC CHSL Free Mock Test (Latest Pattern)

44. Select the figure from the options that can replace the question mark (?) and complete the pattern.



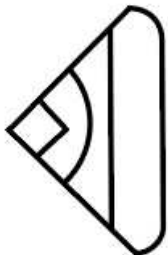
A



B



C



D



**Answer: B**

45. Three of the following four letter-clusters are alike in a certain way and one is different.  
Pick the odd one out.

A MONP

B JLKM

C FHGI

D PSQR

**Answer: D**



46. Which of the following numbers will replace the question mark (?) in the given series?  
109, 113, 122, 147, ?

- A 196
- B 148
- C 154
- D 166

**Answer:** A

### SSC Stenographer Previous Papers (Latest Pattern)

47. A person starts from point X and moves 7 km towards the south. He then turns left and moves 5 km. He then takes a right turn and moves 5 km. He then turns right and moves 5 km to reach point Y. How much and in which direction does he need to move now to reach point X?

- A 12 km, North
- B 5 km, West
- C 5 km, North
- D 7 km, West

**Answer:** A

48. Select the option that is related to the fifth letter-cluster in the same way as the second letter-cluster is related to the first letter-cluster and the fourth letter-cluster is related to the third letter-cluster.  
BRIGHT : RBTHGI :: SLAVES : LSSEVA :: REIGNS : ?

- A RESIGN
- B ERSIGN
- C ERISGN
- D ERSNGI

**Answer:** D

49. Which of the following interchange of signs would make the given equation correct?  
 $87 - 3 + 39 \div 67 \times 3 = -133$

- A  $\div$  and  $-$
- B  $\times$  and  $+$
- C  $\times$  and  $-$
- D  $-$  and  $+$

**Answer:** A

### SSC GD Constable Free Mock Test (Latest Pattern)

50. Select the set in which the numbers are related in the same way as are the numbers of the following sets.  
(NOTE : Operations should be performed on the whole numbers, without breaking down the numbers into its constituent digits. E.g. 13- Operations on 13 such as adding/subtracting/multiplying etc. to 13 can be performed. Breaking down 13 into 1 and 3 and then performing mathematical operations on 1 and 3 is not allowed.)  
(166, 13, 4)  
(2113, 46, 7)

- A (97, 33, 11)  
B (481, 22, 5)  
C (131, 11, 3)  
D (236, 36, 6)

**Answer: B**

## SSC MTS Free Mock Test (Latest Pattern)

### General Awareness

51. Which of the following was the capital of Vajji gana during Mahajanapadas period?

- A Vaishali  
B Sothivati  
C Viratanagara  
D Kashi

**Answer: A**

## Current Affairs Questions & Answers (Download pdf)

52. Which British archaeologist recognised in the 1940s that it was necessary to follow the stratigraphy of the mound rather than mechanically excavate it along a uniform horizontal line?

- A REM Wheeler  
B Alexander Cunningham  
C John Marshall  
D E Hultzsch

**Answer: A**

53. As per the census of 2011, the most populous state of India was:

- A Uttar Pradesh  
B Bihar  
C Madhya Pradesh  
D Uttarakhand

**Answer: A**

54. Which state among the following launched the Aama Yojana in the year 2022, to give ₹20,000 each to non-working mothers?

- A Sikkim
- B Tripura
- C Mizoram
- D Nagaland

**Answer: A**

### Daily & Monthly Current Affairs (Download pdf)

55. The first edition of the Uber Cup, an international women's team championship in badminton, was organised in:

- A 1966-1967
- B 1960-1961
- C 1963-1964
- D 1956-1957

**Answer: D**

56. Bilateral symmetry, segmentation, coelom and open circulatory system are the characteristics of \_\_\_\_\_.

- A Chordata
- B Arthropoda
- C Protozoa
- D Porifera

**Answer: B**

57. MRTP Act was enacted in 1969 to ensure that the operation of the economic system does not result in the concentration of economic power in hands of few. The full form of MRTP is \_\_\_\_\_.

- A Monopoly and Regulatory Trade Practice
- B Monopolies and Restrictive Trade Practice
- C Monopolistic and Rising Trade Policy
- D Market and Reserve Trade Policy

**Answer: B**

### SSC Stenographer Important Questions (Download PDF)

58. Who among the following was awarded the Dhyani Chand Award for Lifetime achievement in Sports and Games 2021 in chess?

- A Vidit Gujrathi

- B** Viswanathan Anand
- C** Abhijeet Kunte
- D** Adhiban Baskaran

**Answer: C**

59. Identify the wrong pair of port and its state from the following?

- A** Tuticorin-Tamil Nadu
- B** Kandla-Gujarat
- C** Mormugao Port- Goa
- D** New Mangalore-Andhra Pradesh

**Answer: D**

60. What is an Azolla?

- A** Fern
- B** Algae
- C** Fungi
- D** Bryophytes

**Answer: A**

### SSC Stenographer Mocks For Just RS. 117

61. For which famous English novel did Sunetra Gupta receive the Sahitya Akademi Award in 1996?

- A** Cuckold
- B** Memories of Rain
- C** A New World
- D** Disorderly Women

**Answer: B**

62. Which of the following regions related to iron-ore minerals is located in the state of Odisha?

- A** Burdwan
- B** Naomandi
- C** Mayurbhanj
- D** Kemmangundi

**Answer: C**

63. Which of the following is NOT an important feature of the Industrial Policy of 1991?

- A** Foreign Technology Agreements
- B** Industrial Licensing Policy
- C** No foreign trade policy
- D** Public Sector Policy

**Answer: C**

## SSC Stenographer Free Videos (Youtube)

64. Nishagandhi Award is related to which state government?

- A** Tamil Nadu
- B** Karnataka
- C** Maharashtra
- D** Kerala

**Answer: D**

65. When was the first 'International Day of Yoga' celebrated in India?

- A** 21 June 2016
- B** 21 June 2014
- C** 21 June 2013
- D** 21 June 2015

**Answer: D**

66. Which of the following dynasties was ruling Magadha just before the establishment of the Mauryan empire?

- A** Haryanka
- B** Shunga
- C** Kanva
- D** Nanda

**Answer: D**

## SSC Stenographer Expected Cutoff

67. With reference to the Major Port Authorities Bill passed in 2021, what is the TAMP?

- A** Tariff Authority for Minor Ports
- B** Trip Agency for Minor Ports
- C** Trip Agency for Major Ports

**D** Tariff Authority for Major Ports

**Answer: D**

68. Which of the following religious communities in India primarily celebrates the festival of Khordad Sal?

**A** Christian

**B** Parsi

**C** Muslim

**D** Sikh

**Answer: B**

69. Which of the following folds are extreme types of overturned folds in which the axial plane acquires an almost horizontal attitude?

**A** Normal folds

**B** Asymmetrical folds

**C** Recumbent folds

**D** Square folds

**Answer: C**

## SSC Stenographer Syllabus PDF

70. Which of the following statements is NOT correct about Gupta emperor, Samudragupta?

a) He was the successor of Chandragupta I.

b) His court poet Bhimsena composed a prashasti of praise for him which was known as Gwalior Prashasti.

c) On his gold coins he was depicted playing the harp which shows his passion for music.

d) He held the title of Maharajadhiraj

**A** Statement b only

**B** Statement c only

**C** Statement a only

**D** Statement d only

**Answer: A**

71. Which chemical element from group 18 of the modern periodic table, whose atomic number is 10, contains a mixture of three stable isotopes commonly used to make signal and gas lasers and as a refrigerant?

**A** Neon

**B** Oganesson

**C** Helium

**D** Radon

**Answer: A**

72. Identify a hydrocarbon pair that is NOT the part of the homologous series.

- A  $CH_4$  and  $C_2H_6$
- B  $C_2H_6$  and  $C_3H_9$
- C  $C_2H_6$  and  $C_3H_8$
- D  $C_4H_4$  and  $C_5H_{10}$

**Answer:** B

### Daily Free Online GK tests

73. Identify the woman social reformer who argued that religious leaders of every faith accorded an inferior place to women.

- A Savitribai Phule
- B Fatima Sheikh
- C Begum Rokeya Sakhawat Hossain
- D Rashsundari Debi

**Answer:** C

74. Which of the following has the maximum Vitamin D content?

- A Fish liver oil
- B Cow's milk
- C Wheat
- D Groundnut

**Answer:** A

75. Who among the following was elected as the first-ever President of Barbados to replace Britain's Queen Elizabeth in October 2021, with a two-thirds vote during a joint session of the country's House of Assembly and Senate?

- A Jacinda Ardern
- B Sandra Mason
- C Angela Merkel
- D Najla Bouden

**Answer:** B

### SSC CHSL Previous Question papers (download pdf)

76. Chikmagalur in Karnataka is famous for the cultivation of \_\_\_\_\_.

- A litchi
- B coffee

**C** saffron

**D** jute

**Answer: B**

77. As of 10 April 2022, identify the state that has a bicameral legislature.

**A** Uttar Pradesh

**B** Madhya Pradesh

**C** Rajasthan

**D** Kerala

**Answer: A**

78. In 1942, who presented the 'trophic-dynamic aspect of ecology' which is the basic process of transfer of energy from one trophic level to another in an ecosystem?

**A** Arthur Tansley

**B** Ernst Haeckel

**C** Charles Elton

**D** Raymond L Lindeman

**Answer: D**

### SSC CPO Previous Question papers (download pdf)

79. Eid-ul-Fitr is celebrated on the first day of which of the following Islamic months?

**A** Muharram

**B** Safar

**C** Rabi-al-Awwal

**D** Shawwal

**Answer: D**

80. Which temple is the epicentre for the Rath Yatra in Odisha?

**A** Lingaraja Temple

**B** Konark Temple

**C** Mukteshwar Temple

**D** Jagannath Puri Temple

**Answer: D**

81. What is the objective of the Deen Dayal Antyodaya Yojana?



- A** Helping the poor by providing free food grains.
- B** Helping the poor by providing free house.
- C** Helping the poor by providing skill training.
- D** Helping the poor by providing free food.

**Answer: C**

## SSC GD Previous Question papers (download pdf)

82. 'Muntakhab-ut-Tawarikh' was written by:

- A** Akbar
- B** Jahanara Begum
- C** Dara Shikoh
- D** Abdul Qadir Badauni

**Answer: D**

83. Kolar fields were famous for which of the following minerals?

- A** Diamond mining
- B** Copper mining
- C** Gold mining
- D** Coal mining

**Answer: C**

84. Sankirtana is a style of \_\_\_\_\_, one of the classical dances of India.

- A** Manipuri
- B** Kathak
- C** Kathakali
- D** Odissi

**Answer: A**

## SSC MTS Previous Question papers (download pdf)

85. Who among the following is a renowned Tabla player carrying on the legacy of his father?

- A** Vishwa Mohan Bhatt
- B** Hari Prasad Chaurasia
- C** Ali Akbar Khan

**D** Zakir Hussain

**Answer:** D

86. Where is Hoshang Shah's tomb, the first to be completely built of marble, located in India?

**A** Delhi

**B** Burhanpur

**C** Mandu

**D** Agra

**Answer:** C

87. Who wrote 'Natya Shashtra' referring to Indian music?

**A** Shudrak

**B** Bharata

**C** Vatsyayana

**D** Bhasa

**Answer:** B

### SSC CHSL Free Mock Test

88. Who among the following was deported for subversion in 1907, without trial, to Mandalay in Burma?

**A** Lala Lajpat Rai

**B** Bal Gangadhar Tilak

**C** Mahadev Govind Ranade

**D** Bipin Pal

**Answer:** A

89. The term '\_\_\_\_\_ ' is an aerial pass on the dribble from the left side of the field in the field hockey.

**A** penalty corner

**B** halfback

**C** bully

**D** scoop

**Answer:** D

90. Which of the following animal statues is depicted at the top of the Ashoka pillar of Rampurva?

**A** Horse

**B** Bull

- C Lion
- D Elephant

**Answer: B**

## SSC CPO Free Mock Test

91. Which of the following layers of the atmosphere is most liable for the greenhouse effect?

- A Troposphere
- B Ionosphere
- C Mesosphere
- D Stratosphere

**Answer: A**

92. What is the chemical name of table salt?

- A Potassium bromide
- B Potassium chloride
- C Sodium chloride
- D Sodium bromide

**Answer: C**

93. In which year did Georg Simon Ohm formulate the equation  $I=V/R$  which shows the relationship between voltage, current and resistance?

- A 1822
- B 1830
- C 1835
- D 1827

**Answer: D**

## SSC GD Free Mock Test

94. Which musical instrument is played by Pandit Shiv Kumar Sharma?

- A Santoor
- B Sarod
- C Violin
- D Sarangi

**Answer: A**

95. Thrissur Pooram festival is held annually in Kerala at which famous temple?

- A Sivagiri temple
- B Tali temple
- C Thiruvalla temple
- D Vadakkunnathan temple

**Answer: D**

96. Which of the following is another term for the average income of a country?

- A Inflation rate
- B Per capita expenditure
- C Disposable income
- D Per capita income

**Answer: D**

## SSC CGL Free Mock Test

97. Which committee demanded the "Bill of Rights" in 1928?

- A Motilal Nehru committee
- B Rajiv Gandhi committee
- C Jawaharlal Nehru committee
- D Indira Gandhi committee

**Answer: A**

98. Which of the following is an autobiography of the 14th Dalai Lama?

- A Dreams from My Father
- B The Words
- C The Test of My Life
- D Freedom in Exile

**Answer: D**

99. In which of the following states was the Antyodaya Anna Yojana launched first?

- A Madhya Pradesh
- B Bihar
- C Jharkhand
- D Rajasthan

**Answer: D**

## Download SSC General Knowledge PDF

100. In which algae are gametes flagellated and similar in size?

- A** Volvox
- B** Ulothrix
- C** Spirogyra
- D** Eudorina

**Answer: B**

## SSC CHSL Previous Papers (DOWNLOAD PDF)

### English Language and Comprehension

101. Select the most appropriate option to substitute the blank in the given sentence. If there is no need to substitute it, select 'No substitution required'.

He peeled \_\_\_\_\_ apple and cut it into slices.

- A** No substitution required
- B** Both a and an
- C** an
- D** a

**Answer: C**

## SSC GD Constable Previous Papers

102. Select the most appropriate meaning of the underlined idiom in the given sentence.

You need to be aware of argus-eyed people in the organisation.

- A** Angry
- B** Content
- C** Vigilant
- D** Kind

**Answer: C**

103. Select the option that expresses the given sentence in passive voice.

Rick was completing graduation last year.

- A** Graduation is being completed by Rick last year.
- B** Graduation was being completed by Rick last year.

**C** Graduation were completed by Rick last year.

**D** Graduation was completed by Rick last year.

**Answer: B**

104. Sentences of a paragraph are given below. While the first and the last sentences (S1 and S6) are in the correct order, the sentences in between are jumbled up. Arrange the sentences in the correct order to form a meaningful and coherent paragraph.

S1. Great people can direct the masses with their strong determination and will.

A. Gandhiji introduced the very powerful concept of 'Satyagraha' which was not a new one to India.

B. He himself took up the responsibility of breaking the shackles of India.

C. The ways and method he chose for that was not violence and harshness.

D. Mahatma Gandhi is a perfect example of this.

S6. With this, in the days where no media channels and no social media existed, he could pull millions towards a mighty goal.

**A** ACDB

**B** DBCA

**C** ABCD

**D** CDAB

**Answer: B**

### SSC Stenographer Previous Papers (DOWNLOAD PDF)

105. The following sentence has been split into four segments. Identify the segment that contains a grammatical error.  
The mother as well as the sons / were asked to appear / before the magistrate / for interrogation.

**A** were asked to appear

**B** for interrogation

**C** before the magistrate

**D** The mother as well as the sons

**Answer: A**

106. Select the option that expresses the given sentence in passive voice.

People consider that Radha is creative in her work.

**A** Radha's creativity in her work is considered by others.

**B** It is considered that Radha is creative in her work.

**C** Creativity in work by Radha is considered by people.

**D** People have considered Radha's creativity in her work.

**Answer: B**

107. The given sentence is divided into three segments. Select the option that has the segment with a grammatical error. If there is no error, select 'no error' as your answer.

The players / will leaving / the stadium in no time.

**A** The players

- B** No error
- C** will leaving
- D** the stadium in no time

**Answer: C**

## SSC CGL Previous Papers (DOWNLOAD PDF)

108. Select the option that expresses the given sentence in indirect speech.  
My friend Ganesh said, "I could solve the biggest problem very easily."

- A** My friend Ganesh said that he could solved the biggest problem very easily.
- B** My friend Ganesh said that he can solve the biggest problem very easily.
- C** My friend Ganesh said that he would solve the biggest problem very easily.
- D** My friend Ganesh said that he could solve the biggest problem very easily.

**Answer: D**

109. Select the option that expresses the given sentence in reported speech.  
She said, "I called yesterday, but there was no response".

- A** She said that she had called the day before, but there was no response.
- B** She said that I called day before, but there was no response.
- C** She said I called yesterday, but there was no response.
- D** She said she called yesterday, but there was no response.

**Answer: A**

110. Select the most appropriate option that can substitute the underlined segment in the given sentence.  
Ripan's nature and his strange habits can often unintentionally hurt others.

- A** Eccentricity
- B** Anomaly
- C** Abnormality
- D** Beatnik

**Answer: A**

## SSC CHSL Free Mock Test (Latest Pattern)

111. Select the most appropriate synonym of the given word.  
Erudite

- A** Scholarly
- B** Effervescent

**C** Energetic

**D** Serene

**Answer: A**

112. Select the most appropriate **ANTONYM** of the given word.

**Vain**

**A** Extrovert

**B** Selfish

**C** Stubborn

**D** Modest

**Answer: D**

113. Select the most appropriate option that can substitute the underlined segment in the given sentence. If there is no need to substitute it, select 'No substitution required'.

I go to his house personally so that I could persuade him to continue his studies.

**A** gone to his house

**B** will go to his house

**C** went to his house

**D** No substitution required

**Answer: C**

### SSC Stenographer Previous Papers (Latest Pattern)

114. The given sentence is divided into three segments. Select the option that has the segment with a grammatical error. If there is no error, select 'no error' as your answer.

Soumya will be speak / on 'Stress management' in / London the next week.

**A** on 'Stress Management' in

**B** London the next week

**C** No error

**D** Soumya will be speak

**Answer: D**

115. Select the most appropriate option to substitute the underlined segment in the given sentence.

None of them are here at this moment

**A** had here

**B** were here

**C** is here



D have here

**Answer: C**

116. Select the most appropriate synonym of the given word.

**Audacious**

A Brave

B Stifling

C Lively

D Horrendous

**Answer: A**

### SSC GD Constable Free Mock Test (Latest Pattern)

117. The following sentence has been divided into parts. One of them may contain an error.

Select the part that contains the error from the given options. If you don't find any error, mark 'No error' as your answer.

The team worked / very hard / on the project.

A very hard

B No error

C The team worked

D on the project

**Answer: B**

118. Select the most appropriate option that can substitute the underlined segment in the given sentence.

The train will arrive with five minutes.

A on five minutes

B at five minutes

C by five minutes

D in five minutes

**Answer: D**

119. Select the option that expresses the given sentence in direct speech.

He said he was going for shopping and asked if he might get me anything.

A He said, "I'm going for shopping. Can I get you anything?"

B He said, "I'm going for shopping. May I get you anything?"

C He said, "I will go for shopping. Do you want anything?"

D He said, "I will be going for shopping. May I get you anything?"

**Answer: B**

## SSC MTS Free Mock Test (Latest Pattern)

120. The following sentence has been divided into parts. One of them may contain an error.

Select the part that contains the error from the given options. If you don't find any error, mark 'No error' as your answer.

Pompeii was a tragedy / that cost the lives / of millions of people.

- A Pompeii was a tragedy
- B that cost the lives
- C of millions of people
- D No error

**Answer: B**

121. Sentences of a paragraph are given below. While the first and the last sentences (1 and 6) are in the correct order, the sentences in between are jumbled up (A to D).

Arrange the sentences in the correct order to form a meaningful and coherent paragraph.

1. Biogas is a mixture of methane, carbon dioxide and hydrogen with others.

A. Biogas is produced by anaerobic degradation of animal wastes (some plant wastes) in presence of water.

B. Thus, biogas is a non-polluting, cleaned and low cost fuel.

C. Anaerobic degradation means breakdown of organic matter which is done in the absence of oxygen.

D. It is mostly used in rural areas where ample animal and agricultural waste is available.

6. Biogas eliminates the risk of health hazards offered by other fuels.

- A DABC
- B CBDA
- C ACBD
- D BDAC

**Answer: C**

122. Select the option that expresses the given sentence in passive voice.

The police had caught the thief on the day before yesterday.

- A The thief has been caught by the police on the day before yesterday.
- B The thief had been caught by the police on the day before yesterday.
- C The thief was being caught by the police on the day before yesterday.
- D The thief had caught by the police on the day before yesterday.

**Answer: B**

## Current Affairs Questions & Answers (Download pdf)

123. Select the option that expresses the given sentence in indirect speech.

Pawan said, "I am preparing hot coffee for you."

- A Pawan said that he was preparing hot coffee for me.
- B Pawan had said that he was preparing hot coffee for me.

**C** Pawan has said that he was preparing hot coffee for me.

**D** Pawan says that he was preparing hot coffee for me.

**Answer: A**

124. Select the most appropriate option that can substitute the underlined segment in the given sentence. If there is no need to substitute it, select 'No substitution required'.

Although she was tired but she went to work.

**A** She was although tired,

**B** She was tired,

**C** Although she was tired,

**D** No substitution required

**Answer: C**

125. Select the most appropriate ANTONYM to replace the italicised word.

His *extravagant pretensions* only served to excite ridicule.

**A** lavish

**B** costly

**C** fanciful

**D** economical

**Answer: D**

## Daily & Monthly Current Affairs (Download pdf)

126. The following sentence has been split into four segments. Identify the segment that contains a grammatical error.

He told his friends / that he is gone/ to visit his parents / in the evening.

**A** in the evening

**B** that he is gone

**C** to visit his parents

**D** He told his friends

**Answer: B**

127. Select the option that expresses the given sentence in indirect speech.

The librarian said to her, "Can you return the books?"

**A** The librarian asked her if she could return the books.

**B** The librarian greeted her if she could return the books.

**C** The librarian asked her that if she could return the books.

**D** The librarian asked her that could she return her books.

**Answer: A**

128. The following sentence has been divided into parts. One of them may contain an error.

Select the part that contains the error from the given options. If you don't find any error, mark 'No error' as your answer.

A child learnt the basics of / his mother tongue mainly from / his interactions with the mother.

- A his mother tongue mainly from
- B No error
- C A child learnt the basics of
- D his interactions with the mother

**Answer: C**

## SSC Stenographer Important Questions (Download PDF)

129. Select the option that expresses the given sentence in indirect speech.

The passenger says to the railway clerk, "Is the train late?"

- A The passenger has asked the railway clerk whether the train is late.
- B The passenger asked the railway clerk was the train late.
- C The passenger asks the railway clerk was the train late.
- D The passenger asks the railway clerk if the train is late.

**Answer: D**

130. Select the option that expresses the given sentence in indirect speech.

"Why have you come so early today?" The coach asked the athlete.

- A The coach asked the athlete why he came so early that day.
- B The coach asked the athlete why he had come so early that day.
- C The coach asked the athlete why had he come so early that day.
- D The coach asked the athlete why did he come so early today.

**Answer: B**

131. The given sentence is divided into three segments. Select the option that has the segment with a grammatical error. If there is no error, select 'no error' as your answer.

I miss you / when you move / to another building.

- A to another building
- B when you move
- C I miss you
- D No error

**Answer: C**

## SSC Stenographer Mocks For Just RS. 117

132. Select the most appropriate meaning of the given idiom.

To win laurels

- A To achieve honours and glory
- B To be fooled by others
- C To win an easy battle
- D To secure a well-paying job

**Answer: A**

133. Select the most appropriate ANTONYM of the given word.

Acumen

- A Good decision
- B Happiness
- C Stupidity
- D Anger

**Answer: C**

134. Select the most appropriate meaning of the given idiom.

Break a leg

- A Good luck
- B Sudden attack
- C Accident
- D Bravery

**Answer: A**

## SSC Stenographer Free Videos (Youtube)

135. Select the option that expresses the given sentence in direct speech.

Arjun asked whether I wanted to join the job.

- A Arjun said if I was ready to join the job
- B Arjun said, "Do you wish to join the job?"
- C Arjun said, "Do you want to join the job?"
- D Arjun replied, "Do you want to join the job?"

**Answer: C**

136. Select the option that expresses the given sentence in passive voice.

I will finish this book in a month.

- A This book would be finished by me in a month.
- B This book will be finished by me in a month.
- C Will be book finish by me in a month.
- D Will this book be finished by me in a month?

**Answer:** B

137. The following sentence has been divided into parts. One of them may contain an error.

Select the part that contains the error from the given options. If you don't find any error, mark 'No error' as your answer.

It were the farmers / who wanted the government / to increase the Minimum Selling Price

- A to increase the Minimum Selling Price
- B It were the farmers
- C who wanted the government
- D No error

**Answer:** B

### SSC Stenographer Expected Cutoff

138. Select the most appropriate ANTONYM of the given word.

Prudent

- A Caution
- B Unprudent
- C Imprudent
- D Intuition

**Answer:** C

139. Select the option that will improve the underlined part of the given sentence.

Mr. Ahirwar disowned his son as he was found to be indulged in burglary.

- A involved in stealing
- B involved in rustling
- C involved in smuggling
- D involved in sneaking

**Answer:** A

140. The following sentence has been split into four segments. Identify the segment that contains a grammatical error.

Every word and every line / in the works of John Keats / express his appreciation / of nature's beauty.

- A** express his appreciation
- B** in the works of John Keats
- C** Every word and every line
- D** of nature's beauty

**Answer:** A

## SSC Stenographer Syllabus PDF

141. Select the most appropriate option to fill in the blank.

One string was handed \_\_\_\_\_ by the musician to the shopkeeper for repair.

- A** over
- B** down
- C** about
- D** before

**Answer:** A

142. Select the option that expresses the given sentence in active voice.

The poor fellow was laughed at by the crowd.

- A** The crowd was laughed at the poor fellow.
- B** The crowd had laughed at the poor fellow.
- C** The crowd is laughed at the poor fellow.
- D** The crowd laughed at the poor fellow.

**Answer:** D

143. Select the most appropriate option to fill in the blank.

Someone has \_\_\_\_\_ my pocket in the bus, and I have no money now.

- A** picked
- B** broke
- C** looked
- D** tore

**Answer:** A

## Daily Free Online GK tests

144. Select the most appropriate option to fill in the blank.

In India, as perhaps in many other countries of the world, trees have been held in veneration since \_\_\_\_\_ times.

- A vintage
- B ancient
- C antique
- D retro

**Answer: B**

145. Select the option that expresses the given sentence in passive voice.

Priya washes her clothes in the evening.

- A The clothes was washed by Priya in the evening.
- B The clothes are washed by Priya in the evening.
- C The clothes is washed by Priya in the evening.
- D The clothes were washed by Priya in the evening.

**Answer: B**

146. Select the most appropriate meaning of the idiom used in the given sentence.

The new production targets have stirred up a hornet's nest.

- A To confess without reserve
- B To preserve one's energy
- C To gain prominence
- D To raise controversy

**Answer: D**

### SSC CHSL Previous Question papers (download pdf)

147. Select the option that gives the most appropriate meaning of the following word.

Colossal

- A Irrelevant
- B Authentic
- C Mighty
- D Appropriate

**Answer: C**

148. The following sentence has been divided into parts. One of them may contain an error.

Select the part that contains the error from the given options. If you don't find any error, mark 'No error' as your answer.

The newly admitted students could not / access the library because they had / not yet been given their ID cards.

- A not yet been given their ID cards



- B** The newly admitted students could not
- C** No error
- D** access the library because they had

**Answer: D**

149. Select the most appropriate synonym of the underlined word.

The interviewee tackled the questions of the interviewer with substantial aplomb.

- A** Camaraderie
- B** Self-assurance
- C** Hostility
- D** Sanctity

**Answer: B**

### SSC CPO Previous Question papers (download pdf)

150. Select the most appropriate **ANTONYM** of the given word.

**Wisdom**

- A** Competency
- B** Imbecility
- C** Cogency
- D** Dexterity

**Answer: B**

151. Select the option that expresses the given sentence in passive voice.

The mother loves the baby.

- A** The baby was loved by the mother.
- B** The baby will be loved by the mother.
- C** The baby has been loved by the mother.
- D** The baby is loved by the mother.

**Answer: D**

152. Select the option that expresses the given sentence in indirect speech.

The Priest said, "God loves all his creations."

- A** The Priest said that God is about to love all his creations.
- B** The Priest said that God will love all his creations.
- C** The Priest said that God loves all his creations.
- D** The Priest said that God loved all his creations.

**Answer: C**

## SSC GD Previous Question papers (download pdf)

153. Select the most appropriate ANTONYM of the given word.

**Confused**

- A** Lucid
- B** Developed
- C** Stupid
- D** Tangled

**Answer: A**

154. Select the most appropriate option to fill in the blank.

In Egypt, the sun is warm on the green palm-trees, and the crocodiles lie in the mud and look lazily about them. My companions are building a nest in the Temple of Baalbec, and the pink and white doves are watching them, and cooing to each other. Dear Prince, I must leave you, but I will never forget you, and next spring I will bring you back two beautiful jewels in place of those you have given away. The ruby shall be redder than a red rose, and the sapphire shall be \_\_\_\_\_ the great sea

- A** as deep as
- B** as beautiful as
- C** as blue as
- D** as sweet as

**Answer: C**

155. Select the option that expresses the given sentence in active voice.

**You will be given a ticket by the manager**

- A** A ticket will be given to you by the manager.
- B** The manager will give you a ticket.
- C** The ticket was given to you by the manager.
- D** The manager should give you a ticket.

**Answer: B**

## SSC MTS Previous Question papers (download pdf)

156. Select the option that expresses the given sentence in passive voice.

**People say Shyam is wise and honest.**

- A** It is said that Shyam is wise and honest.
- B** Let's say that Shyam is wise and honest.
- C** Shyam is wise and honest is said by people.

- D** It is believed that Shyam is wise and honest

**Answer: A**

157. The following sentence has been split into four segments. Identify the segment that contains a grammatical error.

The ship sink / in the sea / and had / no survivors.

- A** in the sea
- B** and had
- C** The ship sink
- D** no survivors

**Answer: C**

158. Select the option that expresses the given sentence in passive voice.

I will help you in submitting the assignment.

- A** You will help by me in submitting the assignment.
- B** In submitting the assignment, I will be helped by you.
- C** In submitting the assignment, you would be helped by me.
- D** You will be helped by me in submitting the assignment

**Answer: D**

## SSC CHSL Free Mock Test

159. Select the option that expresses the given sentence in indirect speech.

My little sister said, "What a beautiful sight!"

- A** My little sister exclaimed that it was a beautiful sight.
- B** My little sister said that it is a beautiful sight.
- C** My little sister said that it had been a beautiful sight.
- D** My little sister said that it would be a beautiful sight.

**Answer: A**

160. Select the grammatically correct sentence.

- A.** Debraj had a heart attack. His ancestral property helped him lot to bear expenses during this crisis.
- B.** Debraj had heart attack. His ancestral property helped him lot to bear expenses during this crisis.
- C.** Debraj had a heart attack. His ancestral property helped him a lot to bear expenses during this crisis.
- D.** Debraj had heart attack. His ancestral property helped him a lot to bear expenses during this crisis.

- A** B
- B** A
- C** C
- D** D

**Answer: C**

161. Select the most appropriate **ANTONYM** of the given word.  
**Propitious**

- A** Auspicious
- B** Inauspicious
- C** Benign
- D** Benignant

**Answer: B**

### SSC CPO Free Mock Test

162. Select the option that expresses the given sentence in passive voice.  
**The mechanic will repair the bicycle on Sunday.**

- A** The bicycle will repaired by the mechanic on Sunday.
- B** The bicycle will be repaired by the mechanic on Sunday.
- C** The bicycle will be repairing by the mechanic on Sunday.
- D** The bicycle would be repaired by the mechanic on Sunday.

**Answer: B**

163. Select the most appropriate synonym of the given word.  
**Bewilderment**

- A** Confusion
- B** Agreement
- C** Arrangement
- D** Settlement

**Answer: A**

164. Select the most appropriate option that can substitute the underlined segment in the given sentence. If there is no need to substitute it, select 'No substitution required'.

Sera and Rimi has enrolled for the same program.

- A** is
- B** No substitution required
- C** has been
- D** have

**Answer: D**

## SSC GD Free Mock Test

165. Select the most appropriate ANTONYM of the given word.

Enigmatic

- A Comprehensible
- B Cryptic
- C Tangible
- D Ambiguous

**Answer: A**

166. Select the option that expresses the given sentence in indirect speech.

My daughter said, "Ayush has got a packet of toffee for his friends."

- A My daughter said that Ayush has had got a packet of toffee for his friends.
- B My daughter said that Ayush has got a packet of toffee for his friends.
- C My daughter said that Ayush had got a packet of toffee for his friends.
- D My daughter said that Ayush has been got a packet of toffee for his friends

**Answer: C**

167. Select the most appropriate meaning of the underlined idiom that can be substituted in the following sentence.

He burnt his fingers interfering in others' problems.

- A caught his fingers in fire
- B got in good relations with
- C was happy
- D got into trouble

**Answer: D**

## SSC CGL Free Mock Test

168. Select the most appropriate option that can substitute the underlined segment in the given sentence. If there is no need to substitute it, select 'No substitution required'.

I had only my class notes for which I had to prepare for my examination.

- A from whom I had to
- B No substitution required
- C with which I had to
- D in which I have to

**Answer: C**

169. Select the option that expresses the given sentence in passive voice.

An unexpected call disturbed Maria terribly which compelled her to stop the performance.

- A Maria was disturbed terribly by an unexpected call which compelled her to stop the performance.
- B Maria could be disturbed terribly by an unexpected call which compelled her to stop the performance.
- C Maria disturbed terribly by an unexpected call which compelled her to stop the performance
- D Maria had been disturbed terribly by an unexpected call which compelled her to stop the performance.

**Answer: A**

170. Select the most appropriate synonym of the given word.

Courage

- A Timidity
- B Valour
- C Cowardice
- D Ingenuity

**Answer: B**

**Download SSC General Knowledge PDF**

**Instructions [171 - 175]**

Read the following passage and answer the question.

The narrator of this story is a 12-year-old girl who has gone to London with her mother to visit the dentist. The girl has a tooth filled, and then she and her mother go to a café afterwards. When it's time to go home, they discover that it's pouring rain and they have no umbrella. They decide to get a taxi. While they're watching for a cab, an old gentleman sheltering under an umbrella approaches them. He asks for a favor. The girl's mother is very distrustful of strange men. The old man explains that he has forgotten his wallet and would like to sell them his umbrella in return for taxi fare back to his home. He explains that it's a very nice silk umbrella worth twenty pounds, but his legs are weak and he simply must take a taxi home. The mother likes the sound of the deal, but the little girl worries that they're taking advantage of the old man. The mother offers to simply give him the cab fare, but he insists that they take the umbrella. The transaction is made and everyone is happy. As the mother is proudly explaining the importance of correctly judging people, the daughter notices that the old man has quickly crossed the street and is hurrying away. "He doesn't look very tired to me," she said. The mother is displeased. "He's up to something." They decide to follow him and find out. They quickly follow him as he rushes through the rainy streets. Eventually they find themselves at a pub called "The Red Lion" and watch through the window as the old man enters and uses the pound note to pay for a triple whiskey.

171. Where has the narrator of story gone visit a dentist?

- A London
- B York
- C Liverpool
- D Bristol

**Answer: A**

172. What is the name of the pub where the old man went after taking money from the mother and daughter?

- A The Lion's Share

- B** Club Lion
- C** The White Tiger
- D** The Red Lion

**Answer: D**

173. Which of the following can be suitable title for the passage?

- A** A visit to dentist
- B** The curious old man
- C** A rainy day
- D** Pubs of London

**Answer: B**

### SSC CHSL Previous Papers (DOWNLOAD PDF)

174. According to the passage, which of the following statement is correct?

- A** Mother gave only the cab fare and did not took the umbrella in return.
- B** Old man was selling them a silk umberlla worth one pounds.
- C** When mother and girl decided to go home they had no umbrella.
- D** The old man used the pound note give by the girls mother to take the taxi home.

**Answer: C**

175. Which of the following word is the ANTONYM of the word 'distrustful' used in the passage?

- A** Cynical
- B** Leery
- C** Cautious
- D** Ingenuous

**Answer: D**

#### Instructions [176 - 180 ]

An earthquake is what happens when two blocks of the earth suddenly slip past one another. The surface where they slip is called the fault or fault plane. The location below the earth's surface where the earthquake starts is called the hypocenter, and the location directly above it on the surface of the earth is called the epicenter.

Sometimes an earthquake has foreshocks. These are smaller earthquakes that happen in the same place as the larger earthquake that follows. Scientists can't tell that an earthquake is a foreshock until the larger earthquake happens. The largest, main earthquake is called the mainshock. Mainshocks always have aftershocks that follow. These are smaller earthquakes that occur afterwards in the same place as the mainshock. Depending on the size of the mainshock, aftershocks can continue for weeks, months, and even years after the mainshock! The earth has four major layers: the inner core, outer core, mantle and crust. The crust and the top of the mantle make up a thin skin on the surface of our planet.

But this skin is not all in one piece - it is made up of many pieces like a puzzle covering the surface of the earth. Not only that, but these puzzle pieces keep slowly moving around, sliding past one another and bumping into each other. We call these puzzle pieces tectonic plates, and the edges of the plates are called the plate boundaries. The plate boundaries are made up of many faults, and most of the

earthquakes around the world occur on these faults. Since the edges of the plates are rough, they get stuck while the rest of the plate keeps moving. Finally, when the plate has moved far enough, the edges unstuck on one of the faults and there is an earthquake.

176. **What can be the suitable title of the passage?**

- A** All about earthquakes
- B** Fault plates
- C** Layers of earth
- D** Mainshock and aftershocks

**Answer:** A

## SSC GD Constable Previous Papers

177. **Which of the following word is the ANTONYM of the word 'boundaries' used in the passage?**

- A** Cores
- B** Verges
- C** Rims
- D** Brinks

**Answer:** A

178. **According to the passage what is the location of the start of earthquake directly above it on the surface of the earth is called?**

- A** Epicentre
- B** Centroid
- C** Hypocenter
- D** Orthocentre

**Answer:** A

179. **According to the passage which of the following statement is NOT correct?**

- A** The crust and the top of the mantle make up a thin skin on the surface of our planet.
- B** Earth has 3 major layers.
- C** Depending on the size of the mainshock, aftershocks can continue for weeks, months, and even years.
- D** Sometimes an earthquake has foreshocks.

**Answer:** B

## SSC Stenographer Previous Papers (DOWNLOAD PDF)

180. **On basis of the passage, fill in the blanks in the following sentence.**

The plate boundaries are made up of many \_\_\_\_.

- A** crusts



- B** faults
- C** spaces
- D** cores

**Answer: B**

**Instructions [181 - 185]**

In the following passage, some words have been deleted. Read the passage carefully and select the most appropriate option to fill in each blank.

The hopping kangaroo is a (1) \_\_\_\_\_ sight in every snapshot relating to Australia. Members of the kangaroo family can be as small as a rat or as big as a man. Kangaroos are found mainly in Australia, Tasmania and New Guinea. Kangaroos, which are big-footed marsupials that evolved in Australia, use their short front legs like arms. The man-sized kangaroos of Australia are (2) \_\_\_\_\_ of speeding up to 88 km/h for short distances, their means of (3) \_\_\_\_\_ being their powerful hind legs, which carry them over the ground in jumps of 9 m or more at a time.

Weighing around 70 kg, they have an average lifespan of around six to eight years and a maximum lifetime of 20 years. When bothered by predators, kangaroos often (4) \_\_\_\_\_ for the water, standing submerged to the chest, and attempting to drown the attacker by holding him under water. Another defensive technique is to get their back to a tree and kick at their (5) \_\_\_\_\_ with their clawed hind feet, sometimes with sufficient force to kill a man. Normally shy animals, they alert other kangaroos to danger by beating on the ground with their hind feet. This loud alarm signal carries over a long distance.

181. **Select the most appropriate option to fill in blank number 1.**

- A** obligatory
- B** familiar
- C** recurrent
- D** mandatory

**Answer: B**

182. **Select the most appropriate option to fill in blank number 2.**

- A** adept
- B** capable
- C** skilled
- D** ready

**Answer: B**

**SSC CGL Previous Papers (DOWNLOAD PDF)**

183. **Select the most appropriate option to fill in blank number 3.**

- A** relocation
- B** migration
- C** dislocation
- D** locomotion

**Answer: D**

184. Select the most appropriate option to fill in blank number 4.

- A return
- B steer
- C orient
- D head

**Answer: D**

185. Select the most appropriate option to fill in blank number 5.

- A adversary
- B invader
- C archfoe
- D emulator

**Answer: A**

## SSC CHSL Free Mock Test (Latest Pattern)

### Instructions [186 - 190]

In the following passage, some words have been deleted. Read the passage carefully and select the most appropriate option to fill in each blank.

When Anoobha entered her bathroom, she found it (1)\_\_\_\_\_with water. Had it been her old house, she would have panicked because her irate (2)\_\_\_\_\_ would have started calling her names from downstairs by then. But in her new flat, an independent (3)\_\_\_\_\_ on the third floor, she was saved from having to face anyone's ire whatsoever. The sight of a flooded bathroom (4)\_\_\_\_\_ her, giving rise to the child in her. She jumped around in the water for a while before (5)\_\_\_\_\_the tap.

186. Select the most appropriate option to fill in blank number 1.

- A dried
- B sealed
- C flooded
- D covered

**Answer: C**

187. Select the most appropriate option to fill in blank number 2.

- A worker
- B employer
- C employee
- D landlady

**Answer: D**

188. Select the most appropriate option to fill in blank number 3.

- A castle
- B apartment
- C shop
- D mall

**Answer: B**

## SSC Stenographer Previous Papers (Latest Pattern)

189. Select the most appropriate option to fill in blank number 4.

- A bored
- B depressed
- C excited
- D confused

**Answer: C**

190. Select the most appropriate option to fill in blank number 5.

- A shutting
- B breaking
- C opening
- D choking

**Answer: A**

### Instructions [191 - 195]

In the following passage, some words have been deleted. Read the passage carefully and select the most appropriate option to fill in each blank.

We live in (1) \_\_\_\_\_ age of wonders and miracles. It has been called the 'Age of Science', and different aspects of our life that changed in the (2) \_\_\_\_\_ centuries have been attributed to science. This is completely true, but it is only one side of the coin. The flip side is that as we have advanced more in the field of technology, something fundamental to humanity has been left behind. Values such as empathy and concern for our fellow human beings are gradually being eroded due to the onslaught of our ever-evolving lifestyles, aided by the marvels of technological advancements.

Take the example of the Internet. On one hand, access to information and knowledge at the click of a button is a veritable boon to everyone (especially students) and this has made our lives much simpler. On the other hand, it has severely limited actual contact with teachers, friends and elders. Thus, the learning that a person (3) \_\_\_\_\_ is incomplete as he or she cannot easily take the advice that another person can give on the basis of knowledge and practical experience that is at his or her disposal.

Today, a small child can access and navigate the Internet with an ease that still astounds (4) \_\_\_\_\_ from the older generation. But what is even more astounding is the neglect of the basic human traits of friendship, relationships and family values. Owing to all the technological advancements and the gadgets available today, children often miss out on the most enriching childhood experiences such as playing outdoor games with friends, which (5) \_\_\_\_\_ from being immensely enjoyable and physically exhilarating, also develops traits such as teamwork and discipline at an early age.

191. Select the most appropriate option to fill in blank number 1.

- A the

- B** an
- C** this
- D** a

**Answer: B**

## SSC GD Constable Free Mock Test (Latest Pattern)

192. Select the most appropriate option to fill in blank number 2.

- A** preceding
- B** pioneer
- C** anterior
- D** initial

**Answer: A**

193. Select the most appropriate option to fill in blank number 3.

- A** builds
- B** expands
- C** gains
- D** grows

**Answer: C**

194. Select the most appropriate option to fill in blank number 4.

- A** their
- B** these
- C** them
- D** those

**Answer: D**

## SSC MTS Free Mock Test (Latest Pattern)

195. Select the most appropriate option to fill in blank number 5.

- A** asunder
- B** away
- C** apart
- D** distant

**Answer: C**

### Instructions [196 - 200 ]

In the following passage, some words have been deleted. Read the passage carefully and select the most appropriate option to fill in each blank.

One month ago, he had lost his (1) \_\_\_\_\_ in a car crash. He had suffered from head injuries that had sent him into a coma for two weeks. With the crash, his (2) \_\_\_\_\_ career as an F1 racer ended and all his ambitions tied to the sport were (3) \_\_\_\_\_. He was one of the youngest racers to have made it to the F1 (4) \_\_\_\_\_ and his skills were (5) \_\_\_\_\_ by any other racer in his country, they say

196. Select the most appropriate option to fill in blank number 1.

- A vision
- B mobile
- C hair
- D wallet

**Answer: A**

197. Select the most appropriate option to fill in blank number 2.

- A sinking
- B promising
- C surprising
- D traveling

**Answer: B**

### Current Affairs Questions & Answers (Download pdf)

198. Select the most appropriate option to fill in blank number 3.

- A pushed
- B uplifted
- C crushed
- D stopped

**Answer: C**

199. Select the most appropriate option to fill in blank number 4.

- A group
- B circuit
- C friends
- D company

**Answer: B**

200. Select the most appropriate option to fill in blank number 5.

- A** upheld
- B** unmatched
- C** matched
- D** snatched

**Answer:** B

**Daily & Monthly Current Affairs (Download pdf)**

**Daily Free Online GK tests**

**SSC CHSL Previous Question papers (download pdf)**

**SSC CPO Previous Question papers (download pdf)**

**SSC GD Previous Question papers (download pdf)**

**SSC MTS Previous Question papers (download pdf)**

**SSC CHSL Free Mock Test**

**SSC CPO Free Mock Test**

**SSC GD Free Mock Test**

**SSC CGL Free Mock Test**

**Download SSC General Knowledge PDF**

**SSC CHSL Previous Papers (DOWNLOAD PDF)**

**SSC GD Constable Previous Papers**

**SSC Stenographer Previous Papers (DOWNLOAD PDF)**

**SSC CGL Previous Papers (DOWNLOAD PDF)**

**SSC CHSL Free Mock Test (Latest Pattern)**



**[SSC Stenographer Previous Papers \(Latest Pattern\)](#)**

**[SSC GD Constable Free Mock Test \(Latest Pattern\)](#)**

**[SSC MTS Free Mock Test \(Latest Pattern\)](#)**

**[Current Affairs Questions & Answers \(Download pdf\)](#)**

**[Daily & Monthly Current Affairs \(Download pdf\)](#)**

**[SSC Stenographer Important Questions \(Download PDF\)](#)**

**[SSC Stenographer Mocks For Just RS. 117](#)**

**[SSC Stenographer Free Videos \(Youtube\)](#)**

**[SSC Stenographer Expected Cutoff](#)**

**[SSC Stenographer Syllabus PDF](#)**