



All rights reserved. No part of this publication may be reproduced, distributed, or transmitted in any form or by any means, electronic, mechanical, photocopying, recording or otherwise, or stored in any retrieval system of any nature without the permission of cracku.in, application for which shall be made to support@cracku.in

SSC MTS 11th October 2021 Shift-3

English Language

1. Select the most appropriate **ANTONYM** of the given word.

HEFTY

- A** handsome
- B** generous
- C** slight
- D** liberal

Answer: C

2. Select the most appropriate **synonym** of the given word.

SMUDGE

- A** stain
- B** sweet
- C** trash
- D** mud

Answer: A

3. Select the most appropriate option to fill in the blank.

The quarantine period for travellers by road into this State has been _____ to 28 days.

- A** advanced
- B** increased
- C** expanded
- D** enlarged

Answer: B

4. Select the most appropriate one-word substitution for the given words.

The first people to live in an area

- A** Provincial
- B** Native
- C** Colonial
- D** Local

Answer: B

SSC MTS Previous Papers (DOWNLOAD PDF)

5. Select the most appropriate meaning of the given idiom.
Fit as a fiddle

- A To be in excellent health and good working order
- B About to buy a good musical instrument
- C Ready to start playing a fiddle
- D To have an expensive musical instrument

Answer: A

6. Select the most appropriate option to fill in the blank.

After she received an overripe papaya, Vidya exclaimed that she would never ever _____ fruits online.

- A order
- B ordered
- C orders
- D ordering

Answer: A

7. Select the MISSPELT word.

- A Eminent
- B Tolarance
- C Weary
- D Happiness

Answer: B

SSC CHSL Prevoius Papers (DOWNLOAD PDF)

8. Select the most appropriate meaning of the given idiom.
Elbow grease

- A Oil on the shirt sleeve
- B Too much cream on hands
- C Stain on a car glass
- D A lot of physical effort

Answer: D

9. Select the most appropriate option to substitute the underlined segment in the given sentence. If there is no need to substitute it, select 'No substitution required'.

Keep pets can be very comforting for most people.

- A Keeping pet

- B Keeps pet
- C No substitution required
- D Keeping pets

Answer: D

10. Identify the segment in the sentence which contains a grammatical error.
According to the meteorology department, yesterday Assam had the heavier rainfall of the decade.

- A yesterday Assam had
- B the heavier rainfall of the decade
- C According to
- D the meteorology department

Answer: B

SSC Stenographer Previous Papers (Download PDF)

11. Identify the segment in the sentence which contains a grammatical error.
After the rain the roads was wet and waterlogged in some places.

- A After the rain
- B wet and waterlogged
- C in some places.
- D the roads was

Answer: D

12. Select the most appropriate option to fill in the blank.
The Minister's office _____ press statement that the Webinar which had been held on the previous day had received an excellent response.

- A have issue
- B issues
- C issued
- D will issued

Answer: C

13. Select the most appropriate option to substitute the underlined segment in the given sentence. If there is no need to substitute it, select 'No substitution required'.

At first, we cruised in the local river beside trying anything more adventurous.

- A already
- B before
- C No substitution required

D earlier

Answer: B

SSC GD Constable Previous Papers

14. Identify the segment in the sentence which contains a grammatical error.

There was very poor receptivity due from technological glitches; nonetheless, the online class was continued.

A There was very poor receptivity

B the online class was continued

C due from technological glitches

D nonetheless

Answer: C

15. Select the most appropriate option to substitute the underlined segment. If no substitution is required, select 'No substitution required'.

The doctor asked the patient what he had ate the previous night.

A No substitution required

B had he eaten

C had he ate

D he had eaten

Answer: D

16. Select the most appropriate option to fill in the blank.

The patient's family had to go through a lot of trouble to _____ her into a hospital.

A join

B admit

C access

D permit

Answer: B

SSC CGL Previous Papers (DOWNLOAD PDF)

17. Select the most appropriate synonym of the given word.

PRIORITY

A dignity

B formality

C paucity

D precedence

Answer: D

18. Select the MISSPELT spelt word.

- A Business
- B Dreadful
- C Emergensy
- D Inflammable

Answer: C

19. Select the most appropriate one-word substitution for the given words.

Special words and phrases used by particular groups of people, especially in their work

- A Dialogue
- B Elocution
- C Conversation
- D Jargon

Answer: D

SSC CGL Free Mock Test (Latest Pattern)

20. Select the most appropriate ANTONYM of the given word.

FATIGUE

- A strength
- B control
- C weakness
- D threat

Answer: A

Instructions [21 - 25]

In the following passage some words have been deleted. Fill in the blanks with the help of the alternatives given. Select the most appropriate option for each blank.

Lin Piao used to absent himself (1)_____ classes very often and one day (2)_____ principal of the college made up his (3)_____ to expel him. So he sent for the (4)_____ man. Lin arrived just (5)_____ the principal was about to go for lunch. "Is this the time to come?" said the principal, sternly.

21. Select the most appropriate option to fill in blank no. 1.

- A from
- B in
- C for
- D to

Answer: A

22. Select the most appropriate option to fill in blank no. 2.

- A** a
- B** an
- C** some
- D** the

Answer: D

SSC CHSL Free Mock Test (Latest Pattern)

23. Select the most appropriate option to fill in blank no. 3.

- A** brain
- B** thought
- C** mind
- D** head

Answer: C

24. Select the most appropriate option to fill in blank no. 4.

- A** immature
- B** young
- C** youthful
- D** childish

Answer: B

25. Select the most appropriate option to fill in blank no. 5.

- A** also
- B** why
- C** how
- D** as

Answer: D

SSC Stenographer Previous Papers (Latest Pattern)

General Intelligence and Reasoning

26. Select the option that is related to the third term in the same way as the second term is related to the first term.
Square : Rectangle : Rhombus : ?

- A Cuboid
- B Trapezium
- C Kite
- D Parallelogram


Answer: D

SSC GD Constable Free Mock Test (Latest Pattern)


27. Select the correct image mirror of the given figure when the mirror is placed to the right of the figure.



A




B



C



D



Answer: A

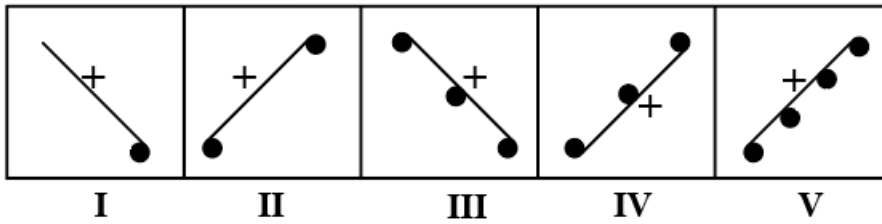
28. 'Kilogram' is related to 'Vegetables' in the same way as 'Litre' is related to '_____'.

- A Bananas
- B Pulses
- C Milk

D Grass

Answer: C

29. Find which figure is to be removed so that all, starting from I, fit into a pattern.



A II

B III

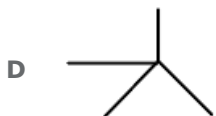
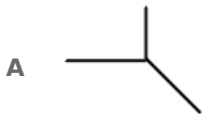
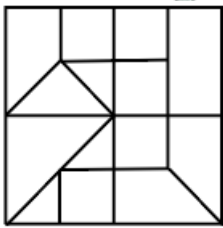
C V

D IV

Answer: D

SSC MTS Free Mock Test (Latest Pattern)

30. Select the option figure which is NOT embedded in the given figure (rotation is NOT allowed).



Answer: D

31. Select the number that can replace the question mark (?) in the given number series.
121, 57, 21, 5, ?

A 4

B 8

C 1

D 3

Answer: C

32. Three statements are given, followed by three conclusions. Assuming the statements to be true, even if they seem to be at variance with commonly known facts, decide which of the conclusions logically follow(s) from the statements.

Statements:

1. All children study in class V.
2. Some children go to coaching.
3. Some children are brilliant.

Conclusions:

- I. All children who go to coaching are brilliant.
- II. Children who go to coaching also study in class V.
- III. All children who study in class V are not brilliant.

- A** Both conclusions I and II follow,
B Both conclusions II and III follow.
C Only III follows.
D Only II follows.

Answer: D

SSC CPO Free Mock Test (Latest Pattern)

33. Six students, A, B, C, D, E and F, are standing facing north. They are not standing in alphabetical order. A is at one corner and F is beside him. B is to the immediate right of E. B is at the second place from the right end. C is not beside F. Who is standing at the right end?

- A** A
B E
C D
D C

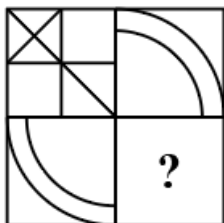
Answer: D

34. Select the combination of letters that when sequentially placed in the blanks of the given letter series will complete the series.
C _ U K Z U K _ U C

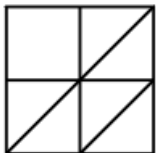
- A** KZCCZ
B ZCKZC
C UKZCK
D CKZCZ

Answer: A

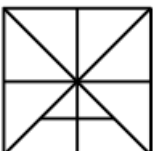
35. Complete the missing portion of the given pattern by selecting from the given options.



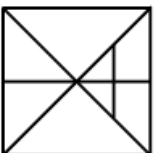
A



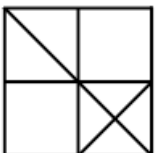
B



C



D



Answer: D

SSC MTS Free Preparation App

36. In a certain code language, '137' means 'who are you', '274' means 'we are girls', and '893' means 'you have toys'. Which of the following options is the code for 'who'?

A 8

B 1

C 3

D 7

Answer: B

37. If in a code language, 'ROSE' is written as 'TSYM', then how will 'SOME' be written in the same code language?

A USSM

B YSEM

C YESM

D USME

Answer: A

38. Select the number that can replace the question mark (?) in the given number series.
26, 37, 50, 65, ?, 101

A 78
B 82
C 80
D 92

Answer: B

285 SSC Mocks - Just RS. 249

39. Three statements are given, followed by two conclusions. Assuming the statements to be true, even if they seem to be at variance with commonly known facts, decide which of the conclusions logically follow(s) from the statements.

Statements:

1. Suhani is a player.
2. No boy is a player.
3. All tall persons are players.

Conclusions:

- I. Suhani is not an tall person.
- II. Boys are not tall persons.

A Neither conclusion I nor II follows.
B Only conclusion II follows.
C Both conclusions I and II follow.
D Only conclusion I follows.

Answer: B

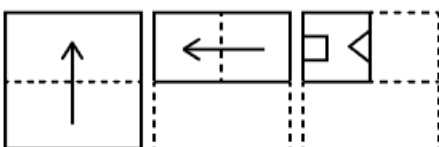
40. Arrange the following in a logical and meaningful order. (decreasing order with their heights)

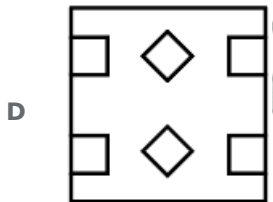
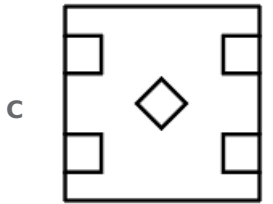
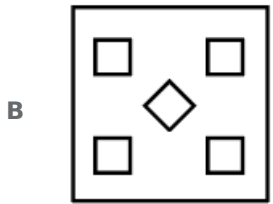
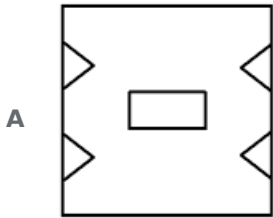
- I. Eiffel Tower
- II. Empire State Building
- III. Qutub Minar
- IV. Burj Khalifa

A IV, II, I, III
B I, IV, II, III
C III, II, I, IV
D I, II, III, IV

Answer: A

41. A paper is folded at the dotted lines as shown in first two figures, and cut as shown in the third figure, How will it appear when unfolded?.





Answer: D

SSC Exam Free Videos (Youtube)

42. Select the set of numbers from the given options which is NOT similar to the given set.
(12, 81, 15)

A (11, 69, 12)

B (15, 93, 16)

C (13, 85, 17)

D (8, 63, 13)

Answer: C

43. Select the option in which the number-pair shares the same relationship as that shared by the given number-pair.
347 : 117

A 242 : 82

B 165 : 56

C 265 : 88

D 135 : 48

Answer: A

44. In a certain code language, '137' means 'Mary went Jammu', '274' means 'I like Mary', and '893' means 'you went Goa'. Which of the following options may be the code for 'Goa'?

- A 1. 7
- B 2. 8
- C 3. 1
- D 3. 3

Answer: B

SSC Study Material

45. Select the correct combination of mathematical signs to sequentially replace the * signs and balance the given equation.

$$7 * 2 * 5 * 4 * 2 * 15$$

- A $\div, -, +, \times, =$
- B $-, \div, +, \times, =$
- C $+, \times, -, \div, =$
- D $\times, -, +, \div, =$

Answer: C

46. There are seven row houses, M, N, O, P, Q, R and S, in a campus. They are not located in alphabetical sequence. P is not at any end. R is to the immediate right of P. S is third from the left. O is at the left end. M is second from the right. O is not with N. Where is Q located?

- A Third from the right
- B At the right end
- C Second from the left
- D Fourth from the right

Answer: C

47. If in a code language, 'SOLD' is written as 'HLOW', then how will 'ROME' be written in the same code language?

- A GLPK
- B ILNV
- C ILHW
- D GLPV

Answer: B

SSC Daily Practice Set

48. Which two signs should be interchanged to make the given equation correct?

$$3 \div 6 - 2 + 8 \times 4 = 18$$

A \div and $-$

B $+$ and \div

C \div and \times

D $+$ and $-$

Answer: C

49. Select the option that is related to the third letter-cluster in the same way as the second letter-cluster is related to the first letter-cluster.

STEAM : PWBDJ :: DRESS : ?

A AUBVP

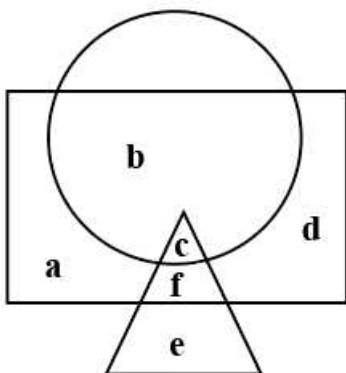
B AOHVP

C AVBUP

D AOBVV

Answer: A

50. In the given figure, the circle represents 'kids who can sing', the rectangle represents 'kids who can play', and the triangle represents 'kids who can dance'. Which part of the figure represents 'kids who can dance but CANNOT sing'?



A e

B c

C f

D e and f

Answer: D

SSC GK Free Tests

Numerical Aptitude

51. There are 1200 students in a hostel. If the number of the students is increased by 1300, then the expenses of the mess increase by ₹5,000 per day, while the average expenditure per head diminishes by ₹5. The original expenditure of the mess, per day, is:

A ₹52,00

B ₹45,00

C ₹50,000

D ₹55,000

Answer: C

SSC GK Questions

52. In what time will ₹8,000 become ₹12,167 at 15% per annum, compounded annually?

A 3 years

B 2 years

C 5 years

D 4 years

Answer: A

53. A sum of ₹16,000 is divided between Rahul and Vinod. Rahul invested his sum at 7.5% p.a. for 4 years at simple interest, and Vinod invested his sum at 12% p.a. for 4 years simple interest. If the total interest received by Rahul and Vinod together is ₹6,024 then the sum invested by Rahul is:

A ₹8,200

B ₹9,200

C ₹8,400

D ₹9,500

Answer: B

54. What number must be added to each of the numbers 7, 4 and 2 so that the resulting numbers may be in a continued proportion?

A 2

B 4

C 3

D 5

Answer: A

55. If a number of pens and pencils are bought in the ratio of 5:3, Ashok has to pay ₹44. If the ratio is changed as 3:5, then he has to pay ₹36. Find the ratio of the price of one pen to one pencil.

A 5:3

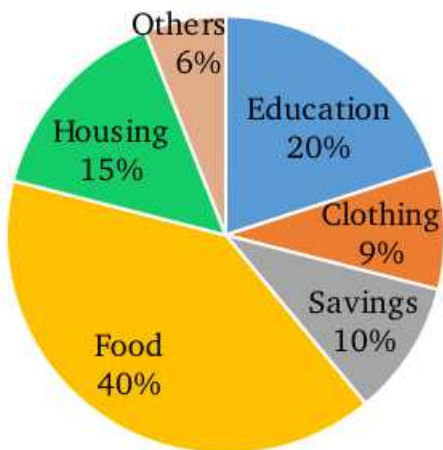
B 7:3

C 8:5

D 7:4

Answer: B

56. The given pie chart shows the monthly saving and expenditure incurred by a family on various items. Study the chart and answer the given below.



If the expenditure on housing is ₹1,680 more than that on clothing, then the yearly saving are:

- A ₹34,600
- B ₹32,500
- C ₹33,500
- D ₹33,600

Answer: D

57. A cylindrical pillar is 75 cm in diameter and 5.6 in height. The cost of painting the curved surface of the pillar at the rate of ₹15 per m^2 is:

(Taken $\pi = \frac{22}{7}$)

- A ₹198
- B ₹195
- C ₹180
- D ₹188

Answer: A

SSC MTS Previous Papers (DOWNLOAD PDF)

58. The ratio of the curved surface area and the volume of closed cylinder is 4:7. If its total surface area is 253 cm^2 , then its height is:

(Taken $\pi = \frac{22}{7}$)

- A 9cm
- B 10cm
- C 8cm
- D 5cm

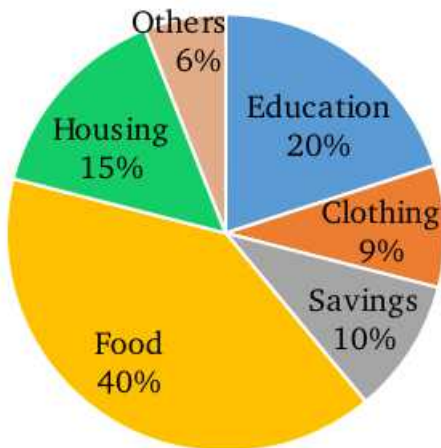
Answer: C

59. How many minutes does Vishwa take to cover a distance of 1200 m if he runs at a speed of 20km/h?

- A 3 minutes
- B 6 minutes
- C 5 minutes
- D 8 minutes

Answer: A

60. The given pie chart shows the monthly savings and expenditure incurred by a family and various items. Study the chart and answer the question given below.



The central angle of food and education together is:

- A 218°
- B 206°
- C 216°
- D 116°

Answer: C

SSC CHSL Prevoius Papers (DOWNLOAD PDF)

61. The HCF and LCM of two number are 8 and 224, respectively. If the ratio of the two number is 4:7, then the greater of the two numbers is:

- A 54
- B 32
- C 58
- D 56

Answer: D

62. In the first 20 overs of a 50 over game of cricket, the run rate was 5.2. What should be the run rate in the remaining 30 over to reach the target of 344 runs?

- A 8
- B 7
- C 6
- D 7.5

Answer: A

63. Renuka got $1\frac{1}{2}$ times as many marks in mathematics as in English. Her total marks in mathematics, English and science 190. If the ratio of the marks in mathematics and science is 2:3, find her science marks.

- A 92
- B 90
- C 85
- D 88

Answer: B

SSC Stenographer Previous Papers (Download PDF)

64. The profit earned after selling an article for ₹5,600 is the same as the loss incurred after selling the article for ₹2,400

- A 25%
- B 32%
- C 30%
- D 40%

Answer: D

65. 4 men and 5 women can earn ₹8,800 in 8 days. 7 men and 10 women can earn ₹10,250 in 5 days. In how many days will 8 men and 12 women earn ₹21,600?

- A 8 days
- B 9 days
- C 12 days
- D 10 days

Answer: B

66. What is the simplified value of $1\frac{1}{16} - \left(\frac{2}{5} \text{ of } \frac{5}{32} - \frac{1}{3} \div \frac{3}{7} \text{ of } \frac{49}{50} + 2 - (4 * 19) \right) \div 63$?

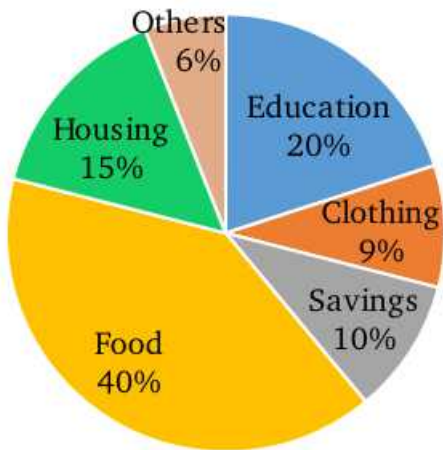
- A $\frac{1}{8}$
- B $\frac{1}{3}$
- C $\frac{1}{16}$

D 1

Answer: A

SSC GD Constable Previous Papers

67. The given pie chart shows the monthly savings and expenditure incurred by a family and various items. Study the chart and answer the question given below.



If the monthly savings are ₹5,000 then the total expenditure on education and clothing is:

- A ₹16,500
- B ₹14,500
- C ₹15,500
- D ₹14,000

Answer: B

68. The internal and external radii of a hollow hemispherical bowl are 20 cm and 23 cm, respectively. What is the total surface area (in cm^2) of the bowl?

- A 2082π
- B 1858π
- C 1987π
- D 2194π

Answer: C

69. The mean of prime numbers between 20 and 45 is:

- A 36
- B 34
- C 24
- D 32

Answer: B

SSC CGL Previous Papers (DOWNLOAD PDF)

70. The article was sold at $\frac{4}{3}$ times of its cost price. The profit percentage is:

- A $33\frac{1}{4}\%$
- B $33\frac{1}{3}\%$
- C $33\frac{1}{5}\%$
- D $32\frac{1}{3}\%$

Answer: B

71. The total surface area of a solid right circular cylinder is 1617 cm^2 . If the diameter of its base is 21 cm, when what is its volume (in cm^3) (Taken $\pi = \frac{22}{7}$)

- A 4851
- B 5228
- C 5324
- D 39712

Answer: A

72. Dheeraj can cover a certain distance in 5 hours and 22 minutes by covering three-fourth of the distance at 5 km/h and rest at 6 km/h. Find the total distance covered by him.

- A 28 km/h
- B 30 km/h
- C 25 km/h
- D 26 km/h

Answer: A

SSC CGL Free Mock Test (Latest Pattern)

73. A can do a work in 20 days and B can do it in 14 days. If they work together for 7 days, then the fraction of the work left is:

- A $\frac{3}{10}$
- B $\frac{3}{20}$
- C $\frac{7}{20}$
- D $\frac{7}{10}$

Answer: B

74. Sonu kumar spent 42% of his monthly income on food, 16% on rent, 10% on entertainment and 7% on travelling. But suddenly for family function, he needed Rs. 18000 and for this he took a loan of Rs. 12500. Find out his monthly income.

- A ₹22,000
- B ₹24,000
- C ₹20,000
- D ₹25,000

Answer: A

75. To successive discounts, the first being $14\frac{7}{10}\%$ were given on an article having a marked price of ₹12,500. Finally, it was sold for ₹9,405. How much was the second discount?

- A 10%
- B 9%
- C 8%
- D 12%

Answer: D

SSC CHSL Free Mock Test (Latest Pattern)

General Awareness

76. Which of the following festival is known as Manipur new year?

- A Gang nagi
- B Charoba
- C Cute
- D Heikru Hidongba

Answer: B

SSC Stenographer Previous Papers (Latest Pattern)

77. Tilaiya Ultra mega power project is located in which of the following states?

- A Gujarat
- B Jharkhand
- C Maharashtra
- D Madhya Pradesh

Answer: B

78. Who among the following was the President of India when the National Emergency was declared in 1975?

- A Jakir Hossain

- B** Varahagiri Venkata Giri
- C** Fakhruddin Ali Ahmed
- D** Neelam Sanjiva Reddy

Answer: C

79. Which of the following is a property of silicon dioxide?

- A** It is soluble in water.
- B** It is a good conductor of electricity.
- C** It is soft.
- D** Its melting point is high.

Answer: D

SSC GD Constable Free Mock Test (Latest Pattern)

80. How many total natural isotopes are there of carbon?

- A** 3
- B** 2
- C** 5
- D** 4

Answer: A

81. Vimad VI, whose biography was written by his courtier Kiva Bina, was the ruler of the _____ dynasty.

- A** Chalukya
- B** Pallava
- C** Rashtrakuta
- D** Ganga

Answer: A

82. According to the Indian Constitution, a member of the Union Public Service Commission holds office for a term of six years or till he attains the age of _____ years.

- A** 60
- B** 68
- C** 65
- D** 62

Answer: C

SSC MTS Free Mock Test (Latest Pattern)

83. Which of the following is a firm run by billionaire Warren Buffett?

- A Buckshire Hathaway
- B Bank of America
- C American Express Company
- D J.P. morgan chase

Answer: A

84. In August 2020, who among the following were the members of the Indian Parliamentary Group?

- A M. Venkaiah Naidu
- B Om Birla
- C Virendra Kumar
- D Sumitra Mahajan

Answer: B

85. When national consumer day is celebrated in India?

- A 26 december
- B 26 november
- C 24 november
- D 24 december

Answer: D

SSC CPO Free Mock Test (Latest Pattern)

86. What is the scientific name of Chromite?

- A Copper Chromium Oxide
- B Iron Chromium Oxide
- C Silver Chromium Oxide
- D Aluminium Chromium Oxide

Answer: B

87. Which of the following is not one of the official mascots of the 2022 Asian Games - 'The Smart Triplets'?

- A Chenchen
- B Lianlian

C Kongkong

D Kinchen

Answer: D

88. Which of the following diseases is not caused by the Flavivirus?

A Japanese Encephalitis

B Pitta Fever

C Polio

D Dengue

Answer: C

SSC MTS Free Preparation App

89. Indian-origin South African, Geeta Ramji, who breathed her last in March 2020, is known internationally for her contribution to which field?

A Developmental economy

B Nuclear Physics

C Virus Science

D Space Research

Answer: C

90. In which state Mahadev hills spread mainly?

A Uttar Pradesh

B Chhattisgarh

C Jharkhand

D Madhya Pradesh

Answer: D

91. Under Article 280 of the Constitution, the Finance Commission of India is constituted by ____.

A Vice President

B High Court

C Supreme Court

D President

Answer: D

285 SSC Mocks - Just RS. 249

92. With which of the following dynasty was Rani Rudrama devi related?

- A Chola
- B Vakataka
- C West Ganga
- D Kakatiya

Answer: D

93. Which of the following is directly not impacted the Current Account Balance in India?

- A Fiscal deficit
- B Net Income from Abroad
- C Foreign Aid
- D Trade Gap

Answer: A

94. Nokrek Biosphere Reserve is located in which of the following states?

- A Meghalaya
- B Nagaland
- C Arunachal Pradesh
- D Sikkim

Answer: A

SSC Exam Free Videos (Youtube)

95. Which of the following is not a tribal group traditionally residing in Andaman and Nicobar Islands?

- A Sentinelese
- B Onge
- C Jarawa
- D Munda

Answer: D

96. Which of the following state of matter is also known as Bose-Einstein condensate?

- A Fourth
- B Third
- C Second
- D Fifth

Answer: D

97. As on September 2020, which of the following is the national park, listed in UN (UNESCO) World Heritage List (Natural)?

- A** Dachigam national park
- B** Gir national park
- C** Hemis national park
- D** Keoladeo national park

Answer: D

SSC Study Material

98. Which of the following is the oldest tennis tournament in the world?

- A** French open
- B** US open
- C** Wimbledon
- D** Australian open

Answer: C

99. Which of the following charitable organization has won the Skoll Prize for Social Excellence in 2020?

- A** CRY
- B** ARMMAN
- C** Greenpeace
- D** Goonj

Answer: B

100. Which of the following organizations was established earlier than the other three organizations during British rule?

- A** Brahmo Samaj
- B** Prarthana Samaj
- C** Paramahansa Mandali
- D** Satyashodhak Samaj

Answer: A

SSC Daily Practice Set

SSC MTS Previous Papers (DOWNLOAD PDF)

SSC CHSL Previous Papers (DOWNLOAD PDF)

SSC Stenographer Previous Papers (Download PDF)

SSC GD Constable Previous Papers

SSC CGL Previous Papers (DOWNLOAD PDF)

SSC CGL Free Mock Test (Latest Pattern)

SSC CHSL Free Mock Test (Latest Pattern)

SSC Stenographer Previous Papers (Latest Pattern)

SSC GD Constable Free Mock Test (Latest Pattern)

SSC MTS Free Mock Test (Latest Pattern)

SSC CPO Free Mock Test (Latest Pattern)

SSC MTS Free Preparation App

285 SSC Mocks - Just RS. 249

SSC Exam Free Videos (Youtube)

SSC Study Material

SSC Daily Practice Set

SSC GK Free Tests

SSC GK Questions