



All rights reserved. No part of this publication may be reproduced, distributed, or transmitted in any form or by any means, electronic, mechanical, photocopying, recording or otherwise, or stored in any retrieval system of any nature without the permission of cracku.in, application for which shall be made to [support@cracku.in](mailto:support@cracku.in)

# SSC MTS 15th July 2022 Shift-3

## English Language

1. Select the most appropriate **ANTONYM** of the given word.

**Flared**

- A** Darkened
- B** Radiated
- C** Flamed
- D** Glared

**Answer: A**

2. Select the most appropriate **ANTONYM** of the given word.

**Impolite**

- A** Courteous
- B** Superior
- C** Uncivil
- D** Blunt

**Answer: A**

3. Select the option that can be used as a one-word substitute for the given group of words.

**Of or relating to the moon**

- A** Solar
- B** Platonic
- C** Fatal
- D** Lunar

**Answer: D**

4. Select the option that will improve the underlined part of the given sentence. In case no improvement is needed, select 'No improvement required'.

A clinical thermometer consists of a long, narrow, uniform glass tube.

- A** consisting of a
- B** No improvement required
- C** consist of a
- D** consisted in a

**Answer: B**

5. Select the most appropriate meaning of the given idiom.  
Move the goalposts

- A Unfairly alter the conditions or rules of a procedure during its course
- B To do your research and understand clearly what your goals are
- C To put a lot of effort into something
- D To move the goalpost after an attempt has been made to score a goal

**Answer:** A

6. Parts of the given sentence have been given as options. One of them may contain an error. Select the part that contains the error from the given options. If you don't find any error, mark 'No error' as your answer.  
I have watched a lot of students excel in online courses, taking fully advantage of the convenience.

- A excel in online courses, taking fully
- B advantage of the convenience
- C I have watched a lot of students
- D No error

**Answer:** A

7. Select the most appropriate meaning of the underlined idiom in the given sentence.  
Stop crying for the moon and start coming up with some sensible demands.

- A To understand the hidden meaning
- B To make money unfairly
- C To make an impractical or unreasonable request
- D To praise one's efforts

**Answer:** C

## SSC CHSL Previous Papers (DOWNLOAD PDF)

8. Select the most appropriate synonym of the given word.  
Artful

- A Prudent
- B Benign
- C Ignorant
- D Crafty

**Answer:** D

9. Parts of the following sentence have been given as options. One of them may contain an error. Select the part that contains the error from the given options. If you don't find any error, mark 'No error' as your answer.  
Age doesn't seem to diminish our capacity to speak, write and learn new things.

- A** Age doesn't seem to
- B** No error
- C** write and learn new things
- D** diminish our capacity to speak

**Answer:** A

10. Select the most appropriate option to fill in the blank.

Fasting \_\_\_\_\_ some festivals increases the consumption of fruits.

- A** during
- B** while
- C** when
- D** about

**Answer:** A

## SSC Stenographer Previous Papers (Download PDF)

11. Select the most appropriate option to fill in the blank.

Da Vinci's paintings reveal an obsessive fascination with \_\_\_\_\_ rituals, like those of the Freemasons.

- A** Magnetic
- B** Pathetic
- C** Static
- D** Enigmatic

**Answer:** D

12. Parts of the following sentence have been given as options. One of them may contain an error. Select the part that contains the error from the given options. If you don't find any error, mark 'No error' as your answer.

Sometimes we interact to people who are closed-minded and not willing to listen.

- A** to people who are closed-minded
- B** and not willing to listen
- C** Sometimes we interact
- D** No error

**Answer:** A

13. Select the option that can be used as a one-word substitute for the given group of words.

A system of government by the wealthy class

- A** Theocracy
- B** Plutocracy

- C Autocracy
- D Democracy

**Answer: B**

## SSC GD Constable Previous Papers

14. Select the option that corrects the misspelt words in the given sentence.  
My freind is blessed with perfect gines.

- A My friend is blessed with perfct gines.
- B My freind is bllessed with perfect gines.
- C My freind is blessed with perfect genes.
- D My friend is blessed with perfect genes.

**Answer: D**

15. Select the correctly spelt word.

- A Telivision
- B Television
- C Televisoin
- D Television

**Answer: D**

16. Select the option that will improve the underlined part of the sentence. In case no improvement is needed, select 'No improvement required'.  
Antibiotics are one off the most commonly prescribed drugs in the world.

- A No improvement required
- B are one of a
- C are one of the
- D is one of the

**Answer: C**

## SSC CGL Previous Papers (DOWNLOAD PDF)

17. Select the most appropriate option to fill in the blank.  
She refused to back \_\_\_\_\_, so she was fired from the company.

- A down
- B over
- C upon
- D into

**Answer: A**

18. Select the option that will improve the underlined part of the given sentence. In case no improvement is needed, select 'No improvement required'.  
You is not allowed to sit here without permission.

- A has not allowed
- B are not allowed
- C is no allowing
- D No improvement required

**Answer: B**

19. Select the most appropriate synonym of the given word.  
Tenderness

- A Ruthlessness
- B Severity
- C Kindness
- D Spitefulness

**Answer: C**

### SSC CGL Free Mock Test (Latest Pattern)

20. Select the most appropriate option to fill in the blank.  
The Intergovernmental Panel on Climate Change (IPCC) \_\_\_\_\_ the idea of 'tipping points' two decades ago.

- A introduced
- B shortened
- C wounded
- D withdrawn

**Answer: A**

#### Instructions [21 - 25]

In the following passage, some words have been deleted. Read the passage carefully and select the most appropriate option to fill in each blank.

Delhi's meteorology (1) \_\_\_\_\_ the quantity of chaff burnt play a greater role in (2) \_\_\_\_\_ air quality than the time chosen by farmers in Punjab to start crop burning, a study argues. Crop burning, a traditional practice in Punjab and Haryana of (3) \_\_\_\_\_ fields off rice chaff to prepare for winter sowing, begins around October and (4) \_\_\_\_\_ in November, coinciding with the (5) \_\_\_\_\_ of southwest monsoon.

21. Select the most appropriate option to fill in blank no. 1.

- A among
- B and
- C yet

**D** but

**Answer:** B

22. Select the most appropriate option to fill in blank no. 2.

**A** worsening

**B** worsens

**C** worsen

**D** worse

**Answer:** A

## SSC CHSL Free Mock Test (Latest Pattern)

23. Select the most appropriate option to fill in blank no. 3.

**A** racing

**B** raising

**C** rising

**D** razing

**Answer:** D

24. Select the most appropriate option to fill in blank no. 4.

**A** leaks

**B** creaks

**C** falls

**D** peaks

**Answer:** D

25. Select the most appropriate option to fill in blank no. 5.

**A** availing

**B** managing

**C** running

**D** withdrawal

**Answer:** D

## SSC Stenographer Previous Papers (Latest Pattern)

### General Intelligence and Reasoning

26. In a certain code language, 'O' is coded as '15' and 'ADD' is coded as '9'. How will 'PURE' be coded in that language?

- A 60
- B 58
- C 57
- D 59

**Answer:** A

### SSC GD Constable Free Mock Test (Latest Pattern)

27. P, Q, R, S, T, U and V are seven friends who scored different marks in a test. Scores of only two people lies between the scores of S and P with score of P greater than S.. R scored the highest marks. T scored more than Q. U and V scored second least and the least marks respectively. Who scored the fourth highest marks?

- A P
- B Q
- C R
- D S

**Answer:** B

28. Select the option that is related to the third number in the same way as the second number is related to the first number.  
2041 : 346 :: 5310 : ?

- A 664
- B 732
- C 516
- D 956

**Answer:** B

29. Select the letter-cluster from among the given options that can replace the question mark (?) in the following series.  
WUE, XXG, YAI, ?

- A ZDK
- B ZOK
- C ZBH
- D ZAJ

**Answer:** A

### SSC MTS Free Mock Test (Latest Pattern)

30. Select the number that will come next in the following series.  
2, 4, 7, 11, 16, ?

- A 22

**B** 21

**C** 20

**D** 23

**Answer:** A

31. Select the option in which the words share the same relationship as that shared by the given pair of words.  
**Money : Wallet**

**A** Books : Cardboard

**B** Bag : Box

**C** Safety: Locker

**D** Letter : Envelop

**Answer:** D

32. Read the given statements and conclusions carefully. Assuming that the information given in the statements is true, even if it appears to be at variance with commonly known facts, decide which of the given conclusions logically follow(s) from the statements.

**Statements:**

All bottles are jugs.

All jugs are cups.

**Conclusions:**

I. All bottles are cups.

II. All cups are bottles.

**A** Neither conclusion I nor II follows

**B** Both conclusions I and II follow

**C** Only conclusion I follows

**D** Only conclusion II follows

**Answer:** C

### SSC CPO Free Mock Test (Latest Pattern)

33. Which of the number (not digits) should be interchanged in the given equation to make it mathematically correct?  
 $12 \div 3 - 2 + 5 \times 4 = 23$

**A** 3 and 4

**B** 3 and 2

**C** 3 and 5

**D** 4 and 5

**Answer:** B

34. Read the given statements and conclusions carefully. Assuming that the information given in the statements is true, even if it appears to be at variance with commonly known facts, decide which of the given conclusions logically follow(s) from the statements.

**Statements:**

Some belts are leathers.

All leathers are skins.

Some skins are white.

**Conclusions:**

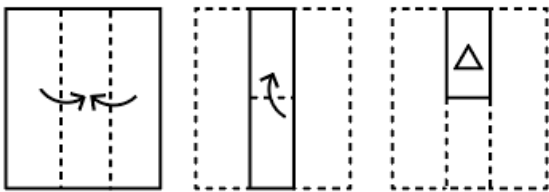
I. Some belts are skins.

II. Some belts are white.

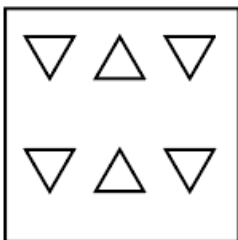
- A** Either conclusion I or II follows  
**B** Neither conclusion I nor II follows  
**C** Only conclusion II follows  
**D** Only conclusion I follows

**Answer: D**

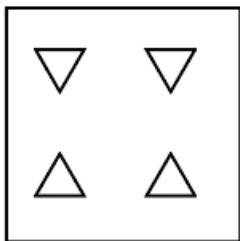
35. The sequence of folding a piece of paper and the manner in which the folded paper has been cut is shown in the following figures. How would this paper look when unfolded?



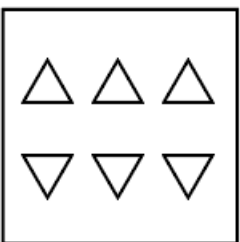
**A**



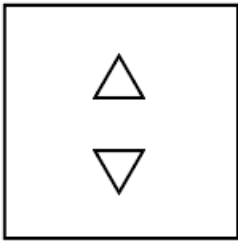
**B**



**C**



D



Answer: C

## SSC MTS Free Preparation App

36. Select the option that is related to the fifth number in the same way as the second number is related to the first number and the fourth number is related to the third number.

(NOTE: Operations should be performed on the whole numbers, without breaking down the numbers into its constituent digits. E.g. 13 - Operations on 13 such as adding /deleting /multiplying etc. to 13 can be performed. Breaking down 13 into 1 and 3 and then performing mathematical operations on 1 and 3 is not allowed)

2 : 16 :: 3 : 81 :: 6 : ?

- A 1326
- B 1296
- C 1666
- D 1524

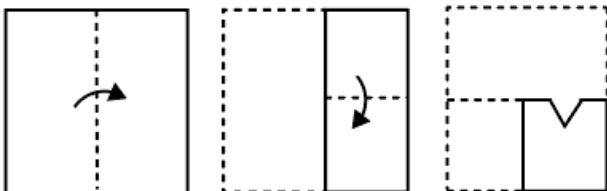
Answer: B

37. In a certain code language, 'ABKN' is coded as '84', and 'PNCL' is coded as '135'. How will 'HONT' be coded in that language?

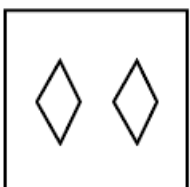
- A 181
- B 171
- C 169
- D 147

Answer: B

38. The sequence of folding a piece of paper and the manner in which the folded paper has been cut is shown in the following figures. How would this paper look when unfolded?



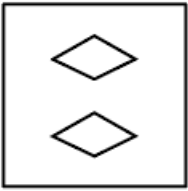
A



B



C



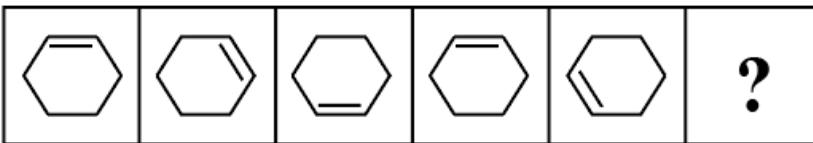
D



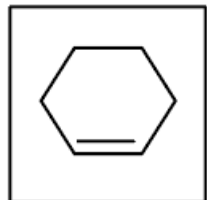
Answer: A

## 285 SSC Mocks - Just RS. 249

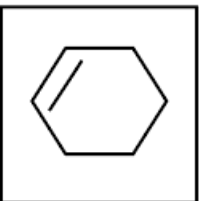
39. Select the figure from among the given options that can replace the question mark (?) in the following series.



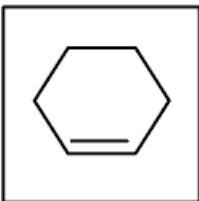
A



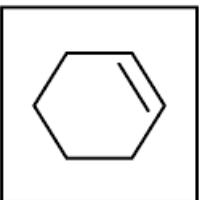
B



C



D




**Answer: A**

40. Six girls are sitting in two straight rows, facing the North. Their names are Farah, Urvashi, Yukti, Kritika, Neha and Mudita. Farah and Mudita are sitting diagonally opposite. Urvashi is in the top row and to the immediate right of Farah. Kritika is second to the left of Mudita while Yukti and Kritika are not in the same row. Who is sitting diagonally opposite to Yukti?

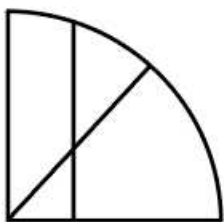
- A** Urvashi
- B** Kritika
- C** Mudita
- D** Neha

**Answer: B**

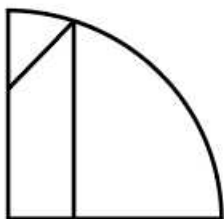
41. Select the figure from the options that can replace the question mark (?) and complete the pattern.



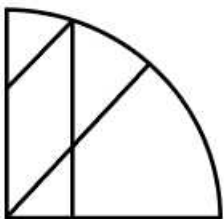
**A**



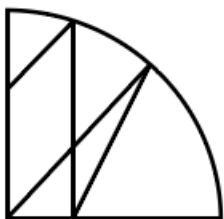
**B**



**C**



**D**



**Answer: C**

## SSC Exam Free Videos (Youtube)

42. Select the option that is related to the fifth term in the same way as the second term is related to the first term and the fourth term is related to the third term.

SACRIFY : ARFYICS :: NUMERAL : UEALRMN :: SHALLOW : ?

- A HLLWOAS
- B HLOWLAS
- C HLOLAWS
- D HLWLASO

Answer: B

43. What will come in the place of '?' in the following equation, if ' $\times$ ' and '-' are interchanged and also '+' and ' $\div$ ' are interchanged?

$$60 + 2 - 3 \times 4 \div 2 = ?$$

- A 90
- B 88
- C 45
- D 27

Answer: B

44. Six friends are sitting around a circular table facing the centre. Dilip is immediate neighbour of both Priya and Payal. Priti is immediate neighbour of both Mukesh and Leela. Payal is sitting to the immediate right of Mukesh. Who is sitting to the immediate right of Priya?

- A Dilip
- B Payal
- C Leela
- D Mukesh

Answer: C

## SSC Study Material

45. In a certain code language, '456' is written as 'sky is high', '678' is written as 'sky has dark', and '147' is written as 'star is dark'. What is the code for the word 'star' in that language?

- A 4
- B 1
- C 7
- D 5

Answer: B

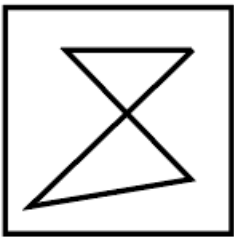
46. Select the option that is related to the fifth letter-cluster in the same way as the second letter-cluster is related to the first letter-cluster and the fourth letter-cluster is related to the third letter-cluster.

CAM : EES :: OAT : QEZ :: TOI : ?

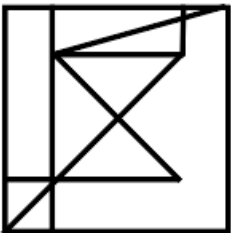
- A USO
- B VTO
- C VSO
- D VSP

**Answer: C**

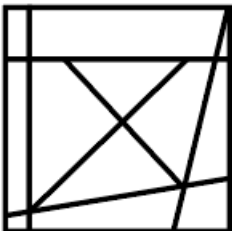
47. Select the option in which the given figure is embedded (rotation is NOT allowed).



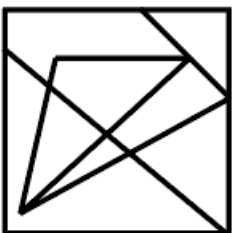
A



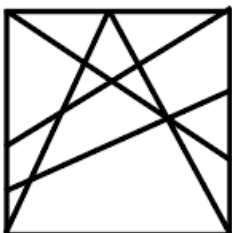
B



C



D



**Answer: B**

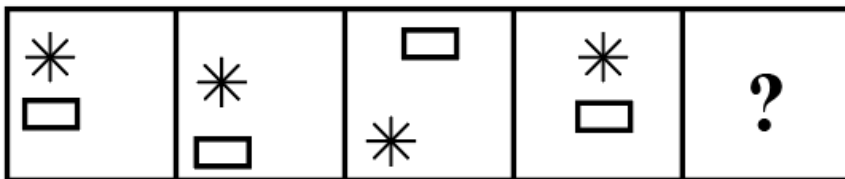
## SSC Daily Practice Set

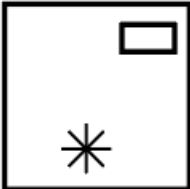
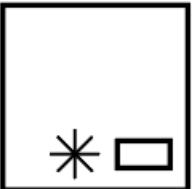
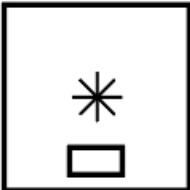
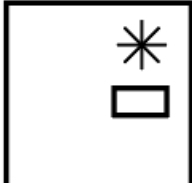
48. If ORDER = \$\*5@\* and MATTER = 2&33@\*, then ROAD = ?

- A \$\*5&
- B \$\$5&
- C \*\$&5
- D #\*5\$

**Answer: C**

49. Select the figure that will come next in the following figure series.



- A 
- B 
- C 
- D 

**Answer: C**

50. Select the option that will replace the question mark (?) in the given series.

78, 89, 82, 87, 84, ?

- A 88
- B 86

C 80

D 78

Answer: B

## SSC GK Free Tests

### Numerical Aptitude

51. The cost prices of a table and a chair are ₹400 and ₹1,200. respectively. The table and the chair are sold at prof

A 24.5%

B 22.5%

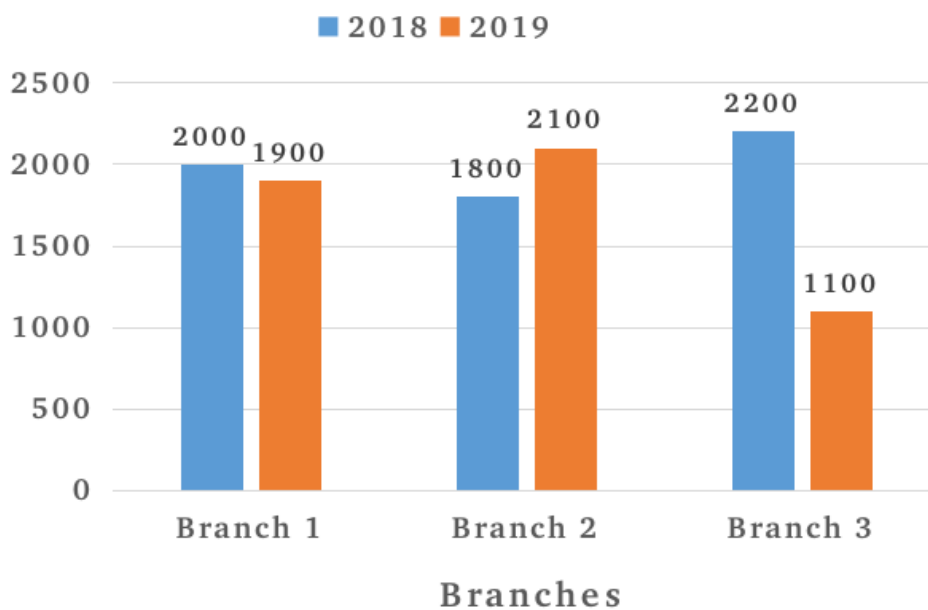
C 27.5%

D 23.5%

Answer: C

## SSC GK Questions

52. The following bar graph shows the sales of two wheelers from three different branches of a company during two consecutive years 2018 and 2019.



What is the average sale of all the branches in the year 2019?

A 1900

B 2000

C 1500

D 1700

Answer: D

53. Two cylinders have their heights in the ratio 1 : 2 and their radii in the ratio 2 : 1. What is the ratio of their volumes?

**A** 3 : 1

**B** 1 : 3

**C** 2 : 2

**D** 1 : 1

**Answer:** C

54. The difference between the compound interest, when compounded annually, and the simple interest on a certain sum of money for 2 years at 4.2% is ₹8.82. What is the sum?

**A** ₹4,500

**B** ₹2,100

**C** ₹5,000

**D** ₹3,000

**Answer:** C

55. A train crosses a stationary pole in 20 seconds and a bridge in 32 seconds. If the length of the bridge is 1200 metres, then what is the speed of the train?

**A** 360 km/h

**B** 180 km/h

**C** 270 km/h

**D** 450 km/h

**Answer:** A

56. If  $a : b = b : c$ , then what is the value of  $a^6 : b^6$ ?

**A**  $a^3 : b^3$

**B**  $b^3 : ac$

**C**  $a^3 : c^3$

**D**  $a^2 : b^2$

**Answer:** C

57. The following table shows the amount (in quintals) of 6 different types of sweets sold by a shop during a given year.

Sweet	Amount
S1	32
S2	48
S3	23
S4	37
S5	39
S6	21

The amount of S1 sold in that year was what percentage of the average amount of sweets sold per type during that year?

- A 80%
- B 84%
- C 88%
- D 96%

**Answer:** D

### SSC MTS Previous Papers (DOWNLOAD PDF)

58. If ₹39,500 is divided into three parts in the ratio 24 : 15 : 40, then what is the value of the third part, in the given order?

- A ₹18,000
- B ₹12,000
- C ₹7,500
- D ₹20,000

**Answer:** D

59. What percentage above the cost price should a seller mark his goods so that, after allowing a discount of 20% on the marked price, he can earn a profit of 4%?

- A 25%
- B 28%
- C 42%
- D 30%

**Answer:** D

60. What is the value of  $(3 \div 4) \text{ of } 20 + 16 \div 2 - \{(1 \div 3) \text{ of } 12 + (2 \div 5) \text{ of } 25\}$ ?

- A 8
- B 7
- C 10

**D** 9

**Answer:** D

## SSC CHSL Previous Papers (DOWNLOAD PDF)

61. A number X is 60% of the average of 20, 28 and 36. What is the value of the number X?

**A** 29.5

**B** 16.8

**C** 25.6

**D** 15.5

**Answer:** B

62. An aeroplane covers a distance of 900 km in 1.5 hours. What is the speed of the aeroplane?

**A** 500 km/h

**B** 300 km/h

**C** 600 km/h

**D** 400 km/h

**Answer:** C

63. If the average of 20, 40, 50, Y and Z is 45, then what is the average of Y and Z?

**A** 58.5

**B** 57.5

**C** 56.5

**D** 55

**Answer:** B

## SSC Stenographer Previous Papers (Download PDF)

64. By selling an article for ₹1,200, a shopkeeper suffered a loss of 20%. What was the cost price of that article?

**A** ₹1,500

**B** ₹1,020

**C** ₹1,000

**D** ₹1,180

**Answer:** A

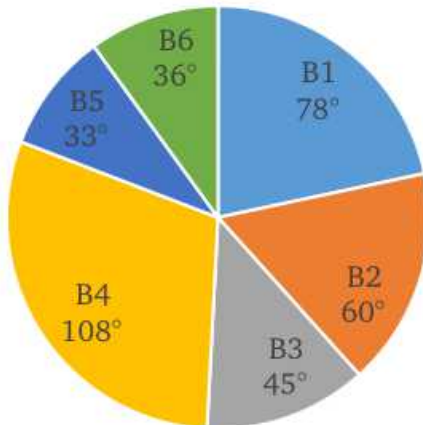
65. The area of a circle is  $2464 \text{ cm}^2$ . What is the diameter of this circle? [Use  $\pi = \frac{22}{7}$ ]

- A 56 cm
- B 24 cm
- C 48 cm
- D 28 cm

**Answer: A**

66. study the given pie-chart and answer the question that follows.

The following pie chart shows the sectors representing the shares of the number of chairs produced in a given year of each of six different brands in terms of the central angles (in degrees) with respect to the total number of chairs produced in that year of all the six brands taken together.



If the total number of chairs produced of these six brands taken together is 7200, then what is the total number of chairs produced of brands B2 and B3 taken together?

- A 1750
- B 2400
- C 2100
- D 1800

**Answer: C**

### SSC GD Constable Previous Papers

67. What is the greatest number which divides 784 and 857 and leaves the remainders 4 and 2, respectively?

- A 3
- B 5
- C 30
- D 15

**Answer: D**

68. In an election between 2 candidates, 5% of the votes were invalid. The winning candidate got 2200 votes and the losing candidate got 1600 votes. The losing candidate got what percentage of the total votes cast?

- A 35%
- B 30%
- C 45%
- D 40%

**Answer:** D

69.  $K_1$  can do a piece of work alone in 4 days,  $K_2$  can do the same work alone in 8 days, while  $K_3$  can do it alone in 32 days. They work together and complete the work, and receive a total of ₹,900 as payment for doing the work. What is the share of the person who received the maximum amount?

- A ₹1,200
- B ₹2,400
- C ₹2,000
- D ₹1,600

**Answer:** B

### SSC CGL Previous Papers (DOWNLOAD PDF)

70. What is the value of  $\frac{7}{11} \div \frac{21}{33} \times \frac{5}{12} + \frac{10}{36} \times \frac{6}{11} \div \frac{18}{33}$ ?

- A  $\frac{29}{35}$
- B  $\frac{25}{36}$
- C  $\frac{28}{39}$
- D  $\frac{24}{41}$

**Answer:** B

71. The length of each side of a rhombus is 10 cm. If the length of one of its diagonals is 16 cm, then what is the area of the rhombus?

- A  $108 \text{ cm}^2$
- B  $112 \text{ cm}^2$
- C  $128 \text{ cm}^2$
- D  $96 \text{ cm}^2$

**Answer:** D

72. While purchasing an item costing ₹600, Rashi had to pay sales tax at 5%. What amount did Rashi have to pay as sales tax?

- A ₹30
- B ₹60

C ₹45

D ₹15

**Answer: A**

## SSC CGL Free Mock Test (Latest Pattern)

73. The mean temperature from Monday to Thursday is  $39.25^{\circ}\text{C}$ . The mean temperature from Thursday to Sunday is  $40.25^{\circ}\text{C}$ . If the sum of the daily temperatures of all the days during the week, from Monday to Sunday, is  $277.5^{\circ}\text{C}$ , then what is the temperature for Thursday?

A  $40.5^{\circ}\text{C}$

B  $38.5^{\circ}\text{C}$

C  $41.5^{\circ}\text{C}$

D  $39.5^{\circ}\text{C}$

**Answer: A**

74. In how many years, The simple interest earned on Rs. 6000 at an interest rate of 5% per annum will be equal to simple interest earned on Rs. 2000 at the rate of 4% per annum for 30 years?

A 6 years

B 12 years

C 20 years

D 8 years

**Answer: D**

75. At a refugee camp, the food supplies were enough to feed 300 refugees for 45 days. But 60 more refugees joined after 15 days. For how many days would the rest of the food supplies last?

A 23 days

B 24 days

C 22 days

D 25 days

**Answer: D**

## SSC CHSL Free Mock Test (Latest Pattern)

### General Awareness

76. Who will be India's next Foreign Secretary as announced in April 2022?

A Harsh Vardhan Shringla

B Dr S Jaishankar

- C Sushma Swaraj
- D Vinay Mohan Kwatra

**Answer: D**

## SSC Stenographer Previous Papers (Latest Pattern)

77. Which of the following is the least literate state in India according to Census 2021?

- A Gujarat
- B Bihar
- C Assam
- D Odisha

**Answer: B**

78. 'Gangaur' is an Indian festival majorly celebrated in \_\_\_\_\_.

- A Rajasthan
- B Himachal Pradesh
- C Tripura
- D Arunachal Pradesh

**Answer: A**

79. Which of the following is categorised under slow mass movement in geomorphic processes?

- A Creep
- B Earthflow
- C Mudflow
- D Landslide

**Answer: A**

## SSC GD Constable Free Mock Test (Latest Pattern)

80. Prarthana Samaj or 'Prayer Society', a religious and social reform, was found in 1863 at \_\_\_\_\_.

- A Pune
- B Delhi
- C Surat
- D Bombay (now Mumbai)

**Answer: D**

81. National Sports Day of India is celebrated on \_\_\_\_\_.

- A 15 August
- B 26 January
- C 30 January
- D 29 August

**Answer: D**

82. Who among the following was a Shaka ruler in India (130-150 AD)?

- A Ashoka
- B Rudradaman
- C Menander
- D Bindusara

**Answer: B**

### SSC MTS Free Mock Test (Latest Pattern)

83. Which part of the Indian Constitution has been drawn from the British Constitution?

- A Fundamental Rights and the Directive Principles of State Policy
- B Principle of Cabinet Government and the relations between the executive and the legislature
- C Appointment of state governors by the centre
- D Federation with a strong centre

**Answer: B**

84. According to the Census 2011, which of the following is the third-lowest state in terms of literacy rate?

- A Bihar
- B Madhya Pradesh
- C Rajasthan
- D Sikkim

**Answer: C**

85. \_\_\_\_\_ is a disease which is transmitted by the Aedes mosquito which lays eggs in water-logged places and multiply over time.

- A Diarrhoea
- B Elephantiasis
- C Dengue
- D Malaria

**Answer: C**

## SSC CPO Free Mock Test (Latest Pattern)

86. Which type of forest receives more than 200 cm of annual rainfall?

- A Temperate mixed forests
- B Taiga
- C Tropical evergreen rain forests
- D Tundra forests

**Answer: C**

87. What was the shape of the Great Bath of Mohenjo Daro?

- A Rectangular
- B Square
- C Elliptical
- D Circular

**Answer: A**

88. BR Ambedkar wrote a 20-page autobiography about his experiences with untouchability which is known as \_\_\_\_\_.

- A All from Memory
- B My Experiments with Silence
- C Waiting for a Visa
- D Courage and Conviction

**Answer: C**

## SSC MTS Free Preparation App

89. Kelucharan Mohapatra is associated with \_\_\_\_\_ dance form of India.

- A Kathak
- B Hiphop
- C Odissi
- D Salsa

**Answer: C**

90. Who was the founder of the reform movement, Arya Samaj?

- A Swami Dayananda Saraswati
- B Raja Ram Mohan Roy

**C** Anand Mohan Bose

**D** MG Ranade

**Answer:** A

91. What does F stand for in the FRBM Act, 2003 of the Indian economy?

**A** Financial

**B** Fiscal

**C** Functional

**D** Freedom

**Answer:** B

### 285 SSC Mocks - Just RS. 249

92. Which of the following laws is applicable to the force of attraction or repulsion between two point charges?

**A** Kirchhoff's Law

**B** Newton's Law of Universal Gravitation

**C** Coulomb's Law

**D** Newton's Laws of Motion

**Answer:** C

93. Which of the following is an example of Phylum Annelida of Animal Kingdom?

**A** Honey bee

**B** Earthworm

**C** Squid

**D** Kangaroo

**Answer:** B

94. Which state government launched the Udaan Project in collaboration with IPE Global which attempts to keep girls in schools through their enrolment at the secondary level while ensuring that the eligible ones among them get their scholarships?

**A** Maharashtra

**B** Assam

**C** Rajasthan

**D** Punjab

**Answer:** C

**SSC Exam Free Videos (Youtube)**

95. The World Health Organisation defines adolescents as individuals in the age-group of \_\_\_\_.

- A 10 to 19 years
- B 8 to 15 years
- C 12 to 16 years
- D 6 to 14 years

**Answer: A**

96. Pandit Shiv Kumar Sharma is associated with \_\_\_\_\_ musical instrument.

- A piano
- B sarod
- C harmonica
- D santoor

**Answer: D**

97. Who is the first Law officer of India?

- A President
- B Governor
- C Prime Minister
- D Attorney-General

**Answer: D**

### SSC Study Material

98. Who among the following rulers was chronicled by Minhaj-i Siraj?

- A Akbar
- B Razia Sultan
- C Babur
- D Ghiyasuddin Tughluq

**Answer: B**

99. For which dance form did Aparna Satheesan win the Prestigious National Nritya Shiromani Award 2022?

- A Kuchipudi
- B Mohiniyattam
- C Kathakali
- D Odissi

**Answer: A**

100. In basketball, what can be the maximum number of points that can be scored in a shot?

- A** 1
- B** 3
- C** 4
- D** 2

**Answer: C**

## **SSC Daily Practice Set**

**SSC MTS Previous Papers (DOWNLOAD PDF)**

**SSC CHSL Previous Papers (DOWNLOAD PDF)**

**SSC Stenographer Previous Papers (Download PDF)**

**SSC GD Constable Previous Papers**

**SSC CGL Previous Papers (DOWNLOAD PDF)**

**SSC CGL Free Mock Test (Latest Pattern)**

**SSC CHSL Free Mock Test (Latest Pattern)**

**SSC Stenographer Previous Papers (Latest Pattern)**

**SSC GD Constable Free Mock Test (Latest Pattern)**

**SSC MTS Free Mock Test (Latest Pattern)**

**SSC CPO Free Mock Test (Latest Pattern)**

**SSC MTS Free Preparation App**

**285 SSC Mocks - Just RS. 249**

**SSC Exam Free Videos (Youtube)**

**SSC Study Material**

**SSC Daily Practice Set**

**SSC GK Free Tests**

**SSC GK Questions**