



All rights reserved. No part of this publication may be reproduced, distributed, or transmitted in any form or by any means, electronic, mechanical, photocopying, recording or otherwise, or stored in any retrieval system of any nature without the permission of cracku.in, application for which shall be made to support@cracku.in

SSC CHSL 7th June 2022 Shift-3

English Language

1. Select the most appropriate option that can substitute the underlined segment in the given sentence. If there is no need to substitute it, select 'No substitution required'.

The train was already left before we reached the platform.

- A the train left
- B train will have left
- C train had already left
- D No substitution required

Answer: C

2. Sentences of a paragraph are given below in jumbled order. Arrange the sentences in the correct order to form a meaningful and coherent paragraph

A. The two children were so like, that without much difficulty it could not be discerned of their proper parents, which was Titus from Gisippus, or Gisippus from Titus.

B. There was in the city of Rome a noble senator, named Fulvius, who sent his son, called Titus, being a child, to the city of Athens, in Greece (which was the fountain of all manner of doctrine), there to learn good letters : and caused him to be hosted with a worshipful mart of that city, called Chremes.

C. This Chremes happened to have also a son named Gisippus, who not only was equal to the said young Titus in years, but also in stature, proportion of body, favour, and colour of visage, countenance and speech

D. These two young gentlemen, as they seemed to be one in form and personage, so shortly after acquaintance, the same nature wrought in their hearts such a mutual affection, and their wills and appetites daily more and more so confederated themselves, that it seemed none other, when their names were declared, but that they had only changed their places, issuing (as I might say) out of the one body, and entering into the other.

- A ADBC
- B BACD
- C BCAD
- D DBCA

Answer: C

3. Select the most appropriate ANTONYM of the given word.

Absurd

- A Amaze
- B Anxious
- C Sensible
- D Ramble

Answer: C

4. Select the most appropriate synonym of the given word.

Quintessential

- A Fantastic

- B** Typical
- C** Initial
- D** Charming

Answer: B

SSC CHSL Free Mock Test

5. Select the option that expresses the given sentence in passive voice.
Their behaviour vexes us.

- A** We had been vexed by their behaviour.
- B** We are vexed by their behaviour.
- C** We have been vexed by their behaviour.
- D** We are being vexed by their behaviour

Answer: B

6. Select the most appropriate meaning of the given idiom.
To bite the bullet

- A** To reject doing something difficult or unpleasant
- B** To be upset or annoyed
- C** To be brave in a difficult situation
- D** To state your opinion openly

Answer: C

7. Select the INCORRECTLY spelt word.

- A** Succesion
- B** Assassinate
- C** Complacent
- D** Aquarium

Answer: A

SSC CHSL Prevoius Papers (DOWNLOAD PDF)

8. Complete the sentence with an appropriate ANTONYM of the word mentioned in the bracket.
Many Bollywood movies show _____ (cheerful) stories nowadays.

- A** chirpy
- B** gloomy
- C** radiant

D jaunty

Answer: B

9. Select the most appropriate **ANTONYM** of the word given in bold in the following sentence.
Her father was quick to detect her concealed emotion.

A annoyed

B disclosed

C arrogant

D excited

Answer: B

10. Select the most appropriate **synonym** of the word given in bold in the following sentence.
The patient complained of giddiness after surgery.

A opponent

B unsteadiness

C enthusiasm

D pride

Answer: B

SSC CGL Previous Papers (DOWNLOAD PDF)

11. Spot the error in the given sentence and select the correct sentence from the options given.
When the villagers put up a firm resistance to the fearsome bandit with all their might, he ultimately fled the spot

- A** When the villagers put up a firm resistance to the fearsome bandit with all their might, he ultimately flew the spot.
- B** When the villagers putted up a firm resistance to the fearsome bandit with all their might, he ultimately fled the spot.
- C** When the villagers put up a firm resistance to the fearsome bandit with all their might, he ultimately flown the spot.
- D** When the villagers put up a firm resistance to the fearsome bandit with all their might, he ultimately fled the spot.

Answer: D

12. Select the option that can be used as a one-word substitute for the given group of words.
The art of beautiful handwriting

A Calligraphy

B Monography

C Epigraphy

D Catastrophe

Answer: A

13. Select the most appropriate option that can substitute the underlined segment in the given sentence.
I can see lots of colours on the picture.

A over
B at
C for
D in

Answer: D

SSC CGL Free Mock Test (Latest Pattern)

14. Select the option that can be used as a one-word substitute for the given group of words.
The work inscribed on the tomb in the memory of the person

A Epigraph
B Excerpt
C Euphoria
D Epitaph

Answer: D

15. Select the option that expresses the given sentence in active voice.
The meal is being prepared by the chef.

A The chef is preparing the meal.
B The chef will prepare the meal.
C The chef did prepare the meal.
D The chef was preparing the meal.

Answer: A

16. In the following passage, some words have been deleted. Read the passage carefully and select the most appropriate option to fill in each blank.

The app gets Larry's parents involved in the learning and improvement process, sending them advice about Larry's behaviours and progress, and recommending motivational _____ they might undertake that are _____ to Larry's situation and the program's _____ about his attitudes and behaviours.

A intermissions, directed, injunctions
B interpolations, disrupted, inventions
C interventions, targeted, inferences
D interruptions, disillusioned, invasions

Answer: C

SSC CHSL Important Questions and Answers (Download PDF)

17. Select the most appropriate option to substitute the underline segment in the given sentence.
I cannot sit up with this sort of insult in office.

- A go up with
- B put up with
- C get up with
- D do up with

Answer: B

18. Select the correct homonym from the given options to fill in the blank.
The athlete's _____ was badly injured due to a fall on the track.

- A toe
- B toad
- C tow
- D to

Answer: A

19. In the following questions a statement has been given with highlighted text. Select the options that can replace the text with correct idiom or phrase.

He is known for talking too frankly.

- A Lose one's marbles
- B Go the extra mile
- C Snug as a bug in a rug
- D Call a spade a spade

Answer: D

SSC CHSL Study Material

20. Select the most appropriate option to fill in the blank.
She swallowed _____ her breakfast in a hurry.

- A in
- B up
- C into
- D down

Answer: D

Instructions [21 - 25]

In the following passage, some words have been deleted. Read the passage carefully and select the most appropriate option to fill in each blank.

One of the most devastating periods in European history came (1)_____ the fourteenth century, with the epidemic of bubonic plague,

also known as the 'Great Plague' and later dubbed the 'Black Death'. At the time of its first pandemic, the bubonic plague was a terrifying disease, killing indiscriminately and (2)_____ cities and towns devastated in its wake. It appeared to spread just by touching clothes and people who (3)_____ healthy one day might be dead the next. Faced with such a mysterious and horrifying illness, many believed that this was a divine (4)_____ for their sins. Researchers in Hong Kong at the end of the nineteenth century discovered that the disease is caused by the bacteria 'Yersinia Pestis'. Modern (5)_____ practices and medicine have greatly subdued the impact of the bubonic plague, but have never completely eliminated it.

21. Select the most appropriate option to fill in blank number 1.

- A by
- B at
- C through
- D during

Answer: D

22. Select the most appropriate option to fill in blank number 2.

- A settling
- B reckoning
- C keeping
- D leaving

Answer: D

SSC CHSL Free App

23. Select the most appropriate option to fill in blank number 3.

- A departed
- B seemed
- C became
- D kept

Answer: B

24. Select the most appropriate option to fill in blank number 4.

- A order
- B accolade
- C oracle
- D punishment

Answer: D

25. Select the most appropriate option to fill in blank number 5.

- A cultural

- B unhygienic
- C ongoing
- D sanitary

Answer: D

Daily Free SSC Practice Set

General Intelligence

26. Select the option that is related to the fifth term in the same way as the second term is related to the first term and the fourth term is related to the third term.

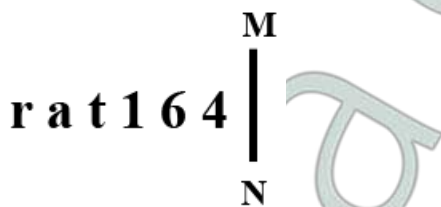
ANOXIC : ONACIX :: EQUITY : UQEYTI :: REFUND : ?

- A FERDUN
- B UNDFER
- C DREFND
- D FERDNU

Answer: D

Free SSC Study Material (18,000 Solved Questions)

27. Select the correct mirror image of the given combination when the mirror is placed at MN as shown.



- A 4 9 1 1 6 1
- B 4 9 1 1 6 1
- C 4 9 1 1 6 1
- D 4 9 1 1 6 1

Answer: C

28. Select the option that is related to the fifth number in the same way as the second number is related to the first number and the fourth number is related to the third number.

3 : 19 :: 2 : 7 :: 5 : ?

- A 69
- B 51

C 59

D 61

Answer: D

29. Study the given pattern carefully and select the number that can replace the question mark (?) in it.

First row: 7, 9, 39

Second row: 4, 8, 28

Third row: 6, 7, ?

(NOTE: Operations should be performed on the whole numbers, without breaking down the number into its constituent digits. For example, 13 - Operations on 13 such as adding/deleting/multiplying etc. to 13 can be performed. Breaking down 13 into 1 and 3 and then performing mathematical operations on 1 and 3 is not allowed.)

A 32

B 38

C 40

D 37

Answer: A

1500+ Very Important Free SSC Solved Questions

30. Which of the following numbers will replace the question mark (?) in the given series?

14, 28, 31, ?, 129, 774

A 124

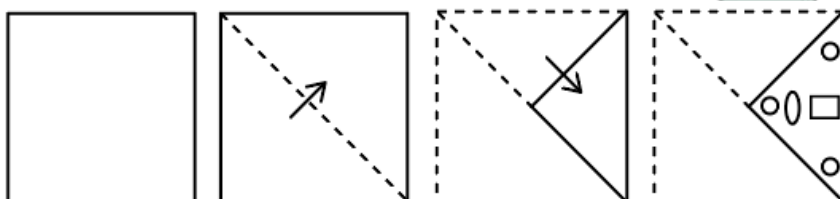
B 117

C 119

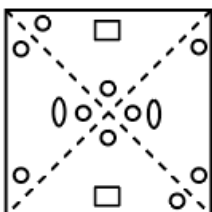
D 106

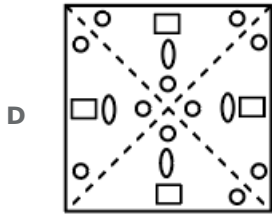
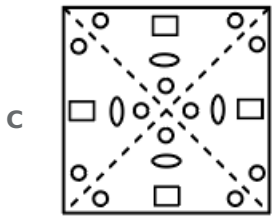
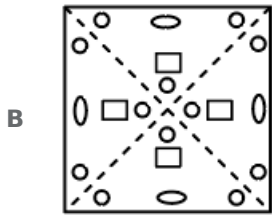
Answer: A

31. A paper is folded and cut as shown. How will it appear when unfolded?



A





Answer: C

32. Which of the following numbers will replace the question mark (?) in the given series?
249, 255, 238, ?, 227, 277

- A** 241
- B** 257
- C** 266
- D** 229

Answer: C

SSC Exam Update Videos & Free Study Material (YouTube Channel)

33. Which letter-cluster will replace the question mark (?) in the following series?
UYBD, ZDGI, ?, JNQS

- A** DHKM
- B** FJMO
- C** CGJL
- D** EILN

Answer: D

34. Which letter-cluster will replace the question mark (?) to complete the given series?
IZDK, OHVO, UPNS, AXFW, ?

- A** EEYZ
- B** EFXA
- C** EEXZ

D EEYA

Answer: B

35. In a certain code language, 'PEN' is written as 'OCK', and 'ZEN' is written as 'YCK'.
How will 'TON' be written in that language?

A RNJ

B SNK

C SMK

D RMK

Answer: C

Latest Job Updates on Telegram - Join here

36. Select the option that represents the letters that, when sequentially placed from left to right in the blanks below, will complete the letter series.

C _ _ r E _ t C U r _ _ nt C _ r _ Ent

A ErnrEUr

B UrUrEUr

C UrnrUUr

D UrnrEUr

Answer: D

37. Select the option that represents the correct order of the given words as they would appear in an English dictionary.

- 1.Sarcastic
- 2.Satisfaction
- 3.Salutation
- 4.Sanctions
- 5.Sacrifice

A 3,5,4,1,2

B 5,3,4,1,2

C 4,5,3,1,2

D 4,5,2,1,3

Answer: B

38. Select the correct combination of mathematical signs to replace the * signs and to balance the given equation.

$45 * 17 * 3 * 41 * 81 * 9 * 56$

A +, =, -, ×, ÷, +

B +, -, =, ×, +, -

C =, -, ×, +, -, +

D $=, \times, +, +, \div, -$

Answer: D

Join SSC Daily Quiz Telegram Group

39. Select the correct combination of mathematical signs to sequentially replace the * signs and to balance the given equation.
 $65*50*5*2*4*63$

A $\div, -, \times, +, =$

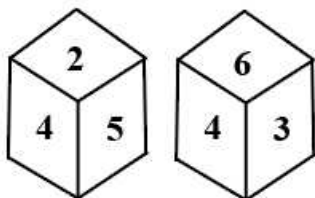
B $+, \times, \div, -, =$

C $+, \times, -, \div, =$

D $-, \div, +, \times, =$

Answer: D

40. Two different positions of the same dice are shown, the six faces of which are numbered from 1 to 6. Select the number that will be on the face opposite to the one showing '4'.



A 2

B 5

C 1

D 3

Answer: C

41. In a certain code language, 'KITCHEN' is written as NJUDIFK' and 'RESPECT' is written as 'TFTQFDR'. How will 'WELCOME' be written in that language?

A EFMDQNE

B EFMDPNW

C ZLEOCEW

D ZDMBONW

Answer: B

42. The second number in the given number pairs is obtained by performing certain mathematical operation(s) on the first number. The same operation(s) are followed in all the number pairs except one. Find that odd number pair.

A 14 : 512

B 22 : 1728

C 46 : 12167

D 38 : 8000

Answer: C

43. Select the correct mirror image of the given combination when the mirror is placed at XY as shown.

5 T 3 W 1 Z
X
|
Y

A Σ I W ϵ T \bar{z}

B \bar{z} T ϵ W I Σ

C Σ I ϵ M I Z

D Z I M ϵ I Σ

Answer: A

44. Select the correct mirror image of the given combination when the mirror is placed at MN as shown

j r q 4 2 9
M
|
N

A \bar{q} Σ \bar{r} p r i

B \bar{q} Σ \bar{r} b . i

C 6 \bar{r} \bar{q} b . i

D \bar{q} Σ \bar{r} b r i

Answer: A

SSC CHSL Free Mock Test

45. Select the correct combination of mathematical signs to sequentially replace the * signs and to balance the given equation.
 $93*65*3*56*14*146$

A $\times, +, -, \div, =$

B $+, -, \div, \times, =$

C $-, +, \times, \div, =$

D $+, -, \times, \div, =$

Answer: D

46. The second number in the given number-pairs is obtained by performing certain mathematical operation(s) on the first number. The same operation(s) are followed in all the number-pairs EXCEPT one. Find that odd number-pair.

A 64 : 6

B 25 : 2

C 225 : 12

D 169 : 10

Answer: A

47. If 28 February 2020 was Friday, then what was the day of the week on 30 December 2015?

A Wednesday

B Tuesday

C Sunday

D Monday

Answer: A

SSC CHSL Previous Papers ([DOWNLOAD PDF](#))

48. Select the correct mirror image of the given combination when the mirror is placed at MN as shown below.

a g 2 6 e r

M
|
N

A r e 6 2 g a

B r e 6 2 g a

C r e 9 2 g a

D r e 6 7 g a

Answer: A

49. Which of the following numbers will replace the question mark (?) in the given series?

134, 186, 238, 290, 342, ?

- A 370
- B 386
- C 394
- D 378

Answer: C

50. Seven friends S, T, U, V, W, X and Y, each has a different height. W is taller than X but shorter than V. Only three people are taller than V. T is taller than U but shorter than S. Y is the shortest among all. How many persons are taller than U?

- A 1
- B 5
- C 2
- D 4

Answer: C

SSC CGL Previous Papers (DOWNLOAD PDF)

Quantitative Aptitude

51. In an examination, Gopal secured 15% more marks than Asha, and Asha secured 10% more marks than Sachin. How much per cent more marks did Gopal secure than Sachin?

- A 25.5%
- B 26.5%
- C 25%
- D 24.5%

Answer: B

SSC CGL Free Mock Test (Latest Pattern)

52. Pranjal takes twice as much time as Vikram or thrice as much time as Ashwin to finish a piece of work. Working together, they can finish the work in 6 days. Vikram can do the work alone in:

- A 18 days
- B 9 days
- C 15 days
- D 12 days

Answer: A

53. If 60% of a number is equal to three-fourth of another number, what is the ratio of the first number to the second number?

- A 3 : 7

B 2 : 5

C 7 : 3

D 5 : 4

Answer: D

54. It is given that the average of 19 numbers is 8.5. If one number with value 63 was entered incorrectly as 25, then the corrected average is:

A 9.5

B 11.5

C 7.5

D 10.5

Answer: D

SSC CHSL Important Questions and Answers (Download PDF)

55. The volume of a sphere is 38808 cm^3 . What is its surface area (in cm^2)?
(Take $\pi = \frac{22}{7}$)

A 6655

B 5544

C 5040

D 5599

Answer: B

56. Find the value of $(625)^{0.07} \times (625)^{0.18}$

A 25

B 625

C 5

D 125

Answer: C

57. Which of the following numbers is divisible by 360?

A 171720

B 176600

C 166200

D 171080

Answer: A

SSC CHSL Study Material

58. Under a sale offer, Suresh was offered 20% discount on the part of the marked price that was paid in cash, but was charged 0.5% on the part of the marked price paid through a credit card. If Suresh paid 40% of the marked price in cash and the rest through a credit card, what percentage of the marked price was his total final payment?

- A 93.2%
- B 92.6%
- C 92.8%
- D 92.3%

Answer: D

59. A woman can row 36 km downstream in 4 hours and 49 km upstream in 7 hours. What is the speed of the current?

- A 2 km/h
- B 1.5 km/h
- C 3 km/h
- D 1 km/h

Answer: D

60. The marked price of a cell phone is ₹23,000. The shopkeeper offers successive discounts of 14% and 16%. How much, approximately, does a customer have to pay?

- A ₹16,615
- B ₹16,100
- C ₹16,425
- D ₹16,585

Answer: A

SSC CHSL Free App

61. The expenses of a family on rice, vegetables and cooking oil are in the ratio 9 : 11 : 5. If the prices of these items increases by 10%, 20% and 30%, respectively, then the total expenses of the family on these items will increase by:

- A 14.8%
- B 19.2%
- C 18.4%
- D 16.2%

Answer: C

62. A library has an average of 330 visitors on Sundays and 240 on the other days. Find the average of the number of visitors per day in a month of 30 days, beginning with a Saturday.

- A 260
- B 255
- C 270
- D 265

Answer: B

63. Simplify $(226+506) \div 4 + 500$.

- A 506
- B 444
- C 501
- D 502

Answer: A

Daily Free SSC Practice Set

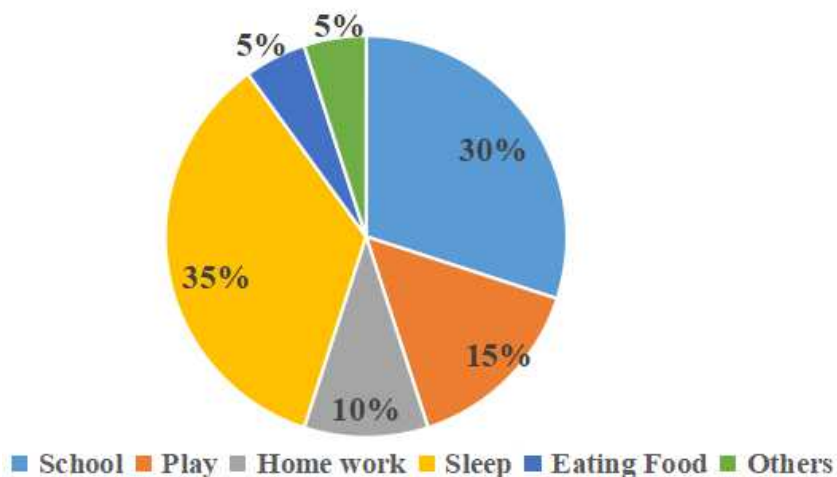
64. If $x + y + z = 0$, then find the value of $\frac{x^2}{x^2-yz} + \frac{y^2}{y^2-zx} + \frac{z^2}{z^2-xy}$

- A 2
- B 1
- C 3
- D 0

Answer: A

65. The pie-chart below represents the number of hours as percent of 24 hours of a day, spent on different activities by a student, Study the pie chart and answer the question that follows.

Number of hours as percent of 24 hours of a day, spent on different activities by a student



If the pie-chart is a visual representation of the number of hours spent on different activities by a student during a day, then the student spends the maximum number of hours in a day:

- A doing homework
- B playing
- C sleeping
- D at school

Answer: C

66. The value of $\sin 35^\circ \cos 55^\circ + \cos 35^\circ \sin 55^\circ$ is:

- A 0
- B $\frac{3}{4}$
- C $\frac{1}{2}$
- D 1

Answer: D

Free SSC Study Material (18,000 Solved Questions)

67. If $r + \frac{1}{r} = 11$, then the value of $\frac{r^3 + \frac{1}{r}}{r^2 - r + 1}$ is _____.

- A $\frac{119}{10}$
- B $\frac{10}{119}$
- C $\frac{19}{10}$
- D $\frac{10}{109}$

Answer: A

68. Three smaller cubes with sides of 3, 4, and 5 cm are melted together to form a large cube. What is the ratio of the smaller cubes' total surface area to the larger cube's total surface area?

- A 16 : 21
- B 5 : 4
- C 25 : 18
- D 3 : 5

Answer: C

69. Rajesh purchased a machine for ₹5,000 and paid ₹250 for its transportation. If he sells the machine for ₹5,075, what is his percentage profit or loss? (Correct to two decimal places)

- A Profit of 3.33%
- B Profit of 6.66%

- C** Loss of 3.33%
- D** Loss of 6.66%

Answer: C

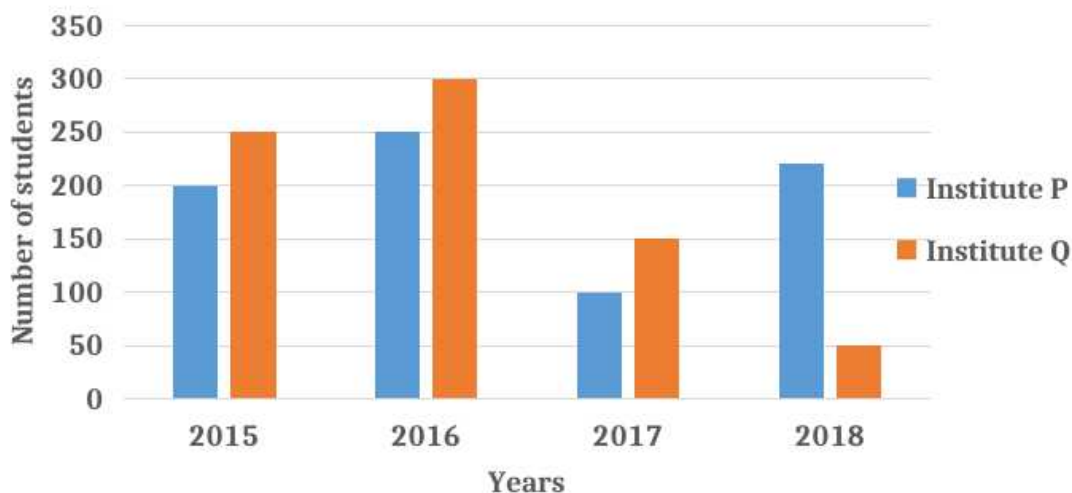
1500+ Very Important Free SSC Solved Questions

70. The effective annual rate of interest, corresponding to a nominal rate of 6% per annum, compounded half-yearly, is:

- A** 0.0608
- B** 0.0609
- C** 0.0606
- D** 0.0607

Answer: B

71. The given graph shows the number of students who passed SSC in two institutes (P and Q) during four years.



What is the difference between the average number of students who passed in institute P in 2015 and 2016 and that in institute Q in 2017 and 2018?

- A** 200
- B** 275
- C** 125
- D** 150

Answer: C

72. An arc on a circle that is 18 cm long, subtends a 28.8° angle at the centre. What is the circumference of the circle?

- A** 180 cm
- B** 216 cm
- C** 225 cm
- D** 240 cm

Answer: C

SSC Exam Update Videos & Free Study Material (YouTube Channel)

73. The following table gives data about literacy rates of four different states obtained during four censuses in the country.

States \ Years	Karnataka	Gujarat	Andhra Pradesh	Kerala
2011	75.6	79.3	67.7	93.9
2001	66.6	69.1	60.5	90.9
1991	56.0	61.3	44.1	89.8
1981	46.2	44.9	35.7	78.9

Which state has the lowest literacy rates as per all the four censuses from which data is provided

- A Gujarat
- B Andhra Pradesh
- C Karnataka
- D Kerala

Answer: B

74. Find the volume of the cylinder circumscribing a sphere with a diameter of 14 cm. (Use $\pi = \frac{22}{7}$)

- A 2156 cm^3
- B 2158 cm^3
- C 2155 cm^3
- D 2157 cm^3

Answer: A

75. A sum of money was invested at 10% interest per year, compounded half-yearly for 18 months. If the amount payable on maturity was ₹83,349, what was the sum invested?

- A ₹80,000
- B ₹68,000
- C ₹75,000
- D ₹72,000

Answer: D

Latest Job Updates on Telegram - Join here

General Awareness

76. Alamel Velli is recognised as a classical dancer of _____ dance form.

- A Manipuri
- B Sattriya
- C Kuchipudi
- D Bharatanatyam

Answer: D

Join SSC Daily Quiz Telegram Group

77. Identify the alga that is NOT a marine algae.

- A Sargassum
- B Porphyra
- C Chlorella
- D Laminaria

Answer: C

78. In the given main characteristics of farming of India, which is the characteristic of primitive subsistence farming?

- A Slash and burn
- B Chemical fertilisers
- C Insecticides and pesticides
- D High yielding variety seeds

Answer: A

79. Match column A with column B.

Column-A	Column-B
i. Peptidoglycan	a. Cell wall of plants
ii. Pectin	b. Bacterial cell wall
iii. Chitin	c. Cell wall of fruits
iv. Cellulose	d. Insect cell wall

- A i-b, ii-a, iii-d, iv-c
- B i-b, ii-a, iii-c, iv-d
- C i-b, ii-c, iii-d, iv-a
- D i-a, ii-b, iii-c, iv-d

Answer: C

80. Who among the following personalities, also associated with poetry and Music has been conferred with the Noble Prize?

- A** Rabindra Nath Tagore
- B** Dwijendra Lal Ray
- C** Bankim Chandra Chatterjee
- D** Purandar Das

Answer: A

81. 'The Palace of Illusions' is an award-winning novel that retells the Hindu mythological epic Mahabharata from the perspective of Draupadi, it's lead female character. Who among the following is the author of this novel?

- A** Kamala Markandaya
- B** Anita Desai
- C** Chitra Banerjee Divakaruni
- D** Arundhati Roy

Answer: C

82. Who among the following won the 'Dronacharya Award' (Regular Category) 2021 in Athletics discipline?

- A** Harbans Singh
- B** V R Beedu
- C** Radhakrishnan Nair P
- D** Purushotham Rai

Answer: C

SSC CHSL Free Mock Test

83. Which singer, music director was awarded with the Padma Vibhushan posthumously in 2021?

- A** Sudarshan Sahoo
- B** Shravan Kumar Rathod
- C** SP Balasubrahmanyam
- D** Jagdish Chaudhary

Answer: C

84. Identify the shallowest part of the ocean.

- A** Continental shelf
- B** Continental slope
- C** Deep sea plains
- D** Trenches

Answer: A

85. What was India's ranking in Paralympic 2020 medal tally?

- A 20
- B 24
- C 13
- D 10

Answer: B

SSC CHSL Previous Papers (DOWNLOAD PDF)

86. Which of the following dance forms is performed by Sonal Mansingh?

- A Bharatanatyam and Mohiniyattam
- B Bharatanatyam and Odissi
- C Bharatanatyam and Kathak
- D Kathak and Odissi

Answer: B

87. Name the classical dancer who is associated with the Kuchipudi classical dance.

- A Vempati Chinna Satyam
- B A Lakshmana Swamy
- C Sharmila Biswas
- D Sanchita Bhattacharya

Answer: A

88. Who among the following is an outstanding player to have mastered the surbahar instrument?

- A Ustad Imrat Khan
- B Allaudin Khan
- C Ali Akbar Khan
- D Abdul Karim Khan

Answer: A

SSC CGL Previous Papers (DOWNLOAD PDF)

89. Part III of the Constitution of India deals with:

- A Fundamental Duties
- B Fundamental Rights

- C** Citizenship
- D** Directive Principles of State Policy

Answer: B

90. Which of the following pairs of authors and autobiographies is CORRECTLY matched?

- A** Jahangir - Baburnama
- B** Satyajit Ray - Living Shadows
- C** JB Kripalani - My Times
- D** Aribam Syam Sharma - Jakhan Choto Chilam

Answer: C

91. In November 2021 at Zonal Council Meet, Chief Minister N Rangaswamy made the statement regarding which union territory that upgrading the status of the Union Territory is critical to its survival?

- A** Andaman and Nicobar Islands
- B** Dadra & Nagar Haveli
- C** Puducherry
- D** Lakshadweep

Answer: C

SSC CGL Free Mock Test (Latest Pattern)

92. Which of the following leucoplasts store oil and fat?

- A** Aleuroplasts
- B** Plastids
- C** Elaioplasts
- D** Amyloplasts

Answer: C

93. _____ and _____ are called as narrow and broad money, respectively, in the context of money supply in an economy.

- A** M1 and M3
- B** M1 and M2
- C** M0 and M3
- D** M3 and M4

Answer: A

94. Who was appointed as the Chairman of ISRO in January 2022?

- A** K Radhakrishnan
- B** K Sivan
- C** S Somanath
- D** G Madhavan

Answer: C

SSC CHSL Important Questions and Answers (Download PDF)

95. Which of the following is the Galilean moon that was observed in 1610 by the Italian astronomer Galileo Galilei using a homemade telescope?

- A** Namaka
- B** Phobos
- C** Titan
- D** Ganymede

Answer: D

96. Famous playback singer Kishore Kumar was born in 1929 in _____.

- A** Bhopal
- B** Calcutta
- C** Delhi
- D** Khandwa

Answer: D

97. The Amazon River, considered the longest river in the world, with a length of 6,400 km, is located in the northern part of _____.

- A** North America
- B** Australia
- C** Africa
- D** South America

Answer: D

SSC CHSL Study Material

98. Australia won the 2020 ICC Women's T20 World Cup Cricket by defeating _____.

- A** India
- B** Sri Lanka

C Pakistan

D New Zealand

Answer: A

99. 'Finding My Way' is a famous autobiography written by which of the following Gond artists of India with the help of Mukul S Anand?

A Venkat Raman Singh Shyam

B Dhavat Singh Uikey

C Bhajju Shyam

D Jangrah Singh Shyam

Answer: A

100. Maguni Charan Das was awarded Padma Shri for his contribution to which of the following forms of dances?

A Gotipua

B Chhau

C Jhumair

D Kharia

Answer: A

SSC CHSL Free App

SSC CHSL Free Mock Test

SSC CHSL Previous Papers (DOWNLOAD PDF)

SSC CGL Previous Papers (DOWNLOAD PDF)

SSC CGL Free Mock Test (Latest Pattern)

SSC CHSL Important Questions and Answers (Download PDF)

SSC CHSL Study Material

SSC CHSL Free App

Daily Free SSC Practice Set

Free SSC Study Material (18,000 Solved Questions)

1500+ Very Important Free SSC Solved Questions

SSC Exam Update Videos & Free Study Material (YouTube Channel)

Latest Job Updates on Telegram - Join here

Join SSC Daily Quiz Telegram Group