



All rights reserved. No part of this publication may be reproduced, distributed, or transmitted in any form or by any means, electronic, mechanical, photocopying, recording or otherwise, or stored in any retrieval system of any nature without the permission of cracku.in, application for which shall be made to support@cracku.in

SSC CHSL 9th June 2022 Shift-2

English Language

1. Select the most appropriate **ANTONYM** of the underlined word in the following sentence.

You have made only perfunctory attempts to understand me!

- A** adamant
- B** careful
- C** basic
- D** casual

Answer: B

2. Select the most appropriate meaning of the given idiom.

Be under a cloud

- A** To be very happy
- B** To be gloomy
- C** To be untrustworthy
- D** To have a hidden talent

Answer: C

3. Select the most appropriate synonym of the given word.

Imprisonment

- A** Incapacitation
- B** Incarceration
- C** Inarch
- D** Imputation

Answer: B

4. Select the most appropriate meaning of the given idiom.

Hit the sack

- A** Miss the mark
- B** Confirm the target
- C** Complete the assignment
- D** Go to sleep

Answer: D

5. Select the INCORRECTLY spelt word.

- A Hallucinate
- B Hiatus
- C Sacrilage
- D Launderette

Answer: C

6. Select the most appropriate meaning of the given idiom.
In queer street

- A Among scoundrels
- B In prison
- C Lost your way
- D In debt

Answer: D

7. The following sentence has been split into four segments. Identify the segment that contains a grammatical error.
When we got / to the train station, / the Rajdhani Express / had already been leaving.

- A the Rajdhani Express
- B When we got
- C had already been leaving
- D to the train station

Answer: C

SSC CHSL Previous Papers (DOWNLOAD PDF)

8. The following sentence has been split into four segments. Identify the segment that contains a grammatical error.
The students / and the teachers / worked hardly / to make the event a success.

- A and their teachers
- B worked hardly
- C The students
- D to make the event a success

Answer: B

9. Select the option that will improve the underlined part of the given sentence.
I guessed her feelings when she started crying.

- A estimated her emotions
- B estimated her rejoinders

C estimated her reactions

D estimated her ripostes

Answer: A

10. Select the option that expresses the given sentence in passive voice.

His friends arranged for the ambulance and took him immediately to the hospital.

A His friends would have arranged for the ambulance and taken him immediately to the hospital.

B His friends were arranged for the ambulance and taken him immediately to the hospital.

C The ambulance arranged for his friends and took him immediately to the hospital.

D The ambulance was arranged for by his friends and he was immediately taken to the hospital.

Answer: D

SSC CGL Previous Papers (DOWNLOAD PDF)

11. Complete the collocation.

When we met first it was very difficult to _____ the ice.

A smash

B burst

C break

D shatter

Answer: C

12. Select the most appropriate option to fill in the blank.

Tagore and Gandhi were undoubtedly the two outstanding and _____ figures of India in the first half of twentieth century.

A dominating

B activating

C resuming

D appreciating

Answer: A

13. Select the option that can be used as a one-word substitute for the underlined group of words.

Raman is finding it difficult to adjust as he has come to a different country from his own country for settling

A Pilgrim

B Immigrant

C Globetrotter

D Gypsy

Answer: B

SSC CGL Free Mock Test (Latest Pattern)

14. Select the INCORRECTLY spelt word.

- A Effervescent
- B Unorganised
- C Efficient
- D Scaleable

Answer: D

15. Sentences of a paragraph are given below in jumbled order. Arrange the sentences in the correct order to form a meaningful and coherent paragraph.

A. They also resolved to impose restrictions on the Russian central bank's ability to access and deploy the country's 'war chest' of an estimated \$630 billion in foreign exchange reserves.

B. Saturday's announcement by the US, the UK and European allies, including France and Germany, of a raft of 'further restrictive economic measures' to increase the costs on Russia for its invasion of Ukraine has just raised the risks of a more widespread economic fallout from this war.

C. The immediate impact of these moves on Russia's economy and financial markets have manifested in a sharp depreciation in the value of the Rouble.

D. With a view to further isolating Russia from the international financial system, the Western allies decided to block 'selected' Russian banks from the SWIFT messaging system that banks and financial institutions use to validate and complete international payment transactions.

- A BDAC
- B BACD
- C ABCD
- D DBAC

Answer: A

16. Select the most appropriate ANTONYM of the given word.
Defile

- A Regularize
- B Labor
- C Particularize
- D Purify

Answer: D

SSC CHSL Important Questions and Answers (Download PDF)

17. Select the most appropriate synonym of the given word.
Exorcise

- A Invent
- B Expel

C Introduce

D Expect

Answer: B

18. Select the most appropriate option that can substitute the underlined segment in the given sentence.
Who is talking in the phone?

A for

B on

C with

D at

Answer: B

19. Select the most appropriate ANTONYM of the underlined word in the following sentence.
You can sleep here but this bed is squalid and wet.

A disorderly

B uncomfortable

C clean

D painful

Answer: C

SSC CHSL Study Material

20. Select the INCORRECTLY spelt word.

A Loquacity

B Athiest

C Intrepid

D Affluence

Answer: B

Instructions [21 - 25]

In the following passage, some words have been deleted. Read the passage carefully and select the most appropriate option to fill in each blank.

The Union Budget, 2018-19, has proposed to treat school education holistically without (1) _____ from pre-nursery to Class 1b: Samagra Shiksha - an overarching programme for the school education sector extending from pre-school to class 12 has been, therefore, (2) _____ with the broader goal of improving school effectiveness measured in terms of equal opportunities (3) _____ schooling and equitable learning outcomes. The Goal SDG-4.1 states that, "By 2030, ensure that all boys and girls complete free, equitable and quality primary and secondary education (4) _____ to relevant and effective learning outcomes". Further the SDG 4.5 states that, "By 2030, eliminate gender (5) _____ in education and ensure equal access to all levels of education and vocational training for the vulnerable, including persons with disabilities, indigenous peoples and children in vulnerable situations".

21. Select the most appropriate option to fill blank 1.

- A attachment
- B segmentation
- C accord
- D agreement

Answer: B

22. Select the most appropriate option to fill blank 2.

- A prepared
- B prepares
- C preparing
- D prepare

Answer: A

SSC CHSL Free App

23. Select the most appropriate option to fill blank 3.

- A for
- B to
- C on
- D at

Answer: A

24. Select the most appropriate option to fill blank 4.

- A to be leading
- B leading
- C leads
- D lead

Answer: B

25. Select the most appropriate option to fill blank 5.

- A agreement
- B harmony
- C similarity
- D disparities

Answer: D

Daily Free SSC Practice Set

General Intelligence

26. Two statements are given followed by two conclusions numbered I and II. Assuming the statements to be true, even if they seem to be at variance with commonly known facts, decide which of the conclusions logically follow(s) from the statements.

Statements:

All sparrows are peacocks.

Some peacocks are birds.

Conclusions:

I. All birds are sparrow.

II. Some sparrows are not birds.

- A** Both conclusions I and II follow
B Only conclusion I follows
C Neither conclusion I nor II follows
D Only conclusion II follows

Answer: C

Free SSC Study Material (18,000 Solved Questions)

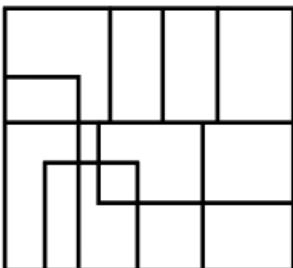
27. Select the option that is related to the fifth term in the same way as the second term is related to the first term and fourth term is related to third term.

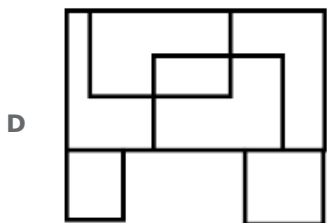
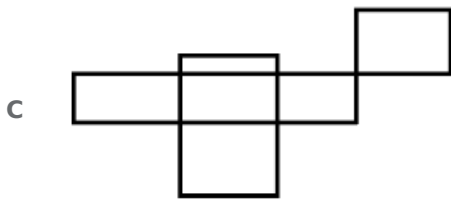
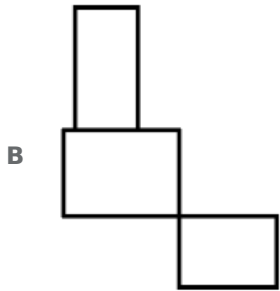
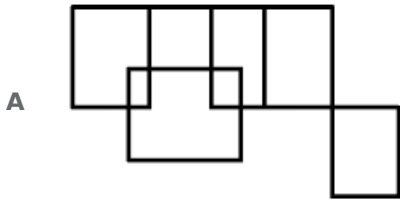
PLANK : RMDOM :: TABLE : VBEMG :: ZEBRA : ?

- A** BEFSC
B CFESC
C BFESC
D CEFSC

Answer: C

28. Select the option that embedded in the given figure as its part (rotation is NOT allowed).





Answer: B

29. Select the option that is related to the fifth number in the same way as the second number is related to the first number and the fourth number is related to the third number.
 $34 : 169 :: 42 : 209 :: 28 : ?$

- A** 119
B 139
C 109
D 129

Answer: B

1500+ Very Important Free SSC Solved Questions

30. Select the option that is related to the third term in the same way as the second term is related to the first term and the sixth term is related to the fifth term.
 $8 : 48 :: 19 : ? :: 16 : 112$

- A** 136
B 142
C 145

D 138

Answer: A

31. If 31 August 2000 was Friday, then what was the day of the week on 31 August 2009?

A Monday

B Tuesday

C Wednesday

D Friday

Answer: B

32. Select the correct combination of mathematical signs to replace the * signs and to balance the given equation.

$$14 * 11 * 97 * 67 * 10$$

A +, -, =, ×

B ×, -, =, +

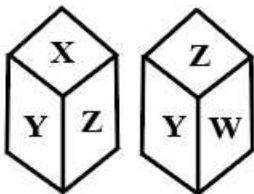
C ×, -, =, -

D +, =, -, ×

Answer: C

SSC Exam Update Videos & Free Study Material (YouTube Channel)

33. Two different positions of the same dice are shown, the six faces of which are marked from U to Z. Select the letter that will be on the face opposite to the one showing 'X'.



A V

B Z

C Y

D W

Answer: D

34. Select the correct mirror image of the given combination when the mirror is placed at MN as shown.

p r 7 t 1 4
M ————— N

A p r Δ t J †

B b r Δ t J †

C b r ∠ t J †

D b r † ∠ J †

Answer: B

35. Study the given pattern carefully and select the number that can replace the question mark (?) in it.

First row: 58, -28, -90

Second row: -17, 21, -12

Third row: -8, -7, ?

(NOTE: Operations should be performed on the whole numbers, without breaking down the number into its constituent digits. For example, 13 - Operations on 13 such as adding/deleting/multiplying etc. to 13 can be performed. Breaking down 13 into 1 and 3 and then performing mathematical operations on 1 and 3 is not allowed.)

A 38

B 45

C -40

D -35

Answer: B

Latest Job Updates on Telegram - Join here

36. The second number in the given number pairs is obtained by performing certain mathematical operation(s) on the first number. The same operation(s) are followed in all the number pairs except one. Find that odd number pair.

A 4328 : 8324

B 2437 : 7342

C 3569 : 9653

D 1786 : 6871

Answer: A

37. In a certain code language, 'you can do' is written as 'mat hat pat', 'They can work' is written as 'rat pat ant' and 'they do think' is written as 'ant hat cat'. How will 'Think' be written in that language?

A mat

B pat

C cat

D ant

Answer: C

38. In a certain code language, 'PIZZA' is written as 'PZZIA' and 'CHEESE' is written as 'CSEEHE'. How will 'PASTA' be written in that language?

A PTSTA

B PTASA


C PSTAA

D PTSAA

Answer: D

Join SSC Daily Quiz Telegram Group

39. Two different positions of the same dice are shown, the six faces of which are marked as P, Q, R, S, T, U. Select the letter that will be on the face opposite to the one showing 'T'.



A U

B S

C R

D P

Answer: A

40. Which of the following numbers will replace the question mark (?) in the given series?
9, 12, 21, 36, 57, 84, ?

A 171

B 117

C 172

D 127

Answer: B

41. In a certain code language, "SUIT" is written as "SITU", and "CUTE" is written as "CTEU". How will "WASH" be written in that language?

A WHAS

B WSHA

C WSAH

D HAWS

Answer: B

42. Select the correct combination of mathematical signs to replace the * signs and to balance the given equation.
 $79 * 2 * 58 * 2 * 14 * 143$

A -, +, ÷, ×, =

B ÷, ×, -, +, =

C ×, -, ÷, +, =

D ÷, ×, +, -, =

Answer: C

43. Which letter-cluster will replace the question mark (?) to complete the given series?
AXUV, ?, YZWT, XAXS, WBYR

A ZYVU

B CZSV

C BZVW

D XWUV

Answer: A

44. Select the option that is related to the fifth term in the same way as the second term is related to the first term and fourth term related to third term.
 $7689 : 120 :: 6178 : 88 :: 3284 : ?$

A 68

B 70

C 69

D 75

Answer: A

SSC CHSL Free Mock Test

45. Select the option that represents the letters that, when sequentially placed from left to right in the blanks below, will complete the letter series.

p _ r _ p o _ p o r b _ o _ p o r b _ o r

A o b p p o p

B o b o p r p

C o b r p r o

D o b r p r p

Answer: D

46. The second number in the given number pairs is obtained by performing certain mathematical operation(s) on the first number. The same operation(s) are followed in all the number pairs except one. Find that odd number pair.

A 2834 : 18

B 8671 : 22

C 9876 : 30

D 3427 : 16

Answer: A

47. Study the given pattern carefully and select the number that can replace the question mark (?) in it.

First row: 32, 51, 33

Second row: 28, 33, 25

Third row: 16, 27, ?

(NOTE: Operations should be performed on the whole numbers, without breaking down the number into its constituent digits. For example, 13 - Operations on 13 such as adding/deleting/multiplying etc. to 13 can be performed. Breaking down 13 into 1 and 3 and then performing mathematical operations on 1 and 3 is not allowed.)

A 19

B 17

C 15

D 18

Answer: B

SSC CHSL Previous Papers (DOWNLOAD PDF)

48. Select the correct mirror image of the given combination when the mirror is placed at MN as shown.

k 4 5 d 2 j |
M
N

A j 2 d 2 k

B j 2 d 2 k

C k 4 2 b 2 j

D j 5 9 2 4 x

Answer: B

49. Select the option that represents the correct order of the given words as they would appear in an English dictionary.

1. Hypocrisy
2. Hilarious
3. Humidity
4. Highlight
5. Hallucinate

A 5,2,4,3,1

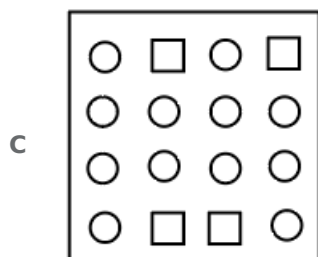
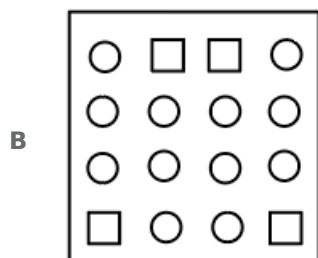
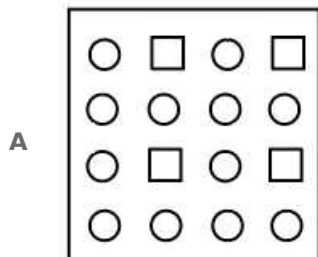
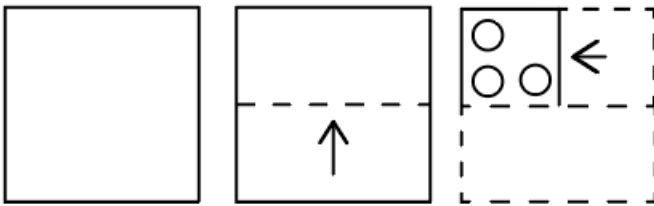
B 5,3,4,2,1

C 5,4,2,3,1


D 5,4,3,2,1

Answer: C

50. A paper is folded and cut as shown. How will it appear when unfolded?



D



Answer: D

SSC CGL Previous Papers (DOWNLOAD PDF)

Quantitative Aptitude

51. The difference between a discount of 35% and two successive discounts of 20% and 20% on a certain bill, was ₹22. Find the amount of the bill.

- A ₹2,800
- B ₹2,200
- C ₹3,200
- D ₹2,000

Answer: B

SSC CGL Free Mock Test (Latest Pattern)

52. Riya runs $\frac{3}{2}$ times as fast as Prerna. In a race, if Riya gives a lead of 100 m to Prerna, find the distance Riya has to run before both of them meet.

- A 315 m
- B 300 m
- C 265 m
- D 240 m

Answer: B

53. Simplify the following: $50\% \text{ of } [6 - \{15 - [6 + 8 \div (5 - 3)] + 2\}]$.

- A 12.5
- B 1.5
- C 4
- D 200

Answer: B

54. The given pie chart presents the monthly expenses on various heads and the savings of Mr.X's family. Study the pie chart and answer the question that follows.



In the total income of Mr.X is ₹1,20,000, then how much does he pay for transport.

- A ₹15,000
- B ₹12,000
- C ₹20,000
- D ₹10,000

Answer: D

SSC CHSL Important Questions and Answers (Download PDF)

55. While selling to the retailer, a company allows 30% discount on the marked price of its products. If the retailer sells those products at marked price, his profit per cent will be _____.

- A $4\frac{8}{7}\%$
- B $4\frac{6}{7}\%$
- C $4\frac{4}{7}\%$
- D $4\frac{2}{7}\%$

Answer: B

56. A shopkeeper sold an article for ₹1,326 after allowing a discount of 15% on its marked price. Find the marked price of the article.

- A ₹1,153
- B ₹1,560
- C ₹1,525
- D ₹1,650

Answer: B

57. If $(x + 2)$ and $(x - 3)$ are the factors of $x^2 + k_1x + k_2$, then:

- A $k_1 = 1$ and $k_2 = -6$
- B $k_1 = -1$ and $k_2 = -6$
- C $k_1 = -1$ and $k_2 = 6$
- D $k_1 = 1$ and $k_2 = 6$

Answer: B

SSC CHSL Study Material

58. In a right circular cone, the radius of the base is 14 cm and the height is 48 cm. A cross-section is made through the midpoint of the height parallel to the base. The volume of the upper portion is: (Take $\pi = \frac{22}{7}$).

- A 1102 cm^3
- B 1232 cm^3
- C 1120 cm^3
- D 1442 cm^3

Answer: B

59. On a sum of money, when invested for 2 years, compound interest and simple interest are ₹300 and ₹250, respectively. For both simple and compound interests the rate of interest per annum is the same, and for compound interest, interest is compounded annually. Find the rate of interest per annum.

- A 10%
- B 20%
- C 40%
- D 30%

Answer: C

60. Find the greatest possible value of $(a + b)$ for which the 8-digit number 143b203a is divisible by 15.

- A 15
- B 17
- C 16
- D 14

Answer: D

SSC CHSL Free App

61. Gopal travels from A to B at the speed of 5km/h, from B to C at 10 km/h, and from C to D at 15 km/h. If $AB = BC = CD$, then find Gopal's average speed.

- A $8\frac{2}{11}$ km/h
- B $70\frac{2}{11}$ km/h
- C $60\frac{2}{11}$ km/h
- D $9\frac{2}{11}$ km/h

Answer: A

62. P, Q and R are batsmen. The ratio of the runs scored by them in a certain match was $P : Q = 16 : 17$ and $Q : R = 15 : 16$. At the end of the match, they scored a total of 956 runs. The number of runs scored by R is (nearest to an integer):

- A 440
- B 335
- C 339
- D 430

Answer: C

63. Study the following table and answer the question that follows.

The following table gives the month-wise number of different types of scooters produced by a company during the first six months of 1992.

Months Types of sectors	JANUARY	FEBRUARY	MARCH	APRIL	MAY	JUNE
X	25	25	18	40	20	15
Y	25	27	50	45	30	20
Z	25	27	15	25	30	20
T	25	26	25	0	30	35
TOTAL	100	105	108	110	110	90

In which month, did the company produce an equal number of scooters of each type?

- A May
- B January
- C March
- D June

Answer: B

Daily Free SSC Practice Set

64. The average weight of 8 men is increased by 1.5 kg when one of the men who weighs 65kg is replaced by a new man. The weight of the new man is:

- A 71 kg
- B 87 kg
- C 81 kg
- D 77 kg

Answer: D

65. If $k + \left(\frac{1}{k}\right) = 2$, find the value of $8k \times k \times k$.

- A 8
- B 1
- C 4
- D 2

Answer: A

66. There is a continuous growth in the population of a village at the rate of 5% per annum. If its present population is 18522, what was the population of the village 3 years ago?

- A 17500
- B 16400
- C 16000
- D 17200

Answer: C

Free SSC Study Material (18,000 Solved Questions)

67. If 15 boys earn ₹900 in 5 days, then how much will 20 boys earn in 7 days?

- A ₹1,580
- B ₹1,680
- C ₹1,540
- D ₹1,650

Answer: B

68. In a circle, AB and CD are two diameters which are perpendicular to each other. Find the length of chord AC.

- A $\sqrt{2}$ CD
- B $\frac{AB}{\sqrt{2}}$
- C $\frac{CD}{2}$

D 2 AB

Answer: B

69. The expenditure of a company increases by 25%, then increases by 30%, then further decreases by 20%. The overall percentage change in expenditure is:

A 10

B 30

C 34

D 22

Answer: B

1500+ Very Important Free SSC Solved Questions

70. The following table shows the marks (in percentages) obtained by six students in four different subjects in an examination. The maximum marks in each subject is 100.

Student	SUBJECT			
	Physics	Chemistry	Math	Geography
A	85	90	70	80
B	75	75	75	85
C	80	60	75	85
D	90	85	75	90
E	95	90	85	90
F	90	90	95	90

Answer the following questions based on the table:

In which of the following subjects is the average of the percentage marks obtained by the six students the highest?

A Maths

B Geography

C Chemistry

D Physics

Answer: B

71. Simplify $\frac{(r-s)^3 + (s-t)^3 + (t-r)^3}{6(r-s)(s-t)(t-r)}$

A $\frac{1}{6}$

B $\frac{1}{2}$

C $\frac{1}{3}$

D $\frac{1}{4}$

Answer: B

72. By using faulty weight, a shopkeeper cheats to the extent of 6% while buying and selling rice. Find his gain percentage (rounded to two decimal places).

- A 14.66%
- B 13.65%
- C 12.77%
- D 11.25%

Answer: C

SSC Exam Update Videos & Free Study Material (YouTube Channel)

73. The radius of a roller is 14 cm and its length 20 cm. It takes 235 complete revolutions to move once over to level a playground. Find the area of the playground. (Use $\pi = \frac{22}{7}$)

- A 4136 cm^2
- B $4136 \times 10^3 \text{ cm}^2$
- C 41360 cm^2
- D $4136 \times 10^2 \text{ cm}^2$

Answer: D

74. If α is an acute angle, which of the following options will NOT necessarily be equal to the value of $\operatorname{cosec} \alpha$?

- A $\frac{1}{\cos \alpha}$
- B $\sqrt{1 + \cot^2 \alpha}$
- C $\frac{1}{\sin \alpha}$
- D $\frac{\cot \alpha}{\cos \alpha}$

Answer: A

75. Find the total surface area of a cylinder with diameter of base 28 cm and height 70 cm.

- A 7300 cm^2
- B 7932 cm^2
- C 8000 cm^2
- D 7392 cm^2

Answer: D

Latest Job Updates on Telegram - Join here

General Awareness

76. M S Subbulakshmi, a legend in India is known for which of the following?

- A** Ghazal music
- B** Hindustani music
- C** Sufi devotional music
- D** Carnatic music

Answer: D

Join SSC Daily Quiz Telegram Group

77. Which term is used to describe all living communities on earth, including animals, plants, bacteria, fungi and photosynthetic microbes?

- A** Biosphere
- B** Community
- C** Habitat
- D** Biome

Answer: A

78. 'Waiting for A Visa' is a famous autobiography of _____.

- A** Swami Acchutanand
- B** Dr. BR Ambedkar
- C** Babu Jagjivan Ram
- D** MC Rajah

Answer: B

79. Who among the following personalities along with his sons played 'Raga for Peace' in the year 2014 at the 'Nobel Peace Prize Concert'?

- A** Pandit Ram Narayan
- B** Ustad Bismillah Khan
- C** Pandit Hariprasad Chaurasia
- D** Ustad Amjad Ali Khan

Answer: D

80. Who is the author of the historical novel 'Twilight in Delhi'?

- A** Ahmed Ali
- B** Amrita Pritam
- C** Khushwant Singh

D Krishna Sobti

Answer: A

81. Lalgudi Gopala Iyer Jayaraman used to play which of the following instruments?

A Harmonium

B Flute

C Mridangam

D Violin

Answer: D

82. 'Sea of Poppies' is a novel written by which of the following writers?

A Amitav Ghosh

B Shashi Tharoor

C Manohar Malgonkar

D Anuj Dhar

Answer: A

SSC CHSL Free Mock Test

83. Which Article of the Indian Constitution deals with the definition of the Money Bill?

A Article 120

B Article 100

C Article 115

D Article 110

Answer: D

84. _____ was established between informal groups (SHGs) and formal financial institutions (banks) for catering to the financial needs of the poor.

A SHG-Bank linkage

B SIDBI-MFI linkage

C NABARD-Bank linkage

D SHG-NABARD linkage

Answer: A

85. Hydroelectric power stations generate electricity by using the force of water that falls into the turbines and spins the shaft. By rotating the shaft of the turbine, the potential energy of water is converted into _____ energy.

A chemical

- B** thermal
- C** gravitational
- D** kinetic

Answer: D

SSC CHSL Previous Papers (DOWNLOAD PDF)

86. Which is the highest peak in peninsular India?

- A** K2
- B** Anai Mudi
- C** Kangchenjunga
- D** Kamet

Answer: B

87. Padma Shri awardee Ileana Citaristi, an Italy born Indian dance exponent was conferred the award for her major contribution to which of the following dances?

- A** Manipuri
- B** Bharatanatyam
- C** Kathak
- D** Odissi

Answer: D

88. In 1838, who published an article discussing the structure and origin of plant cells?

- A** Robert Brown
- B** Rudolf Virchow
- C** Matthias Schleiden
- D** Albert von Kölliker

Answer: C

SSC CGL Previous Papers (DOWNLOAD PDF)

89. The famous singer Jagjit Singh is known for which of the following genres?

- A** Ghazal
- B** Bhajan
- C** Carnatic music
- D** Hindustani music

Answer: A

90. The Men's World Boxing Championship 2023 will be hosted by which of the following countries?

- A** Uzbekistan
- B** Turkmenistan
- C** Kyrgyzstan
- D** Tajikistan

Answer: A

91. _____ was awarded the title of Hanjaba by the Maharaja of Manipur and the Sangit Natak Akademi Award in 1966.

- A** Guru Amubi Singh
- B** Rajkumar Singhajit Singh
- C** Guru Bipin Singh
- D** Sougaijam Thanil Singh

Answer: C

SSC CGL Free Mock Test (Latest Pattern)

92. In July 2021, Mangubhai Chhaganbhai Patel was appointed as the Governor of _____.

- A** Maharashtra
- B** Madhya Pradesh
- C** Karnataka
- D** Kerala

Answer: B

93. What is the name of the zone where trade winds converge?

- A** Forest zone
- B** Intra-terrestrial zone
- C** Inter-continental convergence zone
- D** Inter-tropical convergence zone

Answer: D

94. _____ was the first woman dancer to receive the Padma Vibhushan, the nation's second-highest civilian award.

- A** Mrinalini Sarabhai
- B** Padma Subramaniam
- C** Tanjore Balasaraswati

D Alarmel Valli

Answer: C

SSC CHSL Important Questions and Answers (Download PDF)

95. Who among the following was awarded the Dhyani Chand Award for Lifetime achievement in Sports and Games 2021 in Boxing discipline?

A Gurcharan Singh

B Lekha KC

C Akhil Kumar

D Devendro Singh

Answer: B

96. Who found out the relationship between the current I flowing in a metallic wire and the potential difference across its terminals?

A Albert Einstein

B Georg Simon Ohm

C Rutherford

D Niels Bohr

Answer: B

97. As of August 2021, which Indian state organises Qila Raipur Sports Festival, also known as India's Rural Olympics, annually?

A Gujarat

B Punjab

C Haryana

D Rajasthan

Answer: B

SSC CHSL Study Material

98. In the early 1980s, an aspartic acid-containing dipeptide sweetener was discovered, that was about 2000 times sweeter than sucrose. What is the name of that sweetener?

A Alitame

B Saccharin

C Aspartame

D Sucralose

Answer: A

99. US-based Bharatanatyam/Kuchipudi exponent _____ has won the prestigious Abhinandan Saroja National Award 2021 by the National Institute of Indian Classical Dance at Samarpan on November 15th 2021.

- A** Jeeno Joseph
- B** Aparna Satheesan
- C** Carol Kuruville
- D** Sharan Lowen

Answer: B

100. In which sport is the equipment called antenna used?

- A** Volleyball
- B** Base ball
- C** Basketball
- D** Hockey

Answer: A

SSC CHSL Free App

SSC CHSL Free Mock Test

SSC CHSL Previous Papers (DOWNLOAD PDF)

SSC CGL Previous Papers (DOWNLOAD PDF)

SSC CGL Free Mock Test (Latest Pattern)

SSC CHSL Important Questions and Answers (Download PDF)

SSC CHSL Study Material

SSC CHSL Free App

Daily Free SSC Practice Set

Free SSC Study Material (18,000 Solved Questions)

1500+ Very Important Free SSC Solved Questions



SSC Exam Update Videos & Free Study Material (YouTube Channel)

Latest Job Updates on Telegram - Join here

Join SSC Daily Quiz Telegram Group