



All rights reserved. No part of this publication may be reproduced, distributed, or transmitted in any form or by any means, electronic, mechanical, photocopying, recording or otherwise, or stored in any retrieval system of any nature without the permission of cracku.in, application for which shall be made to support@cracku.in

SSC GD 9th Dec 2021 Shift-3

Reasoning

1. Read the given statements and conclusions carefully. Assuming that the information given in the statements is true, even if it appears to be at variance with commonly known facts, decide which of the given conclusions logically follow(s) from the statements.

Statements:

All books are registers.

All registers are pencils.

Conclusions:

I. All books are pencils.

II. No register is a pen.

- A** Both the conclusions follow
- B** Only conclusion II follows
- C** Either conclusion I or II follows
- D** Only conclusion I follows

Answer: D

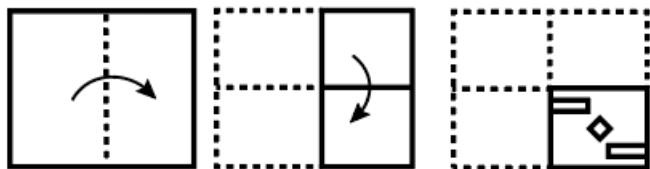
SSC GD Free App

2. In a certain code language, ANGER is coded as 45. How will CRUEL be coded in that language?

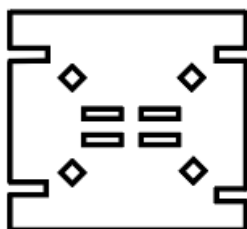
- A** 59
- B** 56
- C** 55
- D** 58

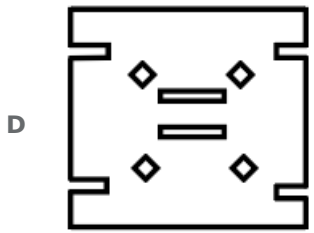
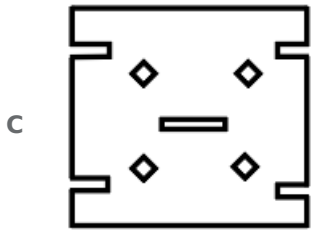
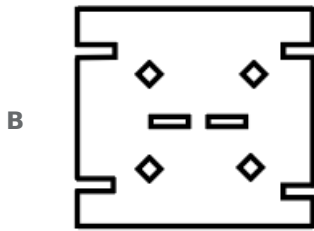
Answer: A

3. The sequence of folding a piece of paper and the manner in which the folded paper has been cut is shown in the following figures. How would this paper look when unfolded?



A





Answer: D

4. Select the correct option that indicates the arrangement of the given words in the order in which they appear in an English dictionary.

1. Prelude
2. Pressure
3. Presume
4. Product
5. Profess

A 1, 2, 3, 4, 5

B 1, 4, 2, 3, 5

C 1, 2, 4, 3, 5

D 1, 2, 3, 5, 4

Answer: A

SSC GD Important Questions and Answers PDF

5. Select the letter-cluster from among the given options that can replace the question mark (?) in the following series.
TH, VJ, YM, ?, HV

A DR

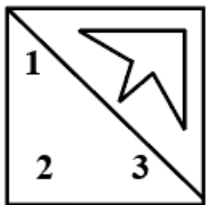
B BR

C HS

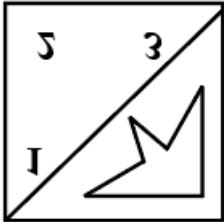
D CQ

Answer: D

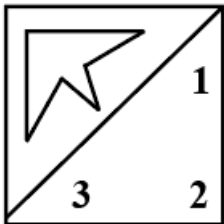
6. Select the correct mirror image of the given figure when the mirror is placed to the right side of the figure.



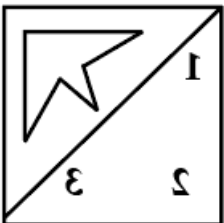
A



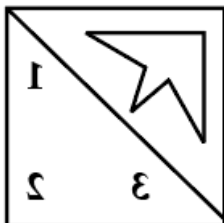
B



C



D



Answer: C

7. M is the only son of S. F is Y's daughter and the only niece of P. P is S's only daughter. How is Y related to M?

A Cousin

B Wife

C Aunt

D Sister

Answer: B

SSC GD Syllabus (Download PDF)

8. M, N, O and P are sitting at an equal distance from each other around a round office table. E, F, G and H have also joined the meeting. M is sitting opposite to F and between O and G. P is sitting second to the right of G and third to the left of H. If N is opposite to H, then who are sitting adjacent to F?

- A** E, N
- B** P, E
- C** H, P
- D** O, H

Answer: B

9. Select the combination of letters that when sequentially placed in the blanks of the given series will complete the series.
Y _ D P _ A _ P Y A D _ Y A _ P

- A** P Y D P D
- B** A Y D P Y
- C** A Y D P D
- D** A Y P D Y

Answer: C

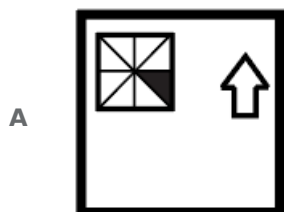
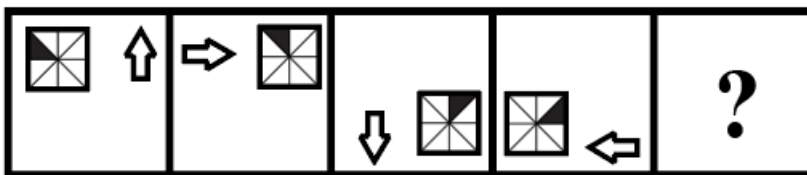
10. In a certain code language, ALMOND is written as BMNPOE. How will MENTAL be written in that language?

- A** NFQOBM
- B** FNOQBM
- C** NFOUBM
- D** FNQOMB

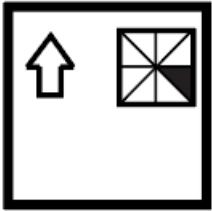
Answer: C

SSC CPO Previous Question papers (download pdf)

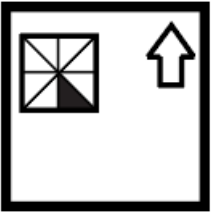
11. Select the figure that will replace the question mark (?) in the following figure series.



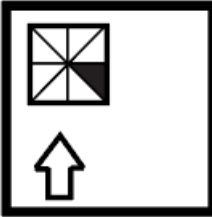
B



C



D



Answer: A

12. Six girls, P, Q, R, S, T and U are sitting in two lines, one line behind the other line. All the girls are facing north. In the front line there are three girls. The remaining girls are sitting in the second line. T is just behind P. R is sitting to the immediate left of U. S is between T and Q. S is sitting to the immediate left of Q. Who is sitting just behind R?

- A P
- B Q
- C S
- D Cannot be determined

Answer: C


13. In a certain code language, CHAMPION is written as NIMHOPAC. How will CHILDREN be written in that language?

- A RENDLIHC
- B NRLHEDIC
- C DLIHCNER
- D IENRDLHC

Answer: B

[SSC MTS Previous Question papers \(download pdf\)](#)

14. Select the option that is embedded in the given figure (rotation is NOT allowed) .




A




B



C

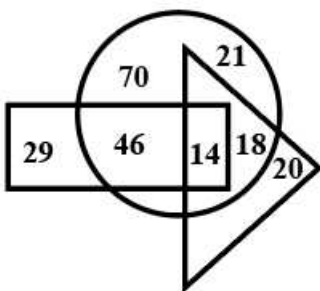


D



Answer: A

15. In the following diagram, the rectangle stands for 'yoga teachers'. the circle stands for 'Indians'. and the triangle stands for 'social workers'. The numbers given in the different segments represent the number of persons of that category.



How many Indian social workers are NOT yoga teachers?

A 14

B 21

C 20

D 18

Answer: D

16. 'Inflation' is related to 'Deflation' in the same way as 'Quick' is related to '_____'.


- A Reflex
- B Sluggish
- C Rapid
- D Race

Answer: B

Free SSC Study Material (18,000 Solved Questions)

17. Select the option that is related to the third number in the same way as the second number is related to the first number.
9 : 107 :: 8 : ?

- A 112
- B 100
- C 98
- D 96

Answer: D

18. If 'P' denotes 'addition', 'D' denotes 'subtraction', 'S' denotes 'multiplication', and 'V' denotes 'division', then what will be the value of the following expression?
5 (7 S 3) D 3 (8 P 6) V 7 D 11 (3 S 13 S 2) P 2 (41 S 9)

- A -21
- B -93
- C 39
- D 21

Answer: A

19. When a number is added to its next number and another number that is 2 times its next number, the sum of these three numbers is 35. Find the number.

- A 9
- B 6
- C 7
- D 8

Answer: D

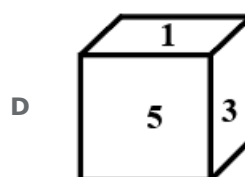
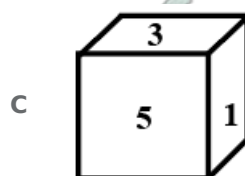
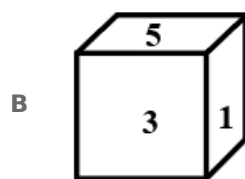
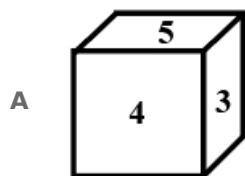
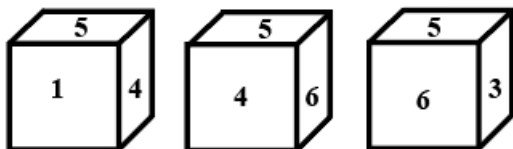
SSC CHSL Previous Papers (DOWNLOAD PDF)

20. Select the number from among the given options that can replace the question mark (?) in the following series.
15, 30, 50, 75, 105, ?, 180

- A 108
- B 98
- C 140
- D 155

Answer: C

21. Three different position of the same dice are shown. Select the option of the next rotation.



Answer: B

22. Select the number from among the given options that can replace the question mark (?) in the following series.
2, 6, 12, ?, 30

- A 20
- B 24
- C 18
- D 26

Answer: A

SSC Stenographer Previous Papers (Download PDF)

23. Select the option that is related to the third term in the same way as the second term is related to the first term.

MUSCLE : CSMEUL :: WONDER : ?

- A DNORWE
- B DNWROE
- C DWNERO
- D NOEWDR

Answer: B

24. Four letter-clusters have been given, out of which three are alike in some manner and one is different. Select the letter-cluster that is different.

- A KMNL
- B OQSP
- C RTUS
- D JLMK

Answer: B

25. Study the given pattern carefully and select the number that can replace the question mark (?) in it.

14 10 38
15 20 50
16 30 ?

- A 60
- B 58
- C 64
- D 62

Answer: D

SSC GD Constable Previous Papers

General knowledge

26. India celebrated World Biofuel Day in _____ 2020.

- A July
- B August
- C May
- D October

Answer: B

SSC MTS Previous Papers (DOWNLOAD PDF)

27. An Indian firm whose turnover is less than ₹ _____ crore is not subject to corporate tax as on November 2020.

- A 1.5
- B 2
- C 2.5
- D 1

Answer: D

28. In which district of Punjab were the skeletal remains of the Indian soldiers, who were killed by the British troops for participating in the First War of Independence in 1857, exhumed in March 2014?

- A Amritsar
- B Jalandhar
- C Bathinda
- D Patiala

Answer: A

29. Who won the Rugby World Cup 2019?

- A France
- B New Zealand
- C South Africa
- D Australia

Answer: C

SSC GD Constable Previous Papers (DOWNLOAD PDF)

30. The One Hundred and Third Amendment of the Constitution of India provides reservation for _____ in government jobs and educational institutions.

- A schedule castes/tribes
- B other backward classes
- C economically weaker sections
- D minorities

Answer: C

31. As of November 2020, The Saraswati Samman is an annual award given for outstanding prose or poetry literary works in any of the _____ Indian languages listed in Schedule VIII of the Constitution of India.

- A** 20
- B** 22
- C** 18
- D** 24

Answer: B

32. Which of the following monuments is located in Lucknow?

- A** Mahabat Maqbara
- B** Ajanta Ellora Caves
- C** Golconda Fort
- D** Bara Imambara

Answer: D

SSC CGL Previous Papers (DOWNLOAD PDF)

33. Who among the following was the first musician ever to be awarded the Bharat Ratna, India's highest civilian honour?

- A** BM Balamuralikrishna
- B** Lata Mangeshkar
- C** MS Subbulakshmi
- D** Pandit Bhimsen Gururaj Joshi

Answer: C

34. Who became the global Chief Executive Officer (CEO) of Bata Shoe Organization?

- A** Thomas George Bata
- B** Alexis Nasard
- C** Sandeep Kataria
- D** Ashwani Windlass

Answer: C

35. Where did American geologist Charles Weld and Dorabji Tata find iron ores?

- A** Rajhara Hills
- B** Bailadila
- C** Boria Tibbu
- D** Eklama

Answer: A

SSC CGL Free Mock Test (Latest Pattern)

36. Which of the following universities was the recipient of the 'Maulana Abul Kalam Azad (MAKA) Trophy' in the year 2020?

- A Punjabi University, Patiala
- B Punjab University, Chandigarh
- C Punjab Agricultural University, Ludhiana
- D Guru Nanak Dev University, Amritsar

Answer: B

37. In which of the following years was the ninth Guru of the Sikhs, Shri Guru Teg Bahadur executed by Aurangzeb?

- A 1675
- B 1745
- C 1539
- D 1689

Answer: A

38. On the occasion of World Heart Day on 29th September 2020, established by World Heart Federation (WHF), in conjunction with the World Health Organization (WHO) declared which heart disease as the number one cause of death on the planet?

- A Cardiovascular disease (CVD)
- B Arrhythmia
- C Coronary artery disease (CAD)
- D Cardiomyopathy

Answer: A

SSC CHSL Free Mock Test (Latest Pattern)

39. Which of the following is NOT a characteristic of a sound wave?

- A Electromagnetic
- B Mechanical
- C Longitudinal
- D Progressive

Answer: A

40. Which city will host the 2021 Summer Paralympics from 24th August to 5th September?

- A Tokyo

- B** Beijing
- C** Atlanta
- D** Toronto

Answer: A

41. Which of the following is also known as Vitamin B2?

- A** Riboflavin
- B** Thiamine
- C** Niacinamide
- D** Cyanocobalamin

Answer: A

SSC Stenographer Previous Papers (Latest Pattern)

42. Which of the following was a compilation of the teachings of Buddha in around 5th to 4th century BCE?

- A** Tipitaka
- B** Ashtanga Hridayam
- C** Avesta
- D** Tattvartha

Answer: A

43. Who is the chairman of Central Board of Indirect Taxes and Customs (CBIC)?

- A** Ashok Lavasa
- B** Amit Shah
- C** Rajiv Kumar
- D** Ajit Kumar

Answer: D

44. Which of the following annual events is primarily associated with the state of Odisha?

- A** Hola Mohalla
- B** Ambubachi Mela
- C** Bali Yatra
- D** Kang Chingba

Answer: C

SSC GD Constable Free Mock Test (Latest Pattern)

45. Who among the following won the Booker Prize for 2020?

- A Anna Burns
- B George Saunders
- C Douglas Stuart
- D Bernardine Evaristo

Answer: C

46. Which of the following statements is INCORRECT?

- A Fiscal policy includes tax policy, expenditure policy, investment or disinvestment strategies and debt or surplus management
- B Fiscal policy deals with the taxation and expenditure decisions of the government.
- C In most modern economies, the central bank deals with fiscal policy while the government is responsible for monetary policy.
- D Monetary policy deals with the supply of money in the economy and the rate of interest.

Answer: C

47. Who was awarded with Diana Award 2020?

- A Freya Thakral
- B C Rangrajan
- C Bimal Jalan
- D Samarth Joshi

Answer: A

SSC MTS Free Mock Test (Latest Pattern)

48. Where is the ICAR-National Research Centre for Banana established?

- A Jalgaon, Maharashtra
- B Belgaum, Karnataka
- C Tiruchirappalli, Tamil Nadu
- D Hajipur, Bihar

Answer: C

49. Which island country in the Arabian sea is a neighbour of India?

- A Maldives
- B Sri Lanka
- C Indonesia

D Myanmar

Answer: A

50. In which of the following states is the Thervoy Kandigai-Kannankottai reservoir situated?

A Tamil Nadu

B Maharashtra

C Madhya Pradesh

D Karnataka

Answer: A

SSC CPO Free Mock Test (Latest Pattern)

Quantitative Ability

51. A sum of money is distributed among A, B, C and D in the ratio 4 : 7 : 11 : 13, respectively. If C gets ₹2,800 more than B, then the difference between A's share and D's share is:

A ₹5,200

B ₹4,800

C ₹6,300

D ₹6,200

Answer: C

SSC GD Free Videos (Youtube)

52. Twenty seven years ago, at the time of marriage, the average age of a couple was 25 years. Now they have a daughter of age 25 years. What is the average age of the family?

A 43 years

B 36 years

C 41 years

D 52 years

Answer: A

53. Simplify the following expression.

$$\frac{1}{4} \div \frac{2}{3} \times \frac{1}{3} + 6 \div 3 \times 2$$

A $1\frac{1}{8}$

B $4\frac{2}{9}$

C $1\frac{2}{9}$

D $\frac{1}{48}$

Answer: B

54. Gagan borrowed a sum of ₹2,500 at 8% per annum compound interest. He paid ₹1,000 at the end of the first year and ₹500 at the end of the second year. In order to clear his dues at the end of 4 years. how much (to a nearest rupee) will he have to pay?

A ₹1,558

B ₹1,628

C ₹1,443

D ₹1,800

Answer: A

SSC GD Free App

55. A shopkeeper buys goods at 10% discount. He allows 10% discount on the marked price to his customers. What is his profit percentage?

A 10

B 30

C 11.9

D 12.5

Answer: D

56. A candidate got 41250 votes in an election and defeated his opponent by a margin of 7500 votes. If no votes were declared invalid and there were only two candidates, then what is the percentage of votes obtained by the winning candidate?

A 65

B 55

C 60

D 75

Answer: B

57. A salesman sold a watch at a loss of 9%. If the selling price had been increased by ₹140, there would have been a gain of 5%. What was the cost price of the watch?

A ₹1,200

B ₹1,000

C ₹9,00

D ₹1,150

Answer: B

SSC GD Important Questions and Answers PDF

58. The volume of a right circular cone is 924 cm^3 and its height is 18 cm. What is the perimeter (in cm) of the base of the cone?
(Take $\pi = \frac{22}{7}$)

- A 33
- B 22
- C 44
- D 66

Answer: C

59. If the selling price of 12 articles is the same as the cost price of 15 articles, then what is the profit percentage?

- A 20%
- B 25%
- C 3%
- D 27%

Answer: B

60. Sushant gave 30% of the money he had to his wife. He also gave 18% of the remaining amount to each of his two sons. Three-fourth of the amount now left was spent on miscellaneous items and the remaining amount of ₹19,600 was deposited in the bank. How much money did Sushant have originally?

- A ₹1,65,000
- B ₹1,75,000
- C ₹1,70,000
- D ₹1,80,000

Answer: B

SSC GD Syllabus (Download PDF)

61. 8 taps having the same flow of water fill a tank in 27 minutes. After 3 minutes, 2 taps went out of service. The time taken to fill the tank by the remaining taps is:

- A 30 minutes
- B 36 minutes
- C 32 minutes
- D 28 minutes

Answer: C

62. The volume of a sphere is equal to the volume of a cylinder of radius 6 cm and height 8 cm. The diameter of the sphere is:

- A 18 cm
- B 16 cm
- C 14 cm
- D 12 cm

Answer: D

63. A gardener wants to plant trees in a garden. If the number of trees in each row is the same, and there are 105 or 210 or 315 or 525 rows, and after that no trees left, then the least number of trees that were planted is:

- A 3150
- B 2100
- C 1000
- D 1525

Answer: A

SSC CPO Previous Question papers (download pdf)

64. A certain sum amounts to ₹14,641 in 4 years at 10% p.a., when the interest is compounded annually. What will be the simple interest on the same sum in $3\frac{1}{2}$ years at the same rate of interest?

- A ₹4,200
- B ₹3,000
- C ₹2,800
- D ₹3,500

Answer: D

65. If 78% of a number A is equal to 32.5% of another number B, then what is the ratio of B to A?

- A 12 : 5
- B 5 : 12
- C 4 : 7
- D 7 : 4

Answer: A

66. The marked price of a watch is ₹700. A shopkeeper gives two successive discounts and sells the watch at ₹315. If the first discount is 10%, then the second discount will be:

- A 35%
- B 25%
- C 60%

D 50%

Answer: D

SSC MTS Previous Question papers (download pdf)

67. The selling price of 8 articles is the same as the cost price of 12 articles. The profit percentage is:

A 25%

B 90%

C 27%

D 50%

Answer: D

68. The least number which when divided by 6, 9, 15, 18 and 21 leaves a remainder 4 in each case, is:

A 734

B 636

C 634

D 624

Answer: C

69. The speed of a boat in still water is 9 km/h. If it takes the same time in going 35 km downstream as it takes in going 28 km upstream, then what is the speed (in km/h) of the stream?

A 1

B 0.5

C 1.5

D 1.2

Answer: A

Free SSC Study Material (18,000 Solved Questions)

70. Radha took a loan of ₹19200 partly at 4% and the rest at 7% per annum simple interest. She paid a total of 5520 after 5 years as interest. What is the difference of the money (in ₹) borrowed at the two different rates of interest?

A 3200

B 2000

C 3600

D 4000

Answer: A

71. The expressi. on $2 \div 2of^{\frac{1}{2}} + 2.5 \times 2 \div 5 \times \frac{3}{5}of^{\frac{1}{3}} - 0.5 \left(2.5 - \frac{1}{2} \times 2 \div \frac{1}{2} \right)$, on simplification, gives the result as:

- A 0
- B 6.75
- C 1
- D $\frac{2}{3}$

Answer: B

72. A man covers a certain distance at a uniform speed in 5 hours. If he increases his speed by 1 km/h, then he takes 10 minutes less. What is the speed (in km/h) of the man?

- A 29
- B 28
- C 25
- D 30

Answer: A

SSC CHSL Prevoius Papers (DOWNLOAD PDF)

73. A, B and C working together can complete a work in 16 days. If A and B work together, they can complete the same work in 18 days. If B and C work together they can complete the same work in 24 days. In how many days can A and C complete the same work?

- A 36
- B 21
- C 54
- D 26

Answer: A

74. The average age of the students in a school is 13.2 years. The average age of the boys is 14.4 years and that of the girls is 12.3 years. The ratio of the number of girls to that of the boys is:

- A 3 : 4
- B 4 : 1
- C 4 : 3
- D 1 : 4

Answer: C

75. What is the ratio of the fourth proportional to 5, 8, 15 and the third proportional to 12 and 30?

- A 8 : 25
- B 5 : 13

C 4 : 9

D 6 : 17

Answer: A

SSC Stenographer Previous Papers (Download PDF)

English

76. Select the most appropriate option to fill in the blank.

We must plant and _____ at least one tree every year.

A assemble

B utilise

C nurture

D abolish

Answer: C

SSC GD Constable Previous Papers

77. Select the most appropriate ANTONYM of the given word.

Generous

A Helpful

B Charitable

C kind-hearted

D Inconsiderate

Answer: D

78. Select the correctly spelt word.

A Recaptulate

B Lifelesness

C Incredulous

D Synergizm

Answer: C

79. Select the most appropriate option that can substitute the underlined word in the given sentence. If there is no need to substitute it, select 'No substitution required'.

The Prime Minister as well as his ministers want peace in the country.

A have wanted

B are wanting

- C wants
- D No substitution required

Answer: C

SSC MTS Previous Papers (DOWNLOAD PDF)

80. The following sentence has been split into four segments. Identify the segment that contains a grammatical error.
If he were / to climb the tree / and bring the kitty down, / the child was happy.

- A and bring the kitty down
- B the child was happy
- C to climb the tree
- D If he were

Answer: B

81. Select the most appropriate option to fill in the blank.
Every night, _____ going to bed, he thanked God for his gifts.

- A before
- B through
- C soon
- D after

Answer: A

82. Select the option that can be used as a one-word substitute for the given group of words. the sound made by a crocodile

- A Trumpet
- B Growl
- C Screech
- D Bellow

Answer: D

SSC GD Constable Previous Papers (DOWNLOAD PDF)

83. Select the most appropriate option that can substitute the underlined segment in the given sentence. If there is no need to substitute it, select 'No substitution required'.

The plant will die unless you will water it every day.

- A are watering
- B water
- C would water
- D No substitution required

Answer: B

84. Select the most appropriate synonym of the given word.
Jubilation

- A Submission
- B Servitude
- C Rejoicing
- D Subjugation

Answer: C

85. Select the most appropriate option that can substitute the underlined segment in the given sentence. If there is no need to substitute it, select 'No substitution required'.

We must prayed at the Almighty for the well-being of all family members.

- A pray from
- B No substitution required
- C be praying at
- D pray to

Answer: D

SSC CGL Previous Papers (DOWNLOAD PDF)

86. The following sentence has been divided into parts. One of them may contain an error.

Select the part that contains the error from the given options. If you don't find any error, select 'No error' as your answer.

He worked so hardly / that he won / the dance competition.

- A that he won
- B He worked so hardly
- C the dance competition
- D No error

Answer: B

87. Select the most appropriate synonym of the given word.
Excerpt

- A Abstract
- B Interval
- C Extract
- D Blurb

Answer: C

88. The following sentence has been split into four segments. Identify the segment that contains a grammatical error.
Beside doing the laundry, / Rakesh helped her / in cooking also / when she was ill.

- A Beside doing the laundry
- B in cooking also
- C Rakesh helped her
- D when she was ill

Answer: A

SSC CGL Free Mock Test (Latest Pattern)

89. Select the INCORRECTLY spelt word.

- A Conscious
- B Vicious
- C Courtious
- D Glorious

Answer: C

90. Select the option that can be used as a one-word substitute for the given group of words.
Represent something as larger, better or worse than it really is

- A Ridicule
- B Applaud
- C Boast
- D Exaggerate

Answer: D

91. Select the most appropriate meaning of the given idiom.
To know what's what

- A To be very rude
- B To know the facts of a situation
- C To be overconfident
- D To be in a difficult situation

Answer: B

SSC CHSL Free Mock Test (Latest Pattern)

92. Select the most appropriate option to fill in the blank.
The _____ has created a havoc in the whole world.

- A pandemic
- B prefix
- C pantomime
- D panorama

Answer: A

93. Select the most appropriate meaning of the given idiom.
To rub salt in someone's wound

- A To use salt as a remedy for a painful wound
- B To make a bad or painful situation worse
- C To help in bandaging a wound
- D To make a medicine for wounds

Answer: B

94. Select the most appropriate ANTONYM of the given word.
Commence

- A Arise
- B Conclude
- C Begin
- D Launch

Answer: B

SSC Stenographer Previous Papers (Latest Pattern)

95. Select the option that can be used as a one-word substitute for the given group of words.
Sound reflected back as in mountains

- A Ebony
- B Éclair
- C Eclipse
- D Echo

Answer: D

Instructions [96 - 100]

In the following passage, some words have been deleted. Read the passage carefully and select the most appropriate option to fill in each blank.

I had a little cottage. There were vines (1)_____ on it. They looked pretty with the evening sun on (2)_____. My wife was very ill, we had no food (3)_____. I could get no work and my wife, Jeanette, was (4)_____ so I stole to buy her food. They caught me. I (5)_____ with them and told them why I stole but they laughed at me. I was sentenced to 10 years in prison.

96. Select the most appropriate option to fill in blank number 1.

- A developing
- B swelling
- C growing
- D planting

Answer: C

97. Select the most appropriate option to fill in blank number 2.

- A them
- B us
- C her
- D it

Answer: A

SSC GD Constable Free Mock Test (Latest Pattern)

98. Select the most appropriate option to fill in blank number 3.

- A to eat
- B to be eating
- C for eating
- D to ate

Answer: A

99. Select the most appropriate option to fill in blank number 4.

- A dying
- B expiring
- C vanishing
- D falling

Answer: A

100. Select the most appropriate option to fill in blank number 5.

- A pleaded
- B pretended
- C promised
- D preyed

Answer: A

[**SSC MTS Free Mock Test \(Latest Pattern\)**](#)

[**SSC GD Free App**](#)

[**SSC GD Important Questions and Answers PDF**](#)

[**SSC GD Syllabus \(Download PDF\)**](#)

[**SSC CPO Previous Question papers \(download pdf\)**](#)

[**SSC MTS Previous Question papers \(download pdf\)**](#)

[**Free SSC Study Material \(18,000 Solved Questions\)**](#)

[**SSC CHSL Previous Papers \(DOWNLOAD PDF\)**](#)

[**SSC Stenographer Previous Papers \(Download PDF\)**](#)

[**SSC GD Constable Previous Papers**](#)

[**SSC MTS Previous Papers \(DOWNLOAD PDF\)**](#)

[**SSC GD Constable Previous Papers \(DOWNLOAD PDF\)**](#)

[**SSC CGL Previous Papers \(DOWNLOAD PDF\)**](#)

[**SSC CGL Free Mock Test \(Latest Pattern\)**](#)

[**SSC CHSL Free Mock Test \(Latest Pattern\)**](#)

[**SSC Stenographer Previous Papers \(Latest Pattern\)**](#)

[**SSC GD Constable Free Mock Test \(Latest Pattern\)**](#)

[**SSC MTS Free Mock Test \(Latest Pattern\)**](#)

[**SSC CPO Free Mock Test \(Latest Pattern\)**](#)

[**SSC GD Free Videos \(Youtube\)**](#)

