



All rights reserved. No part of this publication may be reproduced, distributed, or transmitted in any form or by any means, electronic, mechanical, photocopying, recording or otherwise, or stored in any retrieval system of any nature without the permission of cracku.in, application for which shall be made to support@cracku.in

SSC CGL 18th April 2022 Shift-2

General Intelligence and Reasoning

1. In a certain code language, 3224 means 'Taj is in Agra', and 4245 means 'Agra is near Delhi'. Which of the following is the code for 'I like all fruits'?

- A 2534
- B 2425
- C 1526
- D 1436

Answer: D

SSC CGL Free Mock Test

2. Select the correct combination of mathematical signs that can sequentially replace the * signs and balance the given equation.
 $15 * 1411 * 83 * 137 * 218 * 100$

- A $\times, \div, =, +, -$
- B $\times, =, -, \div, +$
- C $+, -, \times, =, \div$
- D $\times, +, \div, -, =$

Answer: A

3. The ratio of the present ages of Charvi and Vaishnavi is 4 : 5. Yuvika is 2 years older than Charvi but 5 years younger than Vaishnavi. Find the present age of Vaishnavi.

- A 35 years
- B 28 years
- C 25 years
- D 42 years

Answer: A

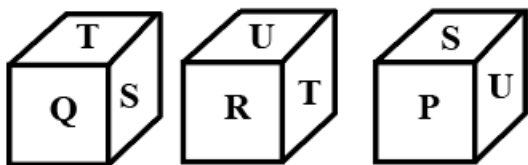
4. Select the number from among the given options that can replace the question mark (?) in the following series.
39, 53, 69, 87, ?

- A 99
- B 107
- C 92
- D 115

Answer: B

SSC CGL Previous Papers (DOWNLOAD PDF)

5. Three different positions of the same non-standard dice are shown. Which letter will be on the face opposite to the face with the letter 'Q'?



- A S
- B P
- C U
- D R

Answer: C

6. Four letter-clusters have been given, out of which three are alike in some manner and one is different. Select the letter-cluster that is different.

- A WTR
- B UT
- C JH
- D PN

Answer: B

7. Select the option that is related to the third number in the same way as the second number is related to the first number.
 $28 : 729 :: 32 : ?$

- A 961
- B 973
- C 824
- D 738

Answer: A

25 SSC CHSL Mocks for just Rs. 149

8. Select the combination of letters that when sequentially placed in the blanks of the given series will complete the series.
K _ _ N L _ N K _ N _ L N K _ M _ L M _

- A L, M, M, M, K, L, K, N
- B L, M, M, K, K, L, N, N
- C M, M, L, K, K, L, K, N

D L, M, M, K, K, M, K, N

Answer: A

9. Study the given matrix carefully and select the number from among the given options that can replace the question mark (?) in it
- | | | |
|----|----|----|
| 7 | 9 | 5 |
| 3 | 8 | ? |
| 28 | 81 | 50 |

A 9

B 5

C 7

D 8

Answer: A

10. If GATE is coded as QKDO, then PLAN will be coded as:

A VFXK

B 2FVKX

C 3ZVXK

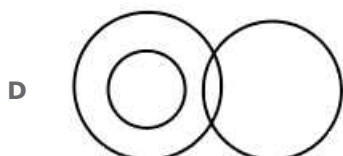
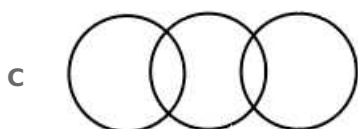
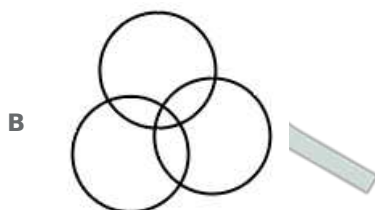
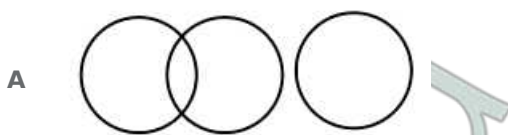
D 4ZVKX

Answer: D

SSC CGL Tier-2 Previous Papers PDF

11. Select the Venn diagram that best illustrate the relationship between the following classes.

Brothers, Nephews, Uncles



Answer: B

12. Select the letter-cluster that can replace the question mark (?) in the following series.
GHB, LMG, PQK, ?

- A STN
- B TSM
- C PQE
- D ABX

Answer: A

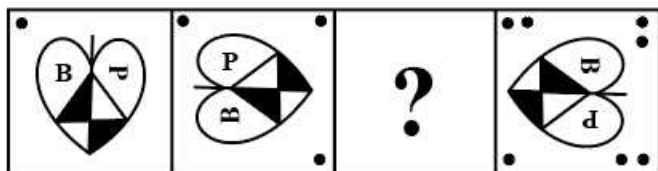
13. Select the option that is related to the third term in the same way as the second term is related to the first term.
DOGMATIC : EQHOBVJD :: PRODUCTS : ?

- A RTQEWDVU
- B RTSEWDSQ
- C RTQFXDVU
- D RTQEWDWV

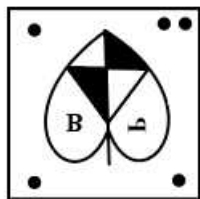
Answer: A

SSC CGL Important Questions PDF

14. Select the figure from among the given options that can replace the question mark(?) in the following series.



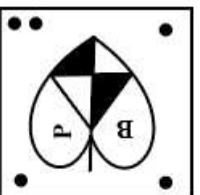
A

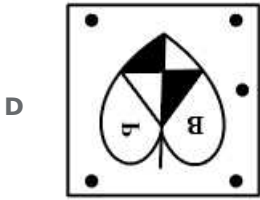


B



C





Answer: C

15. In a certain code language, 'TOMATO' is coded as 40-30-26-2-40-30 and 'GINGER' is coded as 14-18-28-14-10-36. How will 'GARLIC' be coded in that language?

- A 14-2-36-24-18-6
- B 7-2-18-24-18-3
- C 7-1-36-12-9-6
- D 14-1-18-24-18-3

Answer: A

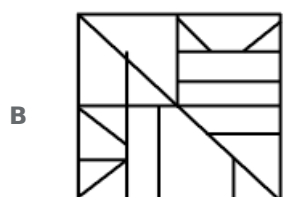
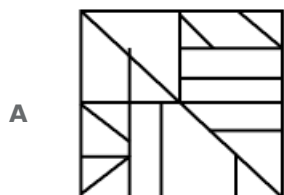
16. Which two numbers (Not Digits) need to be interchanged to make the following equation correct?
 $15 + 90 \div 9 \times 5 - 11 = 28$

- A 11 and 9
- B 15 and 9
- C 15 and 5
- D 9 and 5

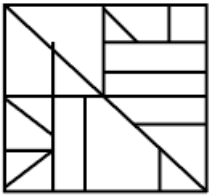
Answer: B

1500 + Free Must Solved SSC Questions (With Solutions)

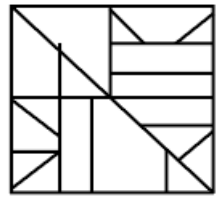
17. Select the option in which the given figure is embedded (rotation is NOT allowed).



C



D



Answer: A

18. Introducing Kaumudi to a guest, a boy, Mihir, said, "She is the only daughter of my mother's brother-in-law". How is Mihir related to Kaumudi?

A Brother

B Father

C Uncle

D Cousin

Answer: C

19. Radha wears five different coloured clothes, red, green, yellow, purple and brown, on five different days of a week, from Monday to Friday. She wears red clothes on Wednesday. She does not wear green and brown clothes on Monday or Friday. She wears green clothes on the next day of wearing yellow clothes. On which day does she wear brown clothes?

A Monday

B Tuesday

C Friday

D Thursday

Answer: D

General Science Notes for SSC CGL

20. Select the number from among the given options that can replace the question mark (?) in the following series.
2, 31, 4, 37, 10, 41, 28, 43, 82, 47, ?

A 422

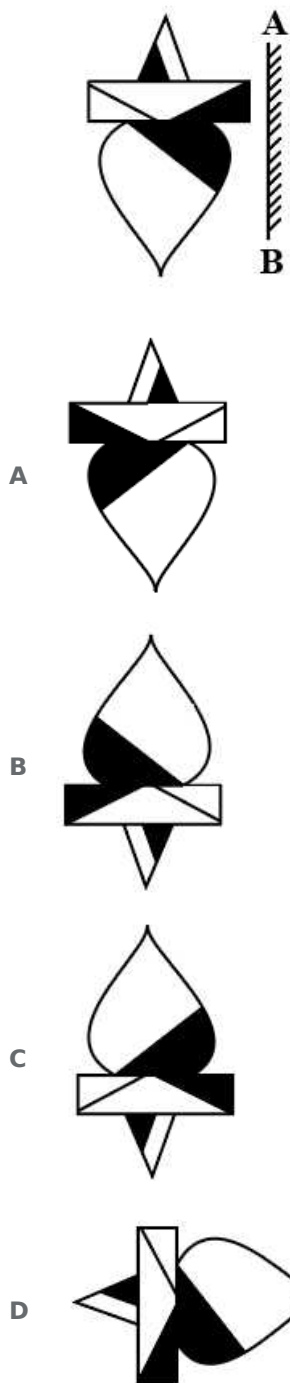
B 242

C 224

D 244

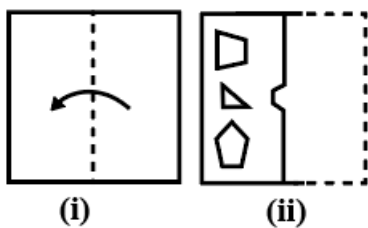
Answer: D

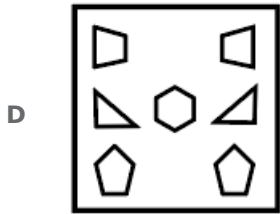
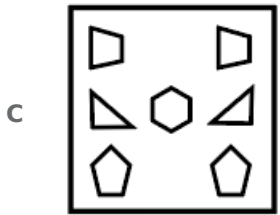
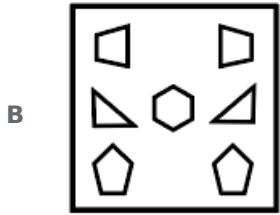
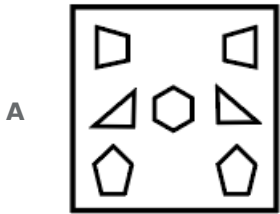
21. Select the correct mirror image of the given figure when the mirror is placed at 'AB' as shown.



Answer: A

22. The sequence of folding a piece of paper (figure i) and the manner in which the folded paper has been cut (figure ii) is shown in the following figures. Select the option that would most closely resemble the unfolded form of figure (ii).

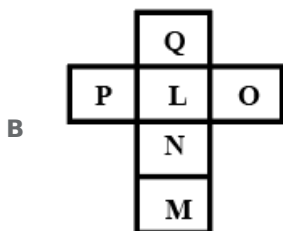
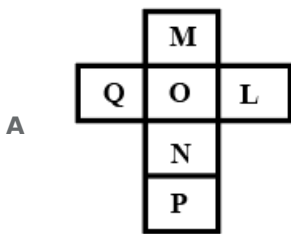
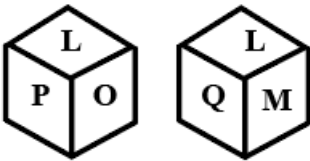


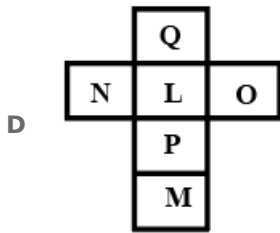
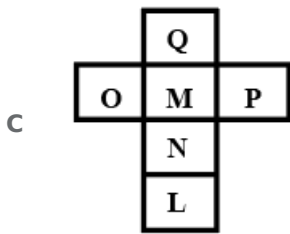


Answer: D

Free SSC Study Material (18,000 Solved Questions)

23. Two orientations of a dice are shown. This dice can be obtained by folding which of the option figures along the lines?





Answer: D

24. Read the given statements and conclusions carefully. Assuming that the information given in the statements is true, even if it appears to be at variance with commonly known facts, decide which of the given conclusions logically follow(s) from the statements.

Statements:

No plum is an apricot.
All lemons are apricots.
All grapes are lemons.

Conclusions:

- I. No apricot is a grape.
- II. No grape is a plum.
- III. No lemon is a plum.
- IV. Some plums are lemons.

- A Only conclusions I, II and IV follow.
- B Only conclusions II, III and IV follow.
- C Only conclusions II and III follow.
- D Only conclusions I, II and III follow.

Answer: C

25. Select the correct option that indicates the arrangement of the given words in the order in which they appear in an English dictionary.

1. Projection
2. Professor
3. Product
4. Pronounce
5. Provide

- A 2, 3, 1, 4, 5
- B 3, 2, 1, 5, 4
- C 3, 2, 4, 1, 5
- D 3, 2, 1, 4, 5

Answer: D

SSC Exam Free Videos (Youtube)

General Awareness

26. Which of the following states became the first state in India to provide 100% tap water supply in rural areas in 2020?

- A Goa
- B Kerala
- C Mizoram
- D Sikkim

Answer: A

SSC Free Preparation App

27. How many electrons are there in the outermost shell of a group 16 element?

- A 5
- B 4
- C 3
- D 6

Answer: D

28. Which of the following parties supported the move for partition of Bengal?

- A Gadar Party
- B Forward Bloc
- C All India Muslim League
- D Communist Party of India

Answer: C

29. In Union Budget 2021-22, there is a proposal to provide liquid waste management in _____ AMRUT cities under Jal Jeevan Mission (Urban).

- A 150
- B 400
- C 500
- D 350

Answer: C

Daily Free SSC Practice Set

30. According to Economic Survey 2020-2021, India's real GDP is projected to record ____ growth in the Fiscal Year 2021-22.

- A 10.8%
- B 12.3%
- C 11.0%
- D 13.5%

Answer: C

31. Which of the following symmetries is exhibited by arthropods?

- A Axial
- B Translational
- C Radial
- D Bilateral

Answer: D

32. Who among the following wrote 'India Wins freedom'?

- A Jawaharlal Nehru
- B Abul Kalam Azad
- C Jaswant Singh
- D Rajendra Prasad

Answer: B

SSC CGL Free Online Coaching

33. In the flocculation method of water treatment ____ chemical is added to water.

- A electro-neutral
- B low negatively charged
- C positively charged
- D high negatively charged

Answer: C

34. The Right of Children to Free and Compulsory Education Act or Right to Education (RTE) Act is an Act of the Parliament of India enacted in the year ____.

- A 2009
- B 2012
- C 2005

D 2007

Answer: A

35. In the context of Indian Freedom Movement, which of the following years is correctly paired with the event that took place that year?

A 1915 - Mahatma Gandhi returned from South Africa

B 1944 - The Cripps Mission was sent by the British government to India to obtain Indian cooperation for the British war efforts in the 2nd World War

C 1936 - The First Round Table Conference

D 1945 - The All India Congress Committee met in Bombay and ratified the 'Quit India' resolution

Answer: A

SSC CHSL Previous Question papers (download pdf)

36. In which of the following cities was the 2020 Asian Wrestling Championships held?

A New Delhi

B Tokyo

C Beijing

D Colombo

Answer: A

37. As per Union Budget for 2021-22, interest earned on Provident Fund contribution above _____ lakhs in a year will become taxable.

A ₹1.5

B ₹1

C ₹2

D ₹2.5

Answer: D

38. What do you call the weight a soil can withstand before severe damage occurs to the structure of the soil?

A Field capacity

B Bearing capacity

C Bulk density

D Buffering capacity

Answer: B

Free SSC Study Material (18,000 Solved Questions)

39. Who was the chairman of the House Committee of the Constituent Assembly of India?

- A B Pattabhi Sitaramayya
- B AV Thakkar
- C JB Kripalani
- D KM Muni

Answer: A

40. Which of the following festivals is held on a new moon day?

- A Mahavir Jayanti
- B Kali Puja
- C Dussehra
- D Holi

Answer: B

41. A 'Nattuvanar' conducts a _____ dance recital.

- A Kuchipudi
- B Odissi
- C Kathak
- D Bharatanatyam

Answer: D

Latest Job Updates on Telegram - Join here

42. What was the estimated national mortality rate of children under the age of five in the country as per Census of India 2011?

- A 34
- B 55
- C 76
- D 13

Answer: B

43. Nitrogen is a _____ element.

- A diatomic
- B tetra-atomic
- C poly-atomic
- D monoatomic

Answer: A

44. Actor _____ was conferred with the 'Lifetime Achievement' award at the Filmfare Awards 2021.

- A** Irrfan Khan
- B** Amitabh Bachchan
- C** Dharmendra
- D** Rishi Kapoor

Answer: A

Join SSC Daily Quiz Telegram Group

45. Who among the following became the first Indian to win the 'Best Actor' award at the Norwegian National Awards ceremony held in Haugesund, Norway in 2018?

- A** Ranvir Shorey
- B** Nawazuddin Siddique
- C** Ram Kapoor
- D** Adil Hussain

Answer: D

46. As of 2021, who is the reigning Olympic Men's Field Hockey champion?

- A** Belgium
- B** Germany
- C** Argentina
- D** Holland

Answer: C

47. The fine for extinguishing public lamps may extend to _____ as per Section 141 of The Electricity Act, 2003.

- A** ₹2,000
- B** ₹3,000
- C** ₹2,500
- D** ₹5,000

Answer: A

SSC CGL Free Mock Test

48. Ozone is a molecule made up of _____ oxygen atoms.

- A** four

- B** two
- C** one
- D** three

Answer: D

49. Which of the following varnas was responsible for protecting people and administering justice in ancient India as per rules laid down by the Dharmasutras and Dharmashastras?

- A** Vaishya
- B** Shudra
- C** Kshatriya
- D** Brahmana

Answer: C

50. Which of the following rivers originates in a spring at Verinag in the south-eastern part of Kashmir?

- A** Beas
- B** Jhelum
- C** Chenab
- D** Sutlej

Answer: B

SSC CGL Previous Papers (DOWNLOAD PDF)

Quantitative Aptitude

51. The expression $(\cos^6 \theta + \sin^6 \theta)(\tan^2 \theta + \tan^2 \theta + 2) + 1$

- A** 1
- B** -2
- C** 0
- D** -1

Answer: B

25 SSC CHSL Mocks for just Rs. 149

52. A railway engine passes two bridges of lengths 400 m and 235 m and 100 seconds and 60 seconds. respectively. Twice the length of the railway engine (in m) is:

- A** 24
- B** 25

C 12.5

D 12

Answer: B

53. The sides AB and AC of $\triangle ABC$ are produced to points D and E, respectively. The bisectors of $\angle CBD$ and $\angle BCE$ meet at P. If $\angle A = 88^\circ$, then the measure of $\angle P$ is:

A 46°

B 56°

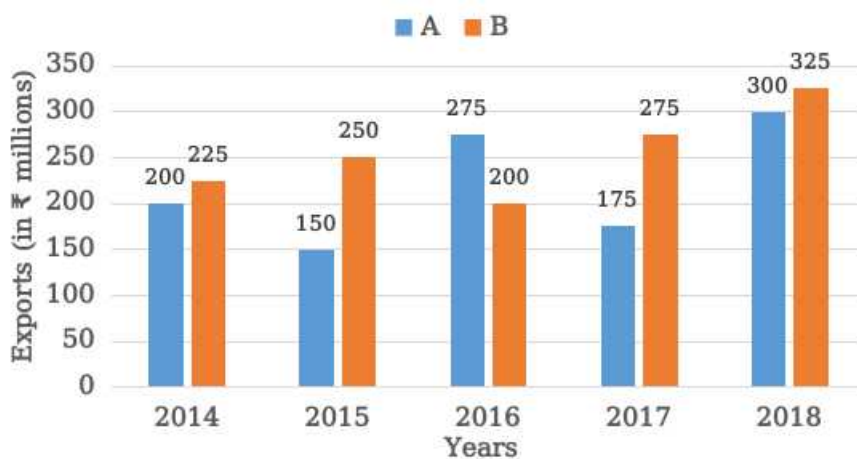
C 51°

D 61°

Answer: A

54. The given bar graph shows exports of cars of type A and B (in ₹ millions) from 2014 to 2018. Study the graph and answer the question that follows.

Exports of Cars of Type A and B (in ₹ millions) during 2014 to 2018.



In which year are the exports of cars of type A ₹20 million less more than the average exports (per year) of cars of type B?

A 2015

B 2014

C 2016

D 2017

Answer: C

SSC CGL Tier-2 Previous Papers PDF

55. If $a^2 + b^2 + 49c^2 + 18 = 2(b - 28c - a)$, then the value of $(a - b - 7c)$ is:

A 4

B 3

C 2

D 1

Answer: C

56. Joseph deposited a total of ₹52,500 in a bank in the names of his two daughters aged 15 years and 16 years in such a way that they would get equal amounts when they become 18 years old. If the bank gives 10% compound interest compounded annually, then what is the amount (in ₹) that Joseph had deposited in the name of his younger daughter?

A 5,500

B 4,500

C 5,000

D 6,000

Answer: C

57. The circumference of the base of a right circular cylinder is 62.8 cm and its volume is 8792 cm^3 . What is the curved surface area (in cm^2) of the cylinder (Take $\pi = 3.14$)

A 1695.6

B 1758.4

C 1632.8

D 1570.2

Answer: B

SSC CGL Important Questions PDF

58. The average of eight consecutive odd numbers is 28. The sum of the smallest and the largest number is:

A 45

B 52

C 48

D 56

Answer: D

59. In $\triangle ABC$, $AB = 7 \text{ cm}$, $BC = 10 \text{ cm}$, and $AC = 8 \text{ cm}$. If AD is the angle bisector of $\angle BAC$, where D is a point on BC , then $\frac{DC}{4}$ (in cm) is equal to:

A $\frac{14}{3}$

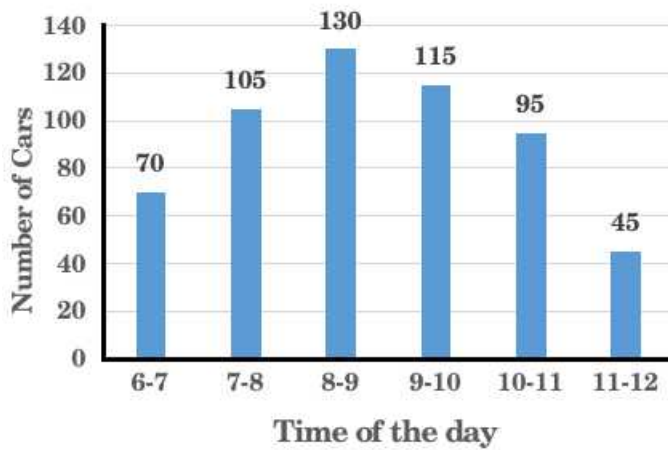
B $\frac{4}{3}$

C $\frac{11}{3}$

D $\frac{7}{3}$

Answer: B

60. The number of cars passing the road near a colony from 6 am to 12 noon has been shown in the following histogram. During which hour(s) is the number of cars passed more than the average number of cars passed from 6 am to 11 am?



- A 8- 9 am, 9- 10 am
 B 8- 9 am
 C 7- 8 am, 8- 9 am, 9--10 am, 10-11 am
 D 7- 8 am, 8- 9 am, 9--10 am

Answer: D

1500 + Free Must Solved SSC Questions (With Solutions)

61. What is the greatest four-digit number which on being divided by 6, 7 and 8 leaves 4, 5 and 6 as remainders, respectively?

- A 9910
 B 9920
 C 9921
 D 9912

Answer: A

62. A poster is on top of a building. A person is standing on the ground at a distance of 50 m from the building. The angles of elevation to the top of the poster and bottom of the poster are 45° and 30° , respectively. What is 200% of the height (in m) of the poster?

- A $\frac{25}{3} (3 - \sqrt{3})$
 B $\frac{75}{3} (3 - \sqrt{3})$
 C $\frac{50}{3} (3 - \sqrt{3})$
 D $\frac{100}{3} (3 - \sqrt{3})$

Answer: D

63. The ratio of the profits of P and Q is 5: 8. What is their investment ratio, if their investment time period ratio is 3: 5?

- A 13 : 25

- B 12 : 25
- C 24 : 25
- D 25 : 24

Answer: D

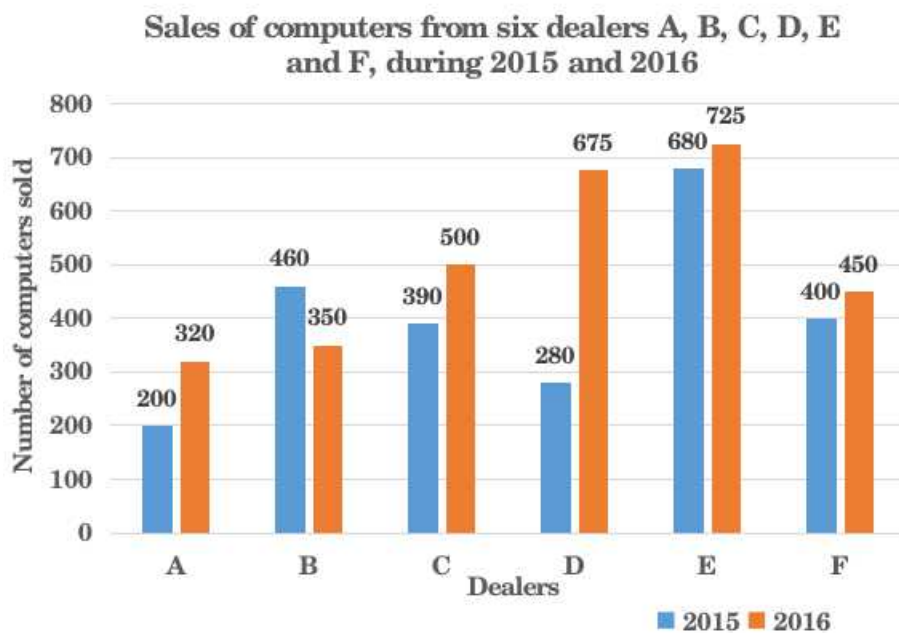
General Science Notes for SSC CGL

64. If a nine digit number $468x5138y$ is divisible by 72, then the value of $\sqrt{4x + 3y}$ is:

- A 8
- B 9
- C 12
- D 6

Answer: D

65. The given bar graph shows the sales of computers from six dealers A, B, C, D, E and F, during two consecutive years 2015 and 2016. Study the graph and answer the question that follows.



What is the ratio of the total sales from dealers A, B and C taken together for the year 2015 to the sales from dealers D, E and F taken together for the year 2016?

- A 25 : 39
- B 37 : 21
- C 21 : 37
- D 39 : 25

Answer: C

66. The value of $15 + 6.3 \div 7 - 3 \times 1.3 - 2$ is:

- A 9
- B -10
- C 10
- D 7

Answer: C

Free SSC Study Material (18,000 Solved Questions)

67. A river 6 m deep and 35 m wide is flowing at the rate of 2.5 km/h, the amount of water that runs into the sea per minute is:

- A 8570 m^3
- B 7850 m^3
- C 7580 m^3
- D 8750 m^3

Answer: D

68. A can complete work in 25 days and B can complete the same work in 20 days. They started the work together but B left after 4 days and A continued to work, In how many days will the entire work completed?

- A 25
- B 20
- C 28
- D 22

Answer: B

69. If $2\sqrt{2}x^3 - 3\sqrt{3}y^3 = (\sqrt{2}x - \sqrt{3}y)(Ax^2 - Bxy + Cy^2)$, then the value of $\sqrt{(A^2 + B^2 + C^2)}$

- A $\sqrt{19}$
- B $\sqrt{11}$
- C $\sqrt{17}$
- D $\sqrt{21}$

Answer: A

SSC Exam Free Videos (Youtube)

70. The cost prices of two articles A and B are in the ratio 4 : 5. While selling these articles, the shopkeeper gains 10% on article A and 20% profit on article B, and the difference in their selling prices is ₹480. Find 300, of the total cost price (in ₹) of both the articles.

- A 1,250

B 1,000

C 900

D 810

Answer: D

71. The value of $2 - \sqrt{\frac{\cot \theta + \cos \theta}{\cot \theta - \cos \theta}}$, when $0^\circ < \theta < 90^\circ$ is equal to:

A $2 + \sec \theta + \tan \theta$

B $2 - \sec \theta + \tan \theta$

C $2 - \sec \theta - \tan \theta$

D $2 + \sec \theta - \tan \theta$

Answer: C

72. If a positive number 'k' when multiplied by 30% of itself gives a number which is 170% more than the number 'k', then the number 'k' is equal to:

A 9

B 5

C 6

D 7

Answer: C

SSC Free Preparation App

73. AB is a chord of a circle with centre O, while PAQ is the tangent at A. R is a point on the minor arc AB. If $\angle BAQ = 70^\circ$, then find the measure of $\angle ARB$.

A 110°

B 125°

C 70°

D 145°

Answer: A

74. A shopkeeper announces a discount of 48% and then by a further discount of 15% what is the final sale price (in Rs, to the nearest rupee) of a sofa costing Rs 29600 and what is the discount (in Rs)?

A 13280, 16517

B 13083, 16517

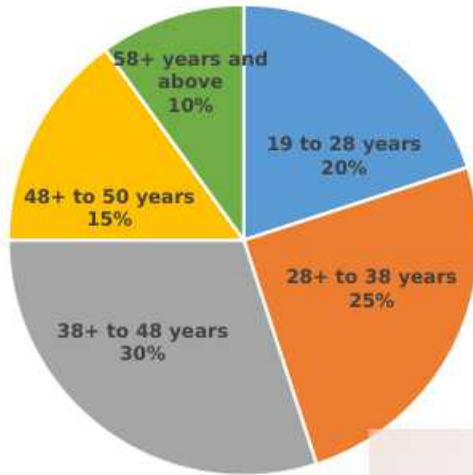
C 16517, 13083

D 16517, 13280

Answer: B

75. The following pie chart shows the distribution of percentage of a certain corporate office employees in various age-groups. Total number of employees of the corporate office = 2500 Study the chart carefully and answer the question that follow .

Pie-Chart presenting the information about the percentage distribution of a certain corporate office employees by their ages.



What is the central angle (in degrees) corresponding to the age groups 38+ to 48 years and 58+ years and above, taken together?

- A 36
- B 144
- C 120
- D 108

Answer: B

Daily Free SSC Practice Set

English Comprehension

76. Select the correct passive voice of the given sentence.
She has read all the plays of Shakespeare.

- A All the plays of Shakespeare are read by her.
- B All the plays of Shakespeare have been read by her.
- C All the plays of Shakespeare had been read by her.
- D All the plays of Shakespeare were read by her.

Answer: B

SSC CGL Free Online Coaching

77. Select the most appropriate ANTONYM of the given word.
Devious

- A** Dishonest
- B** Crooked
- C** Crafty
- D** Sincere

Answer: D

78. Select the most appropriate synonym of the given word.
Threshold

- A** stairs
- B** exit
- C** window
- D** doorway

Answer: D

79. Select the most appropriate **ANTONYM** of the given word.
OCCUPIED

- A** Late
- B** Free
- C** Vast
- D** New

Answer: B

SSC CHSL Previous Question papers (download pdf)

80. Select the option that expresses the given sentence in indirect speech.
"Please allow me to leave now," Ritika said to her teacher.

- A** Ritika requested my teacher to allow her to leave now.
- B** Ritika requested her teacher to allow her to leave then.
- C** Ritika requested her teacher to allow me to leave now.
- D** Ritika requested her teacher to allow me to leave then.

Answer: B

81. Select the option that can be used as a one-word substitute for the given group of words.
A seat for a passenger on a bicycle or motorbike

- A** Pillion
- B** Girdle
- C** Bridle

D Cushion

Answer: A

82. Select the option that expresses the given sentence in passive voice.

You could put your money to good use.

A Your money is being put to good use.

B Your money could have been put to good use.

C Your money could be put to good use.

D Your money has been put to good use.

Answer: C

Free SSC Study Material (18,000 Solved Questions)

83. The following sentence has been split into four segments. Identify the segment that contains a grammatical error.

There have been / three breaks-in / in our society / this month.

A three breaks-in

B this month

C in our society

D There have been

Answer: A

84. The following sentence has been divided into parts. One of them may contain an error.

Select the part that contains the error from the given options. If you don't find any error, mark 'No error' as your answer.

Take care/ for keep/ your valuables safely.

A Take care

B your valuables safely

C for keep

D No error

Answer: C

85. Select the INCORRECTLY spelt word.

A Tenure

B Digonal

C Partner

D Oblique

Answer: B

Latest Job Updates on Telegram - Join here

Downloaded from cracku.in

86. Select the most appropriate option to substitute the underlined segment in the given sentence. If there is no need to substitute it, select 'No substitution required'.

I shall certainly write to you when I shall reach Bengaluru.

- A No substitution required
- B I reach
- C I reached
- D I am reaching

Answer: B

87. Select the option that can be used as a one-word substitute for the given group of words.

One who knows everything

- A Experienced
- B Omniscient
- C Invincible
- D Naïve

Answer: B

88. Select the most appropriate option to fill in the blank.

All the guests were shocked at his _____ laughter.

- A Unrecognised
- B Unrestrained
- C Unresolved
- D Unremarkable

Answer: B

Join SSC Daily Quiz Telegram Group

89. Select the most appropriate meaning of the given idiom.

Easy money

- A Collect someone's cash for them easily
- B Work hard to earn a large salary without telling anyone
- C Have no difficulty in collecting money that is due
- D Make money without much effort, maybe illegally

Answer: D

90. Select the most appropriate option that can substitute the underlined segment in the given sentence. If there is no need to substitute it, select 'No substitution required'.

While the online class was going on, they had to keep their cameras on.

- A** No substitution required
- B** have kept their cameras on
- C** are keeping their camera on
- D** had keep the camera on

Answer: A

91. **Select the most appropriate synonym of the given word.**
Perjury

- A** Melancholy
- B** Frankness
- C** Penury
- D** Falsehood

Answer: D

SSC CGL Free Mock Test

92. **Select the most appropriate meaning of the given idiom.**
To bury the hatchet

- A** To stop talking to someone
- B** To end a quarrel
- C** To bury old things
- D** To fight with someone

Answer: B

93. **The following sentence has been split into four segments. Identify the segment that contains a grammatical error.**
Nowadays, common people take / interest in the manner / in which / they were governed.

- A** they were governed
- B** Nowadays common people take
- C** interest in the manner
- D** in which

Answer: A

94. **Sentences of a paragraph are given below in jumbled order. Arrange the sentences in the correct order to form a meaningful and coherent paragraph.**

- A.** But instead of asking the guest to rest, he said, "I have arranged to take you for Shikar."
- B.** The host welcomed him warmly.
- C.** At last he arrived at the beautiful city.
- D.** Great preparations were made for Amir of Isfahan's journey to Shiraz.

- A** CADB

- B** DCBA
- C** DCAB
- D** BDCA

Answer: B

SSC CGL Previous Papers (DOWNLOAD PDF)

95. The following sentence has been split into four segments. Identify the segment that contains a grammatical error.
He / can have been / more polite / to her.

- A** more polite
- B** He
- C** to her
- D** can have been

Answer: D

Instructions [96 - 100]

In the following passage, some words have been deleted. Read the passage carefully and select the most appropriate option to fill in each blank.

Not a year passes without a controversy over the national sports awards. The debate that (1)_____ every year following the announcement of the (2)_____ often leads to accusations of bias, regionalism and manipulations. (3)_____ to the Sports Minister and Chief Ministers and (4)_____ by the politicians have all become part of the (5)_____.

96. Select the most appropriate option to fill in blank number 1.

- A** rose
- B** arose
- C** rise
- D** arises

Answer: D

97. Select the most appropriate option to fill in blank number 2.

- A** donations
- B** awards
- C** gifts
- D** rewards

Answer: B

25 SSC CHSL Mocks for just Rs. 149

98. Select the most appropriate option to fill in blank number 3.

- A** Illustrations
- B** Representations
- C** Delegations
- D** Exhibitions

Answer: B

99. Select the most appropriate option to fill in blank number 4.

- A** interventions
- B** intersections
- C** interjections
- D** intermissions

Answer: A

100. Select the most appropriate option to fill in blank number 5.

- A** jest
- B** game
- C** sport
- D** line

Answer: B

SSC CGL Tier-2 Previous Papers PDF

SSC CGL Free Mock Test

SSC CGL Previous Papers (DOWNLOAD PDF)

25 SSC CHSL Mocks for just Rs. 149

SSC CGL Tier-2 Previous Papers PDF

SSC CGL Important Questions PDF

1500 + Free Must Solved SSC Questions (With Solutions)

General Science Notes for SSC CGL

Free SSC Study Material (18,000 Solved Questions)

SSC Exam Free Videos (Youtube)

SSC Free Preparation App

Daily Free SSC Practice Set

SSC CGL Free Online Coaching

SSC CHSL Previous Question papers (download pdf)

Free SSC Study Material (18,000 Solved Questions)

Latest Job Updates on Telegram - Join here

Join SSC Daily Quiz Telegram Group