



All rights reserved. No part of this publication may be reproduced, distributed, or transmitted in any form or by any means, electronic, mechanical, photocopying, recording or otherwise, or stored in any retrieval system of any nature without the permission of cracku.in, application for which shall be made to support@cracku.in

SSC GD 3rd Dec 2021 Shift-2

Reasoning

1. In a certain code language, HALT is coded as 164, and MOP is coded as 132. How will GOBLET be coded in that language?

- A 288
- B 334
- C 260
- D 366

Answer: D

SSC GD Free App

2. Select the correct mirror image of the given combination when the mirror is placed to its right side.

R k m S G 5

- A 5 G S m k R
- B 2 G 2 m k R
- C 2 G 2 m k R
- D 2 G 2 m k R

Answer: B

3. Select the number from among the given options that can replace the question mark (?) in the following series.

66, 77, 90, 107, 126, ?, 178

- A 149
- B 136
- C 154
- D 168

Answer: A

4. In a certain code language, 'FILE' is written as 'LIEF' and 'YOUR' is written as 'UORY'.
How will 'MARK' be written in that language?

- A ARKM
- B RAKM
- C ARMK
- D RAMK

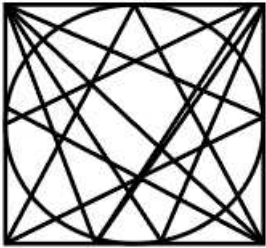
Answer: B

SSC GD Important Questions and Answers PDF

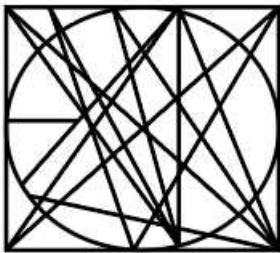
5. Select the option in which the given figure is embedded (rotation is NOT allowed).



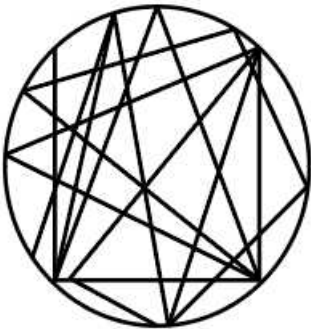
A



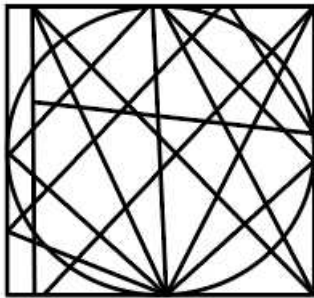
B



C

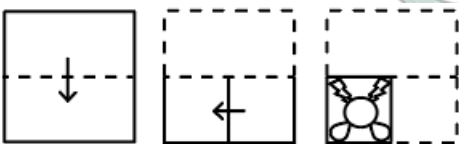


D




Answer: B

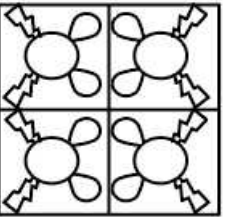
6. The sequence of folding a piece of paper and the manner in which the folded paper has been cut is shown in the following figures. How would this paper look when unfolded?



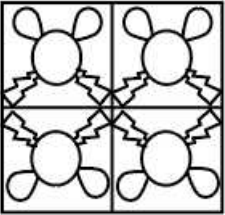
A



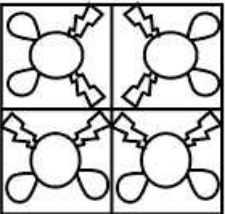
B



C



D



Answer: C

7. Study the given pattern carefully and select the number that can replace the question mark (?) in it.

49 8 73

11 6 29

? 12 58

A 16

B 24

C 6

D 22

Answer: D

SSC GD Syllabus (Download PDF)

8. Select the option that is related to the fourth number in the same way as the first number is related to the second number.

7 : 49 :: ? : 81

A 7

B 6

C 9

D 8

Answer: C

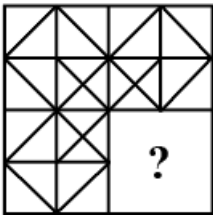
9. Select the option that is related to the third letter-cluster in the same way as the second letter-cluster is related to the first letter-cluster.

DEAL : WVZO :: CARD : ?

- A ZXWI
- B ZXIW
- C XZWI
- D XZIW

Answer: A

10. Select the figure from among the given options that can replace the question mark (?) in the following series (rotation is NOT allowed).



- A
- B
- C
- D

Answer: B

SSC CPO Previous Question papers (download pdf)

11. In a certain code language, 'how are you' is written as 'so me lo', 'you are intelligent' is written as 'the lo me' and 'are they lazy' is written as 'me ca ya'. How will 'how are they' be written in that language?

- A the lo me
- B so lo ca
- C ya ca me
- D so me ca

Answer: D

12. Seven friends, M, N, O, P, Q, R and S, are sitting around a circular table, facing the centre of the table. P and R are the neighbours of N. S is sitting second to the left of N. O is sitting between R and Q.

Who is sitting second to the right of O?

- A M
- B S
- C N
- D Q

Answer: A

13. Select the letter-cluster from among the given options that can replace the question mark (?) in the following series.
NGP, OIS, PKV, ?

- A QMX
- B RNX
- C RMY
- D QMY

Answer: D

SSC MTS Previous Question papers (download pdf)

14. Select the option that is related to the third word in the same way as the second word is related to the first word.
Conceal : Reveal :: Expand : ?

- A Widen
- B Shrink
- C Enlarge
- D Outspread

Answer: B

15. Select the correct option that indicates the arrangement of the given words in the order in which they appear in an English dictionary.

1. Loiter
2. Loiterer
3. Logic
4. Logotype
5. Log

- A 5, 3, 4, 1, 2
- B 5, 4, 3, 1, 2
- C 5, 3, 4, 2, 1
- D 5, 3, 1, 4, 2

Answer: A

16. Four letter-clusters have been given, out of which three are alike in some manner and one is different. Select the letter-cluster that is different.

- A TXBF
- B YCGL
- C NRVZ
- D DHLP

Answer: B

Free SSC Study Material (18,000 Solved Questions)

17. Select the combination of letters that when sequentially placed in the blanks of the given series will complete the series.
P _ _ F I _ _ R O F _ _ P R O _ _ T P R _ _ I T

- A RPITOFITOF
- B ROTPIFOFFI
- C ROTPITFIOF
- D ROTIPFTIOF

Answer: C

18. Select the number from among the given options that can replace the question mark (?) in the following series.
145, 175, 235, 265, 325, ?, 415

- A 380
- B 385
- C 375
- D 355

Answer: D

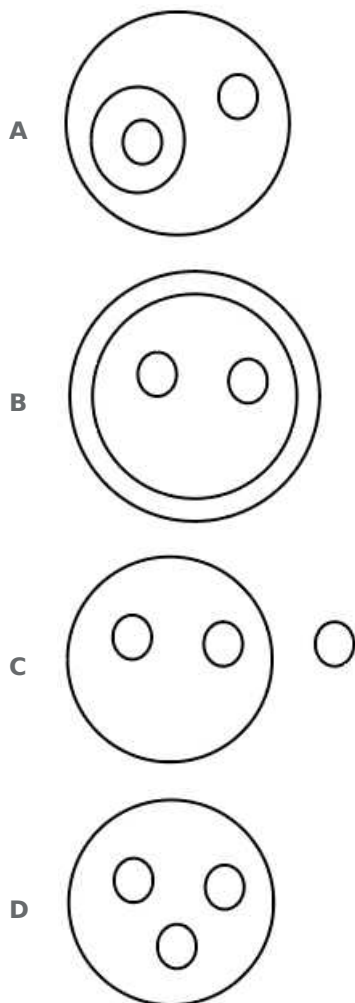
19. L has two children and he is the only son of G, who is the father-in-law of T. T has only one son. T is the mother of P. Q is not the granddaughter of G. P and Q are siblings.
How is T related to Q?

- A Mother
- B Father
- C Sister
- D Brother

Answer: A

SSC CHSL Previous Papers (DOWNLOAD PDF)

20. Select the Venn diagram that best represents the relationship between the following classes.
Living things, Animals, Birds, Dogs



Answer: B

21. Seven workers Alok, Bhushan, Kolin, Dinesh, Ishant, Fatima, and Gorav are sitting in a straight line, all facing the North. Fatima is sitting between Dinesh and Gorav. Bhushan is sitting between Kolin and Alok. Ishant is third to the left of Gorav. Gorav is sitting at one of the corners. Alok is second to the right of Kolin. Who is sitting between Ishant and Fatima?

- A Alok
B Dinesh
C Bhushan
D Gorav

Answer: B

22. If '+' denotes multiplication, ' \div ' denotes subtraction and '-' denotes division, then what is the value of the given expression?

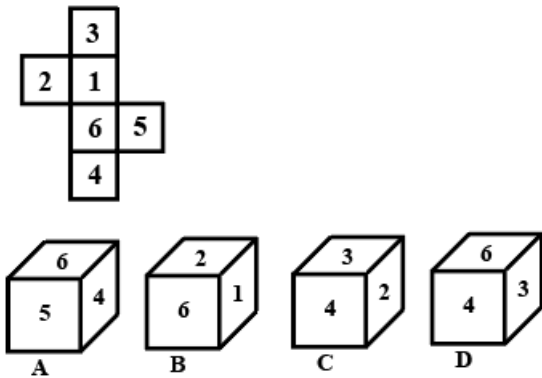
$$25 + 25 \div 50 - 5$$

- A 615
B 165
C 135
D 155

Answer: A

SSC Stenographer Previous Papers (Download PDF)

23. Select the dice that can be formed by folding the given sheet along the lines.



- A Only B
- B Both B and C
- C Only A
- D Both A and D

Answer: B

24. Find the number which when number is added to its 15 times number, it gives 176.

- A 11
- B 16
- C 13
- D 14

Answer: A

25. Read the given statements and conclusions carefully. Assuming that the information given in the statements is true, even if it appears to be at variance with commonly known facts, decide which of the given conclusions logically follow(s) from the statements.

Statements:

All students are doctorate.

All university teachers are doctorate.

Conclusions:

I. Some doctorate are students.

II. Some doctorates are university teachers.

- A Either conclusion I or II follows
- B Only conclusion II follows
- C Both the conclusions follow
- D Only conclusion I follows

Answer: C

SSC GD Constable Previous Papers

General knowledge

26. Which four teams made into the playoffs in IPL 2020?

- A Sunrisers Hyderabad, Rajasthan Royals, Royal Challengers Bangalore, Mumbai Indians
- B Chennai Super Kings, Delhi Capitals, Sunrisers Hyderabad, Royal Challengers Bangalore
- C Delhi Capitals, Kings XI Punjab, Mumbai Indians, Kolkata Knight Riders
- D Mumbai Indians, Sunrisers Hyderabad, Royal Challengers Bangalore, Delhi Capitals

Answer: D

SSC MTS Previous Papers (DOWNLOAD PDF)

27. In November 2019 the NITI Aayog has released a Draft Model Act on Land _____.

- A revenues
- B titling
- C ceiling
- D acquisition

Answer: B

28. On which of the following dates is World AIDS Day observed?

- A July
- B 17 May
- C 1 December
- D 5 September

Answer: C

29. To which of the following states does the 'Khullam' folk dance belong?

- A Jharkhand
- B Mizoram
- C Haryana
- D Chhattisgarh

Answer: B

SSC GD Constable Previous Papers (DOWNLOAD PDF)

30. Which of the following is a planet outside our solar system that usually orbits another star in our galaxy?

- A Mesoplanet
- B Exoplanet
- C Super Earth
- D Haumea

Answer: B

31. The 'Statue of Peace' in the state of _____ was unveiled via video conferencing by Prime Minister Narendra Modi in November 2020.

- A Gujarat
- B Uttar Pradesh
- C Rajasthan
- D Bihar

Answer: C

32. The ocean bodies and the sea contain _____ water.

- A salty
- B sweet
- C sour
- D bitter

Answer: A

SSC CGL Previous Papers (DOWNLOAD PDF)

33. India won _____ medals in total at the 2021 AIBA Youth Men's and Women's World Boxing Championships in Kielce, Poland.

- A 8
- B 9
- C 10
- D 11

Answer: D

34. Vetti was a tax collected in the form of forced labour by the _____ rulers.

- A Nanda
- B Chola
- C Chalukya

D Pallava

Answer: B

35. Which of the following word is not used in lawn tennis

A Deuce

B Smash

C Scoop

D Ace

Answer: C

SSC CGL Free Mock Test (Latest Pattern)

36. Movement of people from one place to another in the country or to a foreign country is called _____.

A migration

B emigration

C transhumance

D immigration

Answer: A

37. In August 2021, _____ opened the first floating ATM in Srinagar on a houseboat at Dal Lake.

A Axis Bank

B State Bank of India

C IDFC Bank

D Bank of Baroda

Answer: B

38. On the basis of which Article of the Constitution of India, is 'Untouchability' abolished, and its practice in any form, forbidden?

A 18

B 19

C 16

D 17

Answer: D

SSC CHSL Free Mock Test (Latest Pattern)

39. According to Section 510 of the Indian Penal Code, the punishment for misconduct in public by a drunken person is punishable with simple imprisonment for a term which may extend to twenty-four hours, or with fine which may extend to ₹ _____, or with both.

- A 500
- B 10
- C 100
- D 1000

Answer: B

40. The rivers _____ and Tapti flow almost parallel to each other but empty themselves in opposite directions.

- A Narmada
- B Krishna
- C Kaveri
- D Brahmaputra

Answer: A

41. In which of the following battles did the East India Company take over Mysore?

- A Battle of Plassey
- B Battle of Buxar
- C Battle of Pollilur
- D Siege of Seringapatam

Answer: A

SSC Stenographer Previous Papers (Latest Pattern)

42. The highest Indian civilian award, Bharat Ratna, was instituted in which of the following years?

- A 1952
- B 1954
- C 1963
- D 1956

Answer: B

43. What is the maximum cost of a project admissible under the business/service sector in the 'Prime Minister's Employment Generation Programme' ('PMEGP')?

- A ₹ 5 lakh
- B ₹ 20 lakh

C ₹ 10 lakh

D ₹ 25 lakh

Answer: C

44. Siraj ud-Daulah succeeded _____ as the Nawab of Bengal in 1756.

A Mir Qasim

B Alivardi Khan

C Mir Jafar

D Murshid Quli Khan

Answer: B

SSC GD Constable Free Mock Test (Latest Pattern)

45. Who among the following actors served a defamation notice to a YouTuber from Bihar, seeking ₹500 crores in damages for allegedly making false and baseless allegations against him in November 2020?

A Akshay Kumar

B Aamir Khan

C Salman Khan

D Ajay Devgan

Answer: A

46. Pit-houses dug into the ground, with steps leading into them were found at the _____ archaeological site.

A Utnur

B Paiyampalli

C Burzahom

D Hallur

Answer: C

47. In December 2020, _____ became the youngest mayor of the Thiruvananthapuram Municipal Corporation.

A Sreekala Nadar

B Asha Prakash

C Arya Rajendran

D Sobha Surendran

Answer: C

SSC MTS Free Mock Test (Latest Pattern)

48. In which income group does India fall on the basis of Gross National Income classified by the World Bank?

- A Low-income group
- B Lower-middle income group
- C Upper-middle income group
- D High income group

Answer: B

49. Oral Rehydration Solution (ORS) is recommended to a person suffering from ____.

- A wheezing
- B diarrhoea
- C conjunctivitis
- D skin rashes

Answer: B

50. The ____, mostly used by snake charmers, is a wind instrument made of two small bamboo pipes fixed in a hollow gourd.

- A been
- B khartal
- C gharah
- D deru

Answer: A

SSC CPO Free Mock Test (Latest Pattern)

Quantitative Ability

51. A trader earns a profit of 20% by selling an article after giving a discount of 20% on the marked price of the article. If the cost price of the article is ₹448, then its marked price (in ₹) is:

- A 600
- B 672
- C 640
- D 652

Answer: B

SSC GD Free Videos (Youtube)

52. When the speed of a car is increased by 25%, it takes 24 minutes less to cover the same distance. What is the time (in hours) taken to cover the same distance at the actual speed?

- A $\frac{1}{12}$
- B 3
- C $\frac{1}{23}$
- D 2

Answer: D

53. The cost prices of two articles are in the ratio 4 : 5. Selling the first article at 10% profit and the second at 20% profit will give the difference of ₹480 in their selling prices. The sum of the cost price of the two articles is:

- A ₹2,500
- B ₹2,800
- C ₹3,200
- D ₹2,700

Answer: D

54. Ram bought an article for ₹6,800 and spent 700 on its repairs. He marked his article at 8% above the overall cost price. He sold the article for ₹6,196.50 after giving two successive discounts of 10% and $x\%$. Find the value of x .

- A 18
- B 12
- C 10
- D 15

Answer: D

SSC GD Free App

55. A sold an article to B at 24% profit. B sold it to C at 30% profit. If B's profit was ₹72.60 more than that of A, then how much (in ₹) did B pay for it?

- A 781
- B 784
- C 660
- D 682

Answer: D

56. A and B can complete a work in 12 days and 18 days, respectively. They worked together for 4 days after which B was replaced by C and the remaining work was completed by A and C in the next 4 days. In how many days will C alone complete one-third of the same work?

- A 8 days
- B 12 days

- C 9 days
- D 10 days

Answer: B

57. The sum of the length, the breadth and the height of a cuboid is 18 cm. If the length of its diagonal is 13 cm, then the total surface area of the cuboid is:

- A 154 cm^2
- B 155 cm^2
- C 150 cm^2
- D 145 cm^2

Answer: B

SSC GD Important Questions and Answers PDF

58. The average score of nineteen students in a computer examination is 74. It was detected that while working out the average by mistake the marks secured by one student was recorded as 65 in place of 56. What is the correct average score (correct to one decimal place)?

- A 73.5
- B 73.7
- C 74
- D 75.9

Answer: A

59. Sudha gains 30% by selling an article for ₹91. If she sells it for ₹78.75, then what will be her percentage loss/gain?

- A Gain, $11\frac{1}{9}$
- B Loss, $11\frac{1}{9}$
- C Gain, $12\frac{1}{2}$
- D Loss, $12\frac{1}{2}$

Answer: C

60. Sushma has invested 40% more than Reshma. Reshma has invested 30% less than Divya. If the amount invested by Divya is ₹6,000, then the amount invested by Sushma is:

- A ₹5,880
- B ₹5,550
- C ₹4,850
- D ₹4,520

Answer: A

SSC GD Syllabus (Download PDF)

61. The sum and the difference of the LCM and HCF of two positive numbers are 148 and 140, respectively. If one number is 16, then the other number is

- A 38
- B 34
- C 36
- D 46

Answer: C

62. Find the compound interest on ₹20,000 at 9% per annum for one year and 4 months, compound annually.

- A ₹2,454
- B ₹2,654
- C ₹2,540
- D ₹2,450

Answer: A

63. A sum of ₹8,400 is divided between A and B such that A's share at the end of 2 years is equal to B's share at the end of $2\frac{2}{3}$ years at 15% p.a., interest compounded 8-monthly. What is A's share (in ₹) in the given sum?

- A 4,450
- B 4,400
- C 4,550
- D 4,500

Answer: B

SSC CPO Previous Question papers (download pdf)

64. The value of $36 \div 18$ of $3 \times 2 + 8 \div 4$ of $2 \times 5 - 5 \div 10 \times 2$ is:

- A $5\frac{1}{3}$
- B $1\frac{1}{3}$
- C $6\frac{1}{12}$
- D $9\frac{1}{6}$

Answer: A

65. The boys and girls in a school are in the ratio 7: 5. If 60% of the boys and 40% of the girls are aged 14 years and below the age of 14 years and the number of students above the age of 14 years is 870, then the total number of students in the school is:

- A 1750
- B 1850
- C 1800
- D 1600

Answer: C

66. The value of $\frac{10}{21} \div 1\frac{1}{14}$ of $3 - \frac{5}{3} \times \frac{1}{10} + \frac{9}{28} \div \frac{3}{7} \frac{6}{5}$ is:

- A $\frac{4}{15}$
- B $\frac{11}{15}$
- C $\frac{29}{40}$
- D $\frac{1}{10}$

Answer: C

SSC MTS Previous Question papers (download pdf)

67. A spherical ball of radius 3 cm, is immersed in water contained in a vertical cylinder of radius 5 cm. Assuming the water covers the ball completely, what is the rise in the water level (in cm, up to two decimal places)?

- A 1.75
- B 1.44
- C 2.25
- D 3.14

Answer: B

68. The incomes of A and B are in the ratio 8 : 11, and the ratio of their savings is 7 : 9. If the expenditure of A and B is ₹25,000 and ₹35,000, respectively, then what is the income (in ₹) of B?

- A 42,900
- B 44,000
- C 39,600
- D 38,500

Answer: B

69. The average weight of 5 persons increases by 2.8 kg when a new person comes in place of one of them weighing 38 kg. The weight of the new person is:

- A 48 kg
- B 52 kg

C 44 kg

D 50 kg

Answer: B

Free SSC Study Material (18,000 Solved Questions)

70. Pipes A and B can fill a tank in 12 h and 18 h, respectively, whereas pipe C can empty the full tank in 8 h. A and B are opened for $4\frac{1}{2}$ h and then closed. C alone will empty the tank in (in h):

A $5\frac{1}{4}$

B $9\frac{1}{2}$

C 9

D 5

Answer: D

71. What sum of money at compound interest will amount to ₹30,051 in 3 years if the rate of interest is 5% for the 1st year, 6% for the 2nd year and 8% for the 3rd year?

A ₹30,000

B ₹25,000

C ₹26,000

D ₹28,000

Answer: B

72. A train takes 1 hour and 12 minutes to cover a certain distance at a speed of 80 km/h. If the speed is increased by 25%, then how much time (in hours) will it take to cover $\frac{25}{3}$ of the distance?

A 8

B 4

C 10

D 6

Answer: A

SSC CHSL Previous Papers (DOWNLOAD PDF)

73. The pass percentage in an examination is 35% of the total marks. A student scored 390 marks and was declared fail by 65 marks. The total marks of the examination must be:

A 1000

B 1600

C 1200

D 1300

Answer: D

74. Two numbers are in the ratio of 2 : 3. The product of their LCM and HCF is 7350. The difference between the two numbers is:

A 35

B 25

C 45

D 15

Answer: A

75. Class X has 5 sections which have 40, 50, 50, 60 and 60 students, respectively. The pass per cent of these sections are 80%, 76 %, 64%, 65% and 70%, respectively. The pass per cent of the entire class X (correct to two decimal places) is:

A 70.38%

B 71.83%

C 72.81%

D 69.73%

Answer: A

SSC Stenographer Previous Papers (Download PDF)

English

76. The following sentence has been split into four segments. Identify the segment that contains a grammatical error.
How many / languages do / most children / in India known?

A most children

B in India known

C How many

D languages do

Answer: B

SSC GD Constable Previous Papers

77. Select the most appropriate option to fill in the blank.
Health cannot be _____ at any cost.

A deserted

B rejected

C despised

D neglected

Answer: D

78. Select the most appropriate meaning of the given idiom.
In a fix

- A In a closed space
- B Under repairs
- C In a difficult situation
- D Under observation

Answer: C

79. Select the most appropriate option to fill in the blank.
Giant pandas are black-and-white Chinese bears that are on the _____ of extinction.

- A verge
- B peak
- C line
- D margin

Answer: A

SSC MTS Previous Papers (DOWNLOAD PDF)

80. Select the most appropriate ANTONYM of the given word.
Ally

- A Friend
- B Enemy
- C Partner
- D Associate

Answer: B

81. Select the most appropriate option that can substitute the underlined segment in the given sentence. If there is no need to substitute it, select 'No substitution required'.

I play football yesterday.

- A playing
- B I played
- C No substitution required
- D I been playing

Answer: B

82. Select the option that can be used as a one-word substitute for the given group of words.
Causing a mood of gloom and depression

- A Devastated
- B Desolate
- C Dismal
- D Apprehensive

Answer: C

SSC GD Constable Previous Papers (DOWNLOAD PDF)

83. Select the most appropriate option that can substitute the underlined word in the given sentence.
As we all are aware, silk is dedicated from the cocoons of mulberry silkworms.

- A decimated
- B decorated
- C derived
- D deflected

Answer: C

84. Select the most appropriate meaning of the given idiom.
Open-ended

- A Having no planned ending
- B Never ending
- C Ending is happy
- D Ending is twisted

Answer: A

85. Select the INCORRECTLY spelt word.

- A Snatch
- B Batch
- C Catch
- D Yatch

Answer: D

SSC CGL Previous Papers (DOWNLOAD PDF)

86. Select the option that can be used as a one-word substitute for the given group of words.
A hole or tunnel dug by a small animal to live in

- A Burrow
- B Den

C Shed

D Cave

Answer: A

87. Select the most appropriate synonym of the given word.
Crust

A Root

B Core

C Kernel

D Shell

Answer: D

88. Select the most appropriate ANTONYM of the given word.
Overlook

A Ignore

B Notice

C Neglect

D Visualize

Answer: B

SSC CGL Free Mock Test (Latest Pattern)

89. Select the INCORRECTLY spelt word.

A Writting

B Regulate

C Occur

D Develop

Answer: A

90. Select the most appropriate option to fill in the blank.
He was fined for _____ traffic rules.

A refusing

B omitting

C obeying

D violating

Answer: D

91. The following sentence has been split into four segments. Identify the segment that contains a grammatical error.
Why do they / keep talking on / about money / all the time?

- A Why do they
- B keep talking on
- C about money
- D all the time

Answer: B

SSC CHSL Free Mock Test (Latest Pattern)

92. Select the most appropriate option that can substitute the underlined segment in the given sentence. If there is no need to substitute it, select 'No substitution required'.

The three friends spent over an hour discussing the problem with their teacher.

- A having discussion on
- B discussing about
- C No substitution required
- D discussing on

Answer: C

93. The following sentence has been split into four segments. Identify the segment that contains a grammatical error.

Raju was / a little boy / who were born / in a poor family.

- A in a poor family
- B Raju was
- C a little boy
- D who were born

Answer: D

94. Select the most appropriate synonym of the given word.

Disgust

- A Desire
- B Doubt
- C Dislike
- D Danger

Answer: C

SSC Stenographer Previous Papers (Latest Pattern)

95. Select the option that can be used as a one-word substitute for the given group of words.

Science of heredity

- A Orthopedics
- B Pathology
- C Genealogy
- D Genetics

Answer: D

Instructions [96 - 100]

In the following passage, some words have been deleted. Read the passage carefully and select the most appropriate option to fill in each blank.

Joseph was always prepared. His motto was, 'Never throw anything out, you (1) _____ know when it might come in (2) _____. ' His bedroom was totally (3) _____ with flat bicycle tyres, empty boxes, (4) _____ basket balls and bent tennis racquets (5) _____ leaving any space to get in the door.

96. **Select the most appropriate option to fill in blank number 1.**

- A would
- B never
- C often
- D should

Answer: B

97. **Select the most appropriate option to fill in blank number 2.**

- A nearby
- B handy
- C close
- D ready

Answer: B

SSC GD Constable Free Mock Test (Latest Pattern)

98. **Select the most appropriate option to fill in blank number 3.**

- A confused
- B cluttered
- C splashed
- D dislocated

Answer: B

99. **Select the most appropriate option to fill in blank number 4.**

- A wearied

- B** reduced
- C** deflated
- D** drained

Answer: C

100. Select the most appropriate option to fill in blank number 5.

- A** slightly
- B** barely
- C** merely
- D** simply

Answer: B

SSC MTS Free Mock Test (Latest Pattern)

SSC GD Free App

SSC GD Important Questions and Answers PDF

SSC GD Syllabus (Download PDF)

SSC CPO Previous Question papers (download pdf)

SSC MTS Previous Question papers (download pdf)

Free SSC Study Material (18,000 Solved Questions)

SSC CHSL Previous Papers (DOWNLOAD PDF)

SSC Stenographer Previous Papers (Download PDF)

SSC GD Constable Previous Papers

SSC MTS Previous Papers (DOWNLOAD PDF)

SSC GD Constable Previous Papers (DOWNLOAD PDF)

SSC CGL Previous Papers (DOWNLOAD PDF)

SSC CGL Free Mock Test (Latest Pattern)

SSC CHSL Free Mock Test (Latest Pattern)

SSC Stenographer Previous Papers (Latest Pattern)

SSC GD Constable Free Mock Test (Latest Pattern)

SSC MTS Free Mock Test (Latest Pattern)

SSC CPO Free Mock Test (Latest Pattern)

SSC GD Free Videos (Youtube)